


Name \_\_\_\_\_

# \_\_\_\_\_

# 2<sup>nd</sup> Grade Homework

March 16-20, 2026



## Monday

- Reading- Practice reading "Grace for President" to an adult.  
Work on your book report.
- Spelling- Do the attached worksheet page 1.
- English- Do the attached worksheet page 1.
- English- Do the attached worksheet page 1.

## Tuesday

- Reading- Practice reading "Grace for President" to an adult.  
Practice your presentation for you book report. It is due tomorrow.
- Spelling- Do the attached worksheet page 2.
- English- Do the attached worksheet page 2.
- Math- Do the attached worksheet page 2.

## Wednesday

- Reading- Practice reading "Grace for President" to an adult.
- Spelling- Do the attached worksheet page 3.
- English- Do the attached worksheet page 3.

## Thursday


- Reading- Practice reading "Grace for President" to an adult.  
Answer the questions in complete sentences.
- Math- Do the attached worksheet page 4.

# The Weekly Bulletin

March 16-20, 2026


Week 28

Subject	Unit		Test
Reading	5.4	"Grace for President"	Friday
English	5.4	Possessive and Reflexive Pronouns	Thursday
Spelling	5.4	Variant Vowels: /ô/ a, aw, au, augh, al, ough	Thursday
Math	Chapter 12B	Telling Time	Next Wednesday March 18
Science		The Changing Earth	Thursday, April 16
Religion		Mass-Part 2	March 26



# The Changing Earth

## Chapter 3



### Lesson 1- What are some kinds of land and water?

- Most of Earth is covered with **water**.
- **landform**- a natural feature on Earth
- **island**- land with water all around it
- **valley**- low land between mountains or hills
- **hills**- land that rises above the land around it
- **mountain**- highest kind of land
- **mountain range**- a group of mountains
- **plain**- flat land
- **river**- a large stream of flowing water, most are fresh water
- **lake**- a body of water with land all around it, most are fresh water
- **ocean**- the largest body of water, made of salt water
- **glacier**- a large body of moving ice, most are fresh water

### Lesson 2- What changes land?

#### Quick Changes

- **earthquakes**- Earthquakes can cause land to crack.
- **volcanoes**- Volcanos can erupt and send gas, ash, and other materials into the air that can cover the land.

#### Slow Changes

- **weathering**- when water, ice, or wind **breaks down** rocks into small pieces
- **erosion**- when wind, water, ice, or other causes **move** rocks and soil.

### Lesson 3-What is a fossil?

- **fossil**- a print or part of a plant or animal that lived long ago
- **extinct**- plants and animals that no longer live on Earth  
ex. Dinosaurs are extinct.



## Spelling Words

ball  
small  
paw  
jaw  
pause  
sauce  
taught  
chalk  
walk  
sought  
new  
fruit  
city  
own  
read

## Language Arts Study Guide

Lesson 5.4  
"Grace for President"

### Comprehension Skills

- make inferences
- make predictions
- point of view
- suffixes

### Phonics

(variant vowels)  
aw, au, augh, al, ough

### Grammar

possessive and reflexive  
pronouns

### High Frequency Words

city  
father  
mother  
o'clock  
own  
questions  
read  
searching  
sure  
though

### Reading Vocabulary

champion- winner

determined- decided

issues- topics that are talked about

promises- things you tell people you will definitely do

responsibility- a duty

rights- things the law says you can do or have

volunteered- offered to do something

votes- choices made in an election

Name: \_\_\_\_\_ # \_\_\_\_\_ HR: \_\_\_\_\_

**2<sup>nd</sup> Grade Mass (Part 2) Test Study Guide**  
(Multiple Choice and Fill-In-Blank)  
Test-Thursday, March 26th

1. Jesus told his disciples to remember what he did at the Last Supper and to celebrate this special meal again and again.
2. Jesus said, "Do this in memory of me".
3. The special table which is the center of the Liturgy of the Eucharist is the altar.
4. The Liturgy of the Eucharist is the part of Mass in which the bread and wine become the Body and Blood of Jesus Christ.
5. The Mass is a sacrifice. A sacrifice is an offering of a gift to God.
6. Jesus' life, death, and resurrection are remembered and made present in every Mass.
7. The Eucharistic Prayer is the center of the Mass and the Church's greatest prayer of praise and thanksgiving.
8. It is Jesus Christ himself who acts through the priest and offers the Eucharistic sacrifice.
9. The Consecration is the part of the Eucharistic Prayer that Jesus becomes truly present in the bread and wine.
10. Through the power of the Holy Spirit the priest says and does what Jesus said and did at the Last Supper.
11. Jesus Christ is truly present in the Eucharist. We call this the Real Presence.
12. The changing of the bread and wine into the Body and Blood of Christ is called transubstantiation.
13. The Concluding Rites end the celebration of the Mass.

14. The priest gives us a  blessing  at the end and sends us out to share God's love with others.
15. Jesus sent his disciples out to continue his  work . He wants  us  to continue doing his work.
16. The Eucharist helps us become  stronger  disciples of Jesus.

**The Liturgy of the Eucharist includes:**

- Preparation of the  Gifts
- Prayer over the  Offerings
- Eucharistic  Prayer
- Communion  Rite

Name: \_\_\_\_\_

Date: \_\_\_\_\_

## Lesson 5.4

### Word Unscramble

Unscramble the words by writing the letters in the correct order in the space provided.

- 1) wap \_\_\_\_\_
- 2) gtuath \_\_\_\_\_
- 3) icyt \_\_\_\_\_
- 4) esuca \_\_\_\_\_
- 5) aerd \_\_\_\_\_
- 6) wja \_\_\_\_\_
- 7) uoshtg \_\_\_\_\_
- 8) mlasl \_\_\_\_\_
- 9) ewn \_\_\_\_\_
- 10) seaup \_\_\_\_\_
- 11) alkw \_\_\_\_\_
- 12) tufir \_\_\_\_\_
- 13) lbal \_\_\_\_\_
- 14) hklca \_\_\_\_\_
- 15) now \_\_\_\_\_

# Reflexive pronouns

Grade 2 Pronouns Worksheet

*Hint:*  
*me - myself,*  
*we - ourselves.*

Match the pronouns.

them

you (plural)

us

it

her

him

you

me

herself

myself

itself

yourselves

yourself

ourselves

themselves

himself

Name: \_\_\_\_\_

Date: \_\_\_\_\_

# Quarter To, Quarter Past, & Half Past

Directions: Read the time and write it on the lines using the phrase half past, quarter to, or quarter past. An example is done for you.

example

2:45

quarter to three

A. 10:15

B. 5:15

C. 3:30

D. 3:45

E. 11:15

F. 12:45

G. 4:15

H. 2:30

I. 9:45

J. 7:30


Name: \_\_\_\_\_

Date: \_\_\_\_\_




# Tell the Time


Directions: Write the time shown on each clock.




\_\_\_\_\_




\_\_\_\_\_




\_\_\_\_\_




\_\_\_\_\_




\_\_\_\_\_




\_\_\_\_\_




\_\_\_\_\_




\_\_\_\_\_




\_\_\_\_\_



\_\_\_\_\_



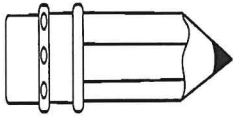
\_\_\_\_\_



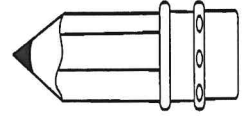
\_\_\_\_\_

Name: \_\_\_\_\_

# \_\_\_\_\_



### Spelling Homework



Write your words three times each.

1. \_\_\_\_\_

2. \_\_\_\_\_

3. \_\_\_\_\_

4. \_\_\_\_\_

5. \_\_\_\_\_

6. \_\_\_\_\_

7. \_\_\_\_\_

8. \_\_\_\_\_

9. \_\_\_\_\_

10. \_\_\_\_\_

11. \_\_\_\_\_

12. \_\_\_\_\_

13. \_\_\_\_\_

14. \_\_\_\_\_

15. \_\_\_\_\_

## Identify reflexive pronouns

### Grade 2 Pronouns Worksheet

Circle the pronoun and draw an arrow to the word it refers to.

*Hint:*

*The teacher wrote that book **herself**.*

1. The mechanic fixed the car himself.
2. The children played quietly by themselves.
3. We looked at new houses ourselves.
4. Some vacuum cleaners work all by themselves.
5. The boy himself was scared.
6. The lights won't turn off by themselves.
7. I made this soup myself.
8. Your mom and you are entering yourselves in the dancing contest.
9. The rose protects itself by closing its petals at night.
10. She made her dress herself.





Name \_\_\_\_\_

# Chapter 12B



## Homework Review

Write the time on the digital clock

1.




2.





Write the time or draw the hands to show the time.  
Then write the time before or after the hour.

3.



quarter to \_\_\_\_\_

4.



half past \_\_\_\_\_

Name \_\_\_\_\_

Choose the best answer. Write the letter on the line.

\_\_\_\_\_ 5. This clock shows the time Mar has lunch.  
What time does the clock show?

- A. 11:45
- B. 11:00
- C. 12:45
- D. 12:00



\_\_\_\_\_ 6. This clock shows the time school is over.  
What time does the clock show?

- A. 12:00
- B. 12:10
- C. 2:00
- D. 2:10

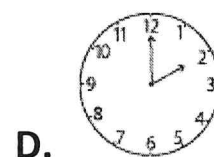
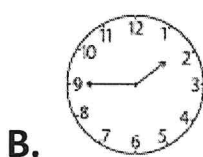


\_\_\_\_\_ 7. This clock shows the time Jan goes to bed.  
What time does the clock show?

- A. 4:40
- B. 8:20
- C. 9:20
- D. 9:30



\_\_\_\_\_ 8. Which clock shows 1:45?



Name: \_\_\_\_\_

#: \_\_\_\_\_

## Spelling Practice Test

Have someone call out your spelling words and take a spelling practice test. Make up a sentence using at least three of your spelling words. Use correct capitalization and punctuation.

1. \_\_\_\_\_

2. \_\_\_\_\_

3. \_\_\_\_\_

4. \_\_\_\_\_

5. \_\_\_\_\_

6. \_\_\_\_\_

7. \_\_\_\_\_

8. \_\_\_\_\_

9. \_\_\_\_\_

10. \_\_\_\_\_

11. \_\_\_\_\_

12. \_\_\_\_\_

13. \_\_\_\_\_

14. \_\_\_\_\_

15. \_\_\_\_\_

16. \_\_\_\_\_

\_\_\_\_\_

Name \_\_\_\_\_

## Reflexive and Possessive Pronouns

Circle the possessive pronouns in the sentences.

ex. my your his her

Underline the reflexive pronouns.


ex. myself yourself himself herself

1. Jamie folded his pile of laundry all by himself.
2. Make sure you buy something for yourself on your vacation.
3. The students behaved themselves in their classroom.
4. I prefer reading my books by myself.
5. The dog was driving itself crazy by chasing its tail.
6. Can you reach your book that yourself?
7. Dad woke himself when he snored during his nap.
8. I cut myself with my scissors.
9. The girls want to practice their song by themselves.
10. Your skates will not tie themselves.

Name \_\_\_\_\_

## Identify Two-Dimensional Shapes

Polygons are flat, or two-dimensional, closed figures with straight sides.



### Types of Polygons



A triangle has 3 sides and 3 angles.



A quadrilateral has 4 sides and 4 angles.

Rectangles and squares are quadrilaterals.



A pentagon has 5 sides and 5 angles.




A hexagon has 6 sides and 6 angles.

### Not Polygons

A circle is not a polygon because it has curved sides.




This shape is not a polygon because it is open.



### MORE PRACTICE

If the shape is a polygon, write its name.  
If it is not a polygon, write *not a polygon*.

1.



\_\_\_\_\_

2.



\_\_\_\_\_

4

## HOMWORK

Write the name of the polygon.

1. This polygon has 2 fewer sides than a pentagon.

\_\_\_\_\_

2. This polygon has 3 more angles than a triangle.

\_\_\_\_\_

Complete the table.

3.

Name of Polygon	Number of Sides	Number of Angles
triangle		
	4	
		5
hexagon		

### Problem Solving

4. Jeff sees this sign near his school.  
What shape is the sign?



The sign is a \_\_\_\_\_.

### Write About It

5. How do you decide whether or not a shape is a polygon?

\_\_\_\_\_

\_\_\_\_\_

\_\_\_\_\_

Name \_\_\_\_\_

**Reading Comprehension**  
**Lesson 5.4**  
**Homework**

Answer the questions in a complete sentence.

1. Why did Grace decide that she wanted to be president?

---

---

2. Why did Grace's heart sink when she found out that she would be running against Thomas?

---

---

3. Why wasn't Thomas worried about winning?

---

---

4. Why did Sam vote for Grace?

---

---

5. What could Thomas have done to win the election?

---

---