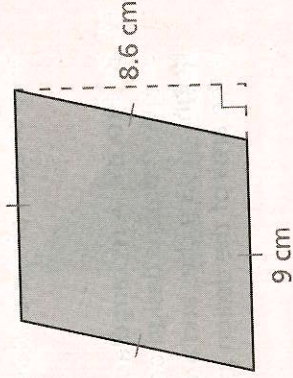
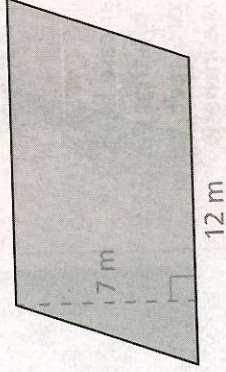
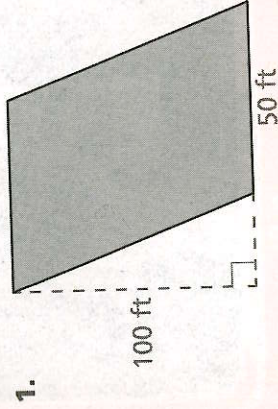


Name: _____

7-1 Additional Practice

In 1–6, find the area of each parallelogram or rhombus.



4. Rhombus

$$b = 30 \text{ m}$$

$$h = 15.5 \text{ m}$$

5. Parallelogram

$$b = 18 \text{ in.}$$


$$h = 2\frac{1}{2} \text{ in.}$$

6. Parallelogram

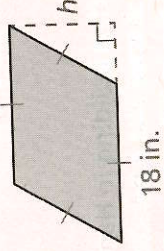
$$b = 20 \text{ ft}$$

$$h = 3 \text{ yd}$$

7. The area of the parallelogram is 105 cm^2 .
What is the base of the parallelogram?



8. The area of the rhombus is 216 in.^2 .
What is the height of the rhombus?



9. Benjamin's garden is shaped like a rhombus.
The area of his garden is 336 square feet .
The height of the rhombus that represents
his garden is 16 feet . What is the base of
the rhombus?

10. A rhombus has a base of 5.2 meters and
a height of 4.5 meters . The rhombus is
divided into two identical triangles.
What is the area of each triangle?



TUTORIAL

Scan for
Multimedia