

Third Grade E-Learning Days 1-5

There are two options:

One web based

One Non-Web Based


Students will have just 3 days after the closure to turn in the work.

(as per Hampton School District)

Day One Web Based ELA and Math

iReady Personalized Pathway (30-40 Minutes)

- Log into iReady and complete one math and one ELA lesson on your personal pathway.
- How do I login to iReady?
 - Click the link below to go to your ClassLink page.
 - <https://login.classlink.com/my/hamptonsc>
 - Once logged into ClassLink, select the iReady icon.



- Complete one Math iReady lesson under “My Path”
- Complete one ELA iReady lesson under “My Path”



Day 1 Non-Web Based ELA

Please write all answers on notebook paper to turn in (within 3 days)

SUMMARIZING

THE PICNIC SHOCK



The brown bear had just woken up after a long winter hibernation. He hadn't eaten for months, and he was absolutely starving! He left the comfort of his dark cave and wandered outside into the sunlight. The bear immediately smelled a delicious scent wafting through the air. He could almost taste the sausages and steak as he followed his nose towards the smell. Nearby, a family was enjoying their picnic, unaware that the bear was watching them from the bushes. Without warning, the bear leaped from his hiding place and barrelled towards the family. Chaos erupted as everyone started screaming and running around. The terrified family scrambled to get out of the bear's way. Little did they know, they had nothing to fear. The bear made a direct beeline for the warm sausages sizzling away on the barbeque. The family watched in shock as the enormous bear proceeded to feast on the range of cooked meat before happily licking his lips and strolling back into the bushes where he came from.

Summarize the story using the prompts to help you

Who was in the story?	Where does the story take place?
What was the problem in the story?	How was the problem resolved?

Summarize the story in one sentence

SUMMARIZING GRAPHIC ORGANIZER

Who	When
Where	What
Why	How
Resolution	

Day 1 Non-Web Based Math

Please write all answers on notebook paper to turn in (within 3 days)

Daily Word Problem

A blue jacket has a price tag that says \$84.

A sign above the rack says:

SALE TODAY!
All Jackets \$45 off

What is the price of the blue jacket?

Show your work.

answer: _____



Addition

Find the sums.

a.
$$\begin{array}{r} 72 \\ + 19 \\ \hline \end{array}$$

b.
$$\begin{array}{r} 46 \\ + 27 \\ \hline \end{array}$$

c.
$$\begin{array}{r} 14 \\ + 33 \\ \hline \end{array}$$

d.
$$\begin{array}{r} 83 \\ + 36 \\ \hline \end{array}$$

e.
$$\begin{array}{r} 50 \\ + 57 \\ \hline \end{array}$$

f.
$$\begin{array}{r} 67 \\ + 8 \\ \hline \end{array}$$

g.
$$\begin{array}{r} 56 \\ + 65 \\ \hline \end{array}$$

h.
$$\begin{array}{r} 44 \\ + 46 \\ \hline \end{array}$$

i.
$$\begin{array}{r} 5 \\ + 29 \\ \hline \end{array}$$

j.
$$\begin{array}{r} 38 \\ + 27 \\ \hline \end{array}$$

k.
$$\begin{array}{r} 99 \\ + 99 \\ \hline \end{array}$$

l. Sam has 29 books.
Jan has 44 books.
How many books do they have altogether? _____

m. Nate has 47 chapter books.
He buys 13 more.
How many chapter books does he have in all? _____



Day 1 Science and Social Studies (nonWeb Based)

Write your answers on notebook paper and turn in within 3 days.

States of Matter

List the solids, liquids, and gases in each picture.

Solids - _____

Liquids - _____

Gases - _____



Solids - _____

Liquids - _____

Gases - _____



Solids - _____

Liquids - _____

Gases - _____



Name: _____

Where I Live

House number: _____

Street: _____

Town or city: _____

County: _____

State: _____

Country: _____

Continent: _____

Hemispheres: _____ and _____

Planet: _____


Draw a picture of your home.

Draw a map of your state.

Day 2 Web Based ELA and Math

iReady Personalized Pathway (30-40 Minutes)

- Log into iReady and complete one math and one ELA lesson on your personal pathway.
- How do I login to iReady?
 - Click the link below to go to your ClassLink page.
 - <https://login.classlink.com/my/hamptonsc>
 - Once logged into ClassLink, select the iReady icon.



- Complete one Math iReady lesson under “My Path”
- Complete one ELA iReady lesson under “My Path”



Day 2 Non-Web Based ELA

Please write all answers on notebook paper to turn in (within 3 days)

Name: _____

The Strange Star

By Nikki Aksamit

Rosie loved watching the night sky. It shined with so many stars.

Sometimes, she would climb onto Papa's shoulders. She'd feel like a princess, sitting closer to those stars.

One afternoon, Papa said, "We're going to the beach! Won't that be fun?"

Rosie wasn't sure. "Will my stars be there, too?"

"Maybe," Papa said.

So they went to the beach. But it was foggy that night – no stars in sight.

"Let's see what happens tomorrow," Papa said.

"Okay..." Rosie frowned.

The next morning, they went back to the beach and Rosie gathered seashells.

Rosie found something strange. It looked like a big, orange, bumpy star. Had it fallen from the sky? And why wasn't it glowing?

"It's not a star," Papa smiled. "It's a starfish. It lives in the ocean."

Rosie put the starfish in the ocean. They watched the waves wash it back home.

Then Rosie looked for more starfish. She liked stars AND starfish.



Name: _____

The Strange Star

By Nikki Aksamit

1. When does Rosie find a starfish?

- a. at the beach
- b. at night
- c. in her backyard
- d. in the morning

2. What did Rosie do right after she found a starfish?

- a. She gathered shells.
- b. She climbed on papa's shoulders.
- c. She went to the beach.
- d. She put the starfish in the ocean.

3. What did Rosie do right before she found a starfish?

- a. She looked up in the night sky.
- b. She collected seashells.
- c. She looked for more starfish.
- d. She watched the waves take the starfish away.

4. When Papa first took Rosie to the beach at night, she didn't see any stars. Why?

5. About how old do you think Rosie is? How can you tell?

6. Think up another creative title for this story.



Day 2 Non-Web Based Math

Please write all answers on notebook paper to turn in (within 3 days)

Monster Math


a.
$$\begin{array}{r} 67 \\ - 49 \\ \hline \end{array}$$



b.
$$\begin{array}{r} 30 \\ - 21 \\ \hline \end{array}$$

c.
$$\begin{array}{r} 95 \\ - 74 \\ \hline \end{array}$$

d.
$$\begin{array}{r} 84 \\ - 68 \\ \hline \end{array}$$



e.
$$\begin{array}{r} 42 \\ - 39 \\ \hline \end{array}$$

f.
$$\begin{array}{r} 52 \\ - \quad 6 \\ \hline \end{array}$$

g.
$$\begin{array}{r} 58 \\ - 43 \\ \hline \end{array}$$



h.
$$\begin{array}{r} 84 \\ - 58 \\ \hline \end{array}$$

Daily Word Problem

Miss Becker baked a dozen chocolate chip cookies. She also made 10 sugar cookies. Miss Becker ate 1 cookie and her son ate 2 cookies. How many cookies does Miss Becker have now?

Show your work.

answer: _____



Day 2 Science and Social Studies (nonWeb Based)

Write your answers on notebook paper and turn in within 3 days.

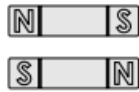
Name: _____

Magnetic Attraction

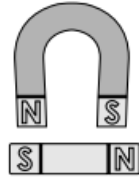
Tell whether each pair of magnets will **attract** or **repel**.



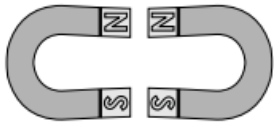
attract repel



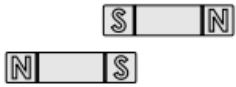
attract repel



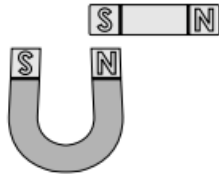
attract repel



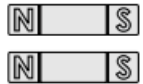
attract repel




attract repel



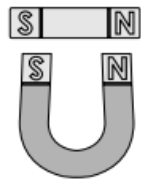
attract repel



attract repel



attract repel



attract repel

Name: _____

Needs and Wants

A **need** is something you and your family must have in order to live safe, healthy lives. You need clothes, food, shelter, medicine, and transportation.



A **want** is something that you or your family spends money on and enjoys, but does not need.




Read each scenario and tell whether each purchase is a need or a want. Write the word **need** or **want** on each line.

- | | |
|--|------------------|
| <p>1. Your socks are worn out, so you go to the store to buy new ones.</p> | <p>1. _____</p> |
| <p>2. Your basketball is worn out so you go to the sporting goods store to buy a new one.</p> | <p>2. _____</p> |
| <p>3. You are sick so your mother goes to the drug store to buy cold medicine.</p> | <p>3. _____</p> |
| <p>4. Your house needs a new roof, so your parents hire a roofer to fix it.</p> | <p>4. _____</p> |
| <p>5. Your father's birthday is coming up. You buy him tickets to a football game to give him as a gift.</p> | <p>5. _____</p> |
| <p>6. You buy paper and markers so you can make your grandmother a special card for Mother's Day.</p> | <p>6. _____</p> |
| <p>7. You go to the store and buy eggs, butter, milk, and a loaf of bread.</p> | <p>7. _____</p> |
| <p>8. Your mother takes your sister to the eye doctor and buys her a pair of glasses.</p> | <p>8. _____</p> |
| <p>9. Your family has a brand new swimming pool put in the backyard.</p> | <p>9. _____</p> |
| <p>10. Your father stops at the gas station and puts 10 gallons of gasoline in his car.</p> | <p>10. _____</p> |

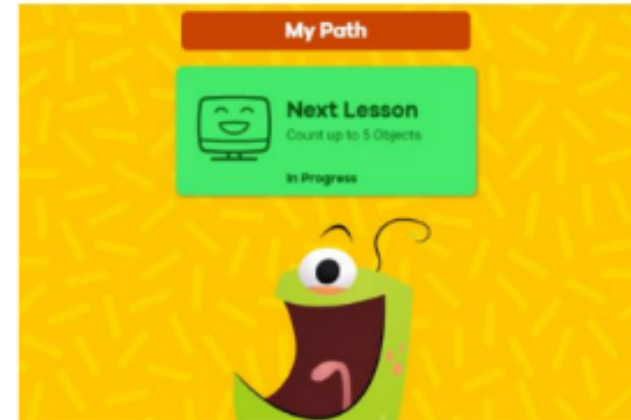
Day 3 Web Based ELA and Math

iReady Personalized Pathway (30-40 Minutes)

- Log into iReady and complete one math and one ELA lesson on your personal pathway.
- How do I login to iReady?
 - Click the link below to go to your ClassLink page.
 - <https://login.classlink.com/my/hamptonsc>
 - Once logged into ClassLink, select the iReady icon.



- Complete one Math iReady lesson under “My Path”
- Complete one ELA iReady lesson under “My Path”



Day 3 Non-Web Based ELA

Please write all answers on notebook paper to turn in (within 3 days)

Cheeky Chipmunks

Written and Photographed by Sandle Lee



'Chuck-chuck-chuck.'

What's that sound? It's coming from an old log. As you search the sound changes.

'Chip-chip-chip.'

Now it's fast and high-pitched. Suddenly, there's a rustling of leaves. With lightening speed it zips past. It disappears down a hole. What was it? A chipmunk.

Chipmunks live all over the United States and Canada. They are small and have black and white stripes down their backs. They dig long tunnels underground. At the end of the tunnel is a bed of dried leaves and grass. They sleep here all winter long. Chipmunks have cheeks that are big and stretchy so they can carry food back to their home. They like to eat nuts, berries, acorns and seeds. When they get nervous, they make a *chuck-chuck* or *chip-chip* sound.



1. List three facts you learned about chipmunks from this article.

2. When do chipmunks make a chip-chip or chuck-chuck sound?

- a. When they're happy. b. When they're eating.
c. When they're lost. d. When they're nervous.

Singular and Plural Nouns

A singular noun names one person, place, or thing.

example: A lizard crawls on top of the rock.

There is only one lizard in the sentence, so the word lizard is a singular noun.

Also, there is only one rock in the sentence, so the word rock is a singular noun too.

A plural noun names more than one person, place, or thing

example: Two rabbits ran through the trees.

There is more than one rabbit, so the word rabbits is a plural noun.

Also, there is more than one tree, so the word trees is a plural noun too.










Underline the noun in each sentence below. On the line next to the sentence, tell whether the noun is singular or plural.

- The squirrel is running fast. _____
- Three of the plates are round. _____
- My grandmother is very kind. _____
- They gave her a nice gift. _____
- Answer the telephone, please. _____
- My crayons are broken. _____
- Have you seen my keys? _____
- That map is old. _____
- It flew in the sky. _____
- There are ten fish. _____

Day 3 Non-Web Based Math

Please write all answers on notebook paper to turn in (within 3 days)

Telling Time

 <p>What time is it? twenty-six minutes to seven twenty-six minutes to six nineteen minutes to six</p>	 <p>What time is it? eighteen minutes to seven eighteen minutes to six eighteen minutes after six</p>	 <p>What time is it? ten minutes after four twelve minutes after four seven minutes after four</p>
 <p>What time is it? twenty-two minutes to six twenty-two minutes to seven twenty-two minutes after six</p>	 <p>What time is it? six minutes to twelve four minutes to twelve four minutes after twelve</p>	 <p>What time is it? thirteen minutes after five thirteen minutes to four thirteen minutes to five</p>
 <p>What time is it? one minute after two one minute after one one minute to two</p>	 <p>What time is it? fourteen minutes to five fourteen minutes after five fourteen minutes after six</p>	 <p>What time is it? seventeen minutes to twelve seventeen minutes after eleven thirty-four minutes to eleven</p>


NAME: _____

Daily Word Problem

Oscar has a dime, a nickel, and a penny.
Isaac has 2 quarters, a nickel, and 3 pennies.
How much more money does Isaac have than Oscar?

Show your work.

answer: _____

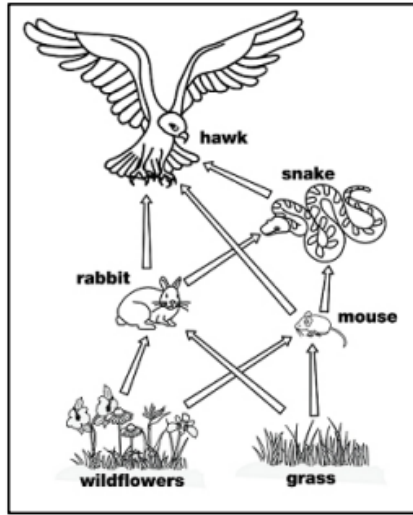


Day 3 Science and Social Studies (nonWeb Based)

Write your answers on notebook paper and turn in within 3 days.

Name: _____

Food Web



A **food web** shows how energy is passed on from one living thing to the next. It shows the feeding habits of different animals that live together in an ecosystem.

In the food web pictured on the left, energy is passed from the grass to the mouse to the snake to the hawk.

Producers are living things that make their own food with sun and air. The producers are pictured at the bottom of the food web.

Consumers are living things that eat other living things.

Use the food web in the picture above to answer the questions.

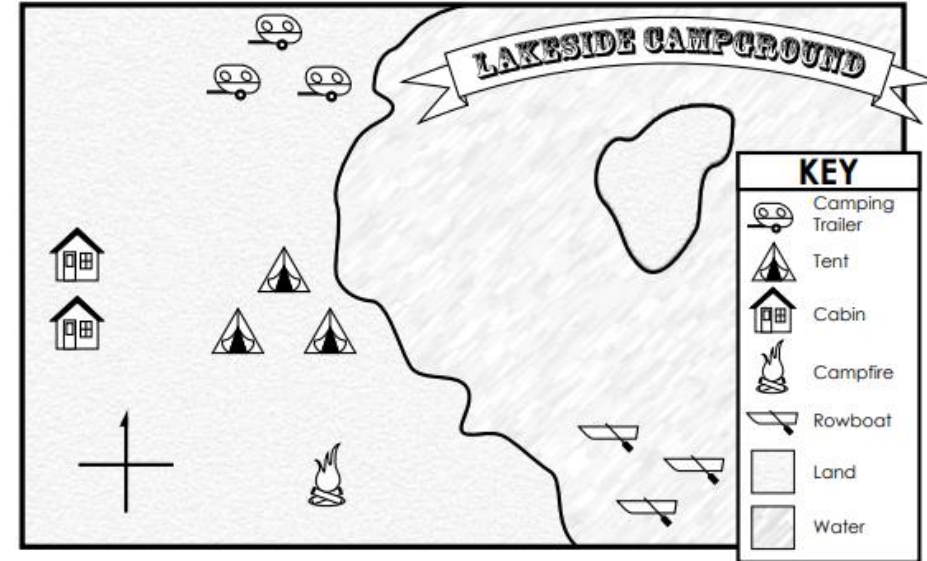
1. Name the living things in the food web that are producers. _____

2. Name the living things in the food web that are consumers. _____

3. Which living things does the snake eat? _____
4. Which living things does the hawk eat? _____
5. What is eaten by the rabbit? _____

Name: _____

Reading a Map



1. Label **N**, **S**, **E**, and **W** on the compass rose.
2. Color the land **green** and the water **blue**.


Write **north**, **south**, **east**, or **west** to complete each sentence.

3. The rowboats are _____ of the campfire.
4. The camping trailers are _____ of the tents.
5. The cabins are _____ of the tents.
6. The campfire is _____ of the camping trailers.
7. The island is _____ of the cabins.

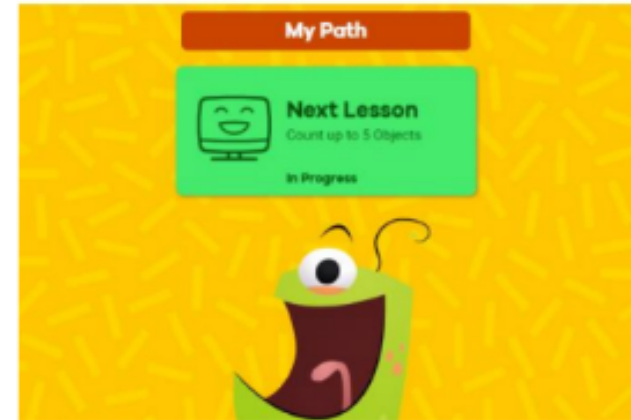
Day 4 Web Based ELA and Math

iReady Personalized Pathway (30-40 Minutes)

- Log into iReady and complete one math and one ELA lesson on your personal pathway.
- How do I login to iReady?
 - Click the link below to go to your ClassLink page.
 - <https://login.classlink.com/my/hamptonsc>
 - Once logged into ClassLink, select the iReady icon.



- Complete one Math iReady lesson under “My Path”
- Complete one ELA iReady lesson under “My Path”



Day 4 Non-Web Based ELA

Please write all answers on notebook paper to turn in (within 3 days)

Name: _____

Angel Falls

The world's tallest waterfall is in South America. Angel Falls starts 3,212 feet (979 meters) in the air. Water drops 2,648 feet (807 meters). Then it flows a bit farther. Then there's a small, second drop of about 100 feet (30 meters).

Why is it called Angel Falls? You might think it's because it's so high up. Really, it's because of James Angel. He was the first pilot to fly over it. Planning your own visit? It's not easy to get to. Be ready to fly, boat, and hike. Angel Falls is deep in a jungle in Venezuela.



1. What country is Angel Falls in? _____
2. What continent is Angels Falls on? _____
3. What is a *pilot*?

4. Which of the following is *not* needed to reach Angel Falls?
a. hiking b. swimming
c. boating d. flying
5. Which word shares a similar meaning with the word *jungle*?
a. desert b. mountain
c. park d. forest
6. How did Angel Falls get its name?

7. How far does water fall in total in the two drops of Angel Falls?

Action!

Action verbs make our writing exciting because they show instead of tell. The first sentence in each pair below uses a linking verb and adjective.

Using the word bank, choose the best action verb that replaces the underlined verb phrase. Write that word on the blank line.

shivers	yawned	stink	cried	smiled
galloped	jokes	rumbles	sparkle	sneezed



1. Ben is sick. Ben _____.
2. Kim was happy. Kim _____.
3. My socks are dirty. My socks _____.
4. They were sad. They _____.
5. The horse was fast. The horse _____.
6. Misha is cold. Misha _____.
7. The windows are clean. The windows _____.
8. The old truck is noisy. The old truck _____.
9. Terrence was sleepy. Terrence _____.
10. My brother is funny. My brother _____.

Day 4 Non-Web Based Math

Please write all answers on notebook paper to turn in (within 3 days)

Daily Word Problem

Hudson and Ivy have some stuffed animals.
Hudson has 8 dogs, 11 cats, and 2 monkeys.
Ivy has 12 monkeys and 8 elephants.
Who had more stuffed animals?

Show your work.

How many animals
did Hudson have? _____

How many animals
did Ivy have? _____

Who had more
animals? _____



Addition Word Problems

Answer the following word problems. Use the space provided to show your work.

1. There were 153 4th graders and 212 5th graders that came to the school play. How many students came to see the play?

2. The grocery store just received a shipment of 450 apples. They also received a shipment of 350 oranges. How many apples and oranges are there all together?

3. The car dealership has 125 cars in the lot. The owner just ordered 142 new cars. When the new cars come, what will be the total number of cars in the lot?

4. A bus driver drove 179 miles to the first stop. She then drove 302 miles to the second stop. How many miles did she drive all together?

5. Molly had 223 songs on her phone. Her brother had 159 songs on his phone. How many songs did they have in all?

6. Susan had collected 141 seashells last summer. This summer she collected 194 shells. What is the total number of seashells she had collected?

Day 4 Science and Social Studies (nonWeb Based)

Write your answers on notebook paper and turn in within 3 days.

Name: _____

Predator and Prey

A **predator** is an animal that hunts other animals for food.

Prey is an animal that is hunted and eaten for food.



Identify the predator and prey for each scenario below.

1. **A robin pulls an earthworm from the lawn and eats it.**

predator - _____ prey - _____

2. **A shrew is eaten by a barn owl.**

predator - _____ prey - _____

3. **A seagull lands near an alligator and the alligator eats it.**

predator - _____ prey - _____

4. **A gray wolf hunts and eats a rabbit.**

predator - _____ prey - _____

5. **A blue whale swallows krill.**

predator - _____ prey - _____

6. **A penguin is captured and eaten by a leopard seal.**

predator - _____ prey - _____

7. **A snapping turtle in a pond eats a small perch.**


predator - _____ prey - _____

300169

Name: _____

Urban, Suburban, and Rural

Tell whether each person most likely works in an urban community, suburban community, or rural community.




1. Sarah owns a dairy farm. She has three dozen cows that she has to feed and care for. Every day, she milks the cows and sells the milk to supermarkets all over her state. Sarah works in a(n) _____ community.
2. When Greg goes to work, he cleans the windows on tall skyscrapers. His job is not meant for people who are afraid of high places! Greg works in a(n) _____ community.
3. Jessie is a police officer. She patrols a small town with small shops and one-story houses. She helps keep everyone in town safe and sound. Jessie works in a(n) _____ community.
4. Every morning, Derrick wakes up and goes to work at a farm equipment dealership. He sells tractors, machines for watering crops, and machines for harvesting crops. Derrick works in a(n) _____ community.
5. Many people that live near Brent don't drive cars because the streets are too busy. Brent drives a bus that hundreds of people use to travel quickly across the city. Brent lives and works in a(n) _____ community.

Day 5 Web Based ELA and Math

iReady Personalized Pathway (30-40 Minutes)

- Log into iReady and complete one math and one ELA lesson on your personal pathway.
- How do I login to iReady?
 - Click the link below to go to your ClassLink page.
 - <https://login.classlink.com/my/hamptonsc>
 - Once logged into ClassLink, select the iReady icon.



- Complete one Math iReady lesson under “My Path”
- Complete one ELA iReady lesson under “My Path”



Day 5 Non-Web Based ELA

Please write all answers on notebook paper to turn in (within 3 days)

Name: _____

What Are Insects?

Insects are a kind of animal that don't have backbones. Their bodies have hard outer coverings.

Insect bodies have three main parts. These are the head, thorax, and abdomen. The thorax is between the head and abdomen. It's where the legs and wings connect to the body. Speaking of legs, insects have six of them.

There are many kinds of insects. Ants, flies, bees, and ladybugs are all insects. Most of the animals on Earth are insects!



1. Read the sentence. Write **true** or **false** on the line.

_____ Insects don't have backbones.

_____ Insect bodies have two parts.

_____ Most of the animals on Earth are insects.

_____ A ladybug is an insect.

2. How many legs do insects have? _____

3. Why did the author write this?

- a. to tell a funny story about a bee
- b. to teach you all about ladybugs
- c. to teach you facts about insects
- d. to get you to like insects


4. What are two insects? _____ and _____

Name: _____

Adjectives

Circle the adjective in each sentence. Draw a line under the noun it describes.

example: The blue balloon floated up in the air.



1. Three turtles swam in the pond.
2. Molly and Jenny tried to finish a difficult puzzle.
3. Their mother made a delicious dinner.
4. Did you see that green car race down the street?
5. George and Jessica shoveled the snowy sidewalk.
6. Clean up this huge mess.
7. The barking dogs were outside.
8. Have you seen my blue pencil?
9. Cheyenne cleaned the dirty window.
10. The playful chimpanzee swung on the rope.
11. The thief walked past the sleeping guard.

Day 5 Non-Web Based Math

Please write all answers on notebook paper to turn in (within 3 days)

Addition and Subtraction Word Problems

1. There were 267 students at Lakeshore Middle School. On Tuesday, 127 of those students left for a field trip. How many Students were left at school on Tuesday?
2. The book store had stocked 500 copies of *Green Eggs and Ham*, by Dr. Seuss. They sold 258 copies that day. How many copies remained at the end of the day?
3. Amy had 122 feet of rope. Her friend Lindsay had given her another rope that was 198 feet long. What was the total number of feet she had in both ropes?
4. In May, 1,232 visitors came to the Picasso Art Museum. In June, 1,859 visitors came. How many people came to the museum during those two months?
5. Adam had recorded 142 hours of television on his DVR. The unit is capable of holding 160 hours. How many hours of television does he have left to record on?
6. A bus ticket to South Carolina costs \$87. A hotel room costs \$235 for the week. How much will it cost Adrian to take a bus to South Carolina and spend a week at the hotel?

Daily Word Problem

There were 64 penguins at the zoo.
Then 18 baby penguins were born.
Then 14 penguins were sent away to another zoo.
How many penguins does the zoo have now?

Show your work.



answer: _____

Day 5 Science and Social Studies (nonWeb Based)

Write your answers on notebook paper and turn in within 3 days.

Name: _____

Carnivores, Herbivores, and Omnivores

A **carnivore** is a consumer that eats only animals.

An **herbivore** is a consumer that eats only plants.

An **omnivore** is a consumer that eats both plants and animals.

Tell whether each animal is a carnivore, herbivore, or omnivore.

1. deer



2. tiger



3. rabbit



4. bison



5. grizzly bear



6. wolf



7. raccoon



8. lion



9. giraffe



Latitude and Longitude



Write the name of the city and state found at the given latitude and longitude coordinates.

- 33°N latitude, 112°W longitude _____
- 35°N latitude, 78°W longitude _____
- 46°N latitude, 96°W longitude _____
- 45°N latitude, 122°W longitude _____
- 29°N latitude, 95°W longitude _____
- 43°N latitude, 79°W longitude _____
- 25°N latitude, 80°W longitude _____

PRACTICE DAY


**to do with 3rd grade
(in Class)**

PRACTICE E-Learning Day

Web Based ELA and Math

iReady Personalized Pathway (30-40 Minutes)

- Log into iReady and complete one math and one ELA lesson on your personal pathway.
- How do I login to iReady?
 - Click the link below to go to your ClassLink page.
 - <https://login.classlink.com/my/hamptonsc>
 - Once logged into ClassLink, select the iReady icon.



- Complete one Math iReady lesson under “My Path”
- Complete one ELA iReady lesson under “My Path”



PRACTICE E-Learning Day

Non-Web ELA

Please turn in with 3 days on notebook paper.

Subjects & Predicates

Choose a **subject** from the box to complete each sentence.

A big spider	A gray dolphin	The houseplant
A buzzing bee	My mother	My closet
My notebook	The eye doctor	The space alien



- _____ looked for nectar in the flower.
- _____ has lots of clothes in it.
- _____ checked my vision.
- _____ needs soil, water, and sunlight.
- _____ landed the UFO.
- _____ jumped in the sea.
- _____ was upset because I broke her favorite vase.
- _____ is filled with stories that I wrote.
- _____ spun a web in the doorway.

Subjects & Predicates

Choose a **predicate** from the box to complete each sentence.

watered her flowers	blew in the wind	fixed the sink
barked all night long	ate crickets	slept in her crib
drove me to school	cut the boy's hair	flew the airplane




- The pilot _____.
- The gardener _____.
- The little puppy _____.
- The barber _____.
- James' baby sister _____.
- The flag _____.
- The lizard _____.
- The plumber _____.
- The bus driver _____.

PRACTICE E-Learning Day

Non-Web MATH

Please turn in with 3 days on notebook paper.

Name: _____



Math Buzz

Fill in the missing numbers.

186	514
472	
155	

Deja logged 161 minutes of reading on her reading log last week. This week she logged 189 minutes of reading. How many minutes did Deja log for both weeks combined?

Show your work

answer: _____ minutes

Goals Scored	
Luca	
Avery	
Yessenia	
Cyrus	

Each = 1 goal

Which player(s) scored more goals than Luca?

answer: _____

How many total goals did the team score?

answer: _____

Write the numbers in standard form.

one hundred ninety-four


$$600 + 50 + 2$$

How many sides?

answer: _____

How many angles?

answer: _____



Name: _____

C-21 Addition & Subtraction **Single-Step**

Daily Word Problem

There are 867 people at a hockey game.

177 are wearing red jerseys.

How many people are not wearing red jerseys?

Show your work.

answer: _____



PRACTICE E-Learning Day

Science and Social Studies

Plants

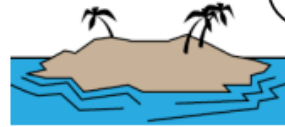


Circle the correct answer to each question.

- What part of a plant makes food?
a. leaves b. stem c. roots
- This pigment turns a plant green and helps it to make food.
a. photosynthesis b. leaves c. chlorophyll
- What is the purpose of a plant's flower?
a. store food b. make seeds c. make food
- This plant part is made of tiny tubes for carrying water, minerals, and food.
a. petals b. roots c. stem
- A plant's food is glucose. Another word for glucose is...
a. chlorophyll b. flour c. sugar
- Which of these is NOT needed for photosynthesis?
a. chlorophyll b. sunlight c. oxygen
- What gas do plants release into the air?
a. oxygen b. hydrogen c. carbon dioxide
- These plant parts soak up water and minerals. They also store food.
a. roots b. leaves c. flowers

Please turn in with 3 days on notebook paper.

Landform Matching



Match each landform listed below with its description.

- | | |
|------------------|--|
| ___ 1. plain | a. area of land that is completely surrounded by water |
| ___ 2. plateau | b. large, flat area of land |
| ___ 3. peninsula | c. area of flat land that is higher than the land around it |
| ___ 4. island | d. narrow strip of land with water on both sides that connects two large areas of land |
| ___ 5. isthmus | e. strip of land that sticks out into a body of water; area of land mostly surrounded by water |

Here are more landforms.
Match each with its description.

- | | |
|-----------------|---|
| ___ 6. mountain | f. an opening in the earth's crust from which lava flows |
| ___ 7. hill | g. large mound of land with a rounded top; smaller than a mountains |
| ___ 8. volcano | h. a large crack in the ground made by a river or a series of earthquakes |
| ___ 9. valley | i. large, tall mass of rock with steep sides; taller than hills |
| ___ 10. canyon | j. low land between hills or mountains |