

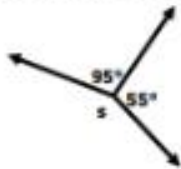
Name _____

Date _____

Angles in a Multi-Step Problems - Matching Worksheet

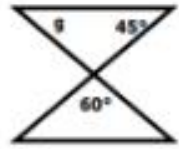
Match the problems to their answers. Write the letter of the answer that matches the problem.

1. What is the value of s ?



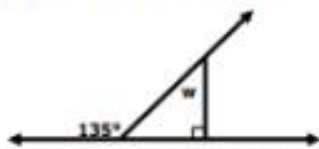
a. 75°

2. Find the measure of angle g .



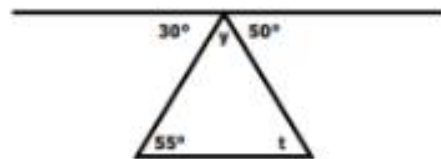
b. 100°

3. Find the measure of angle w .



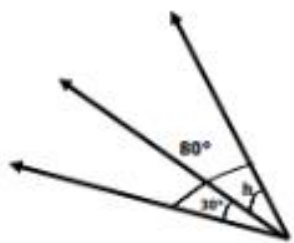
c. 210°

4. Find the measure of angle y .



d. 50°

5. What is the value of h ?



e. 45°

Name : _____

Score : _____

Teacher : _____

Date : _____

Find the length of the third side of each triangle.

