

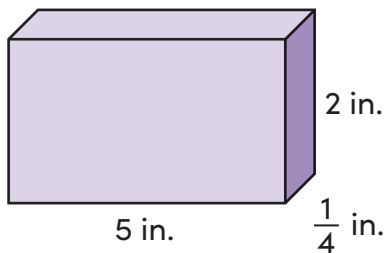
Name _____

Date _____

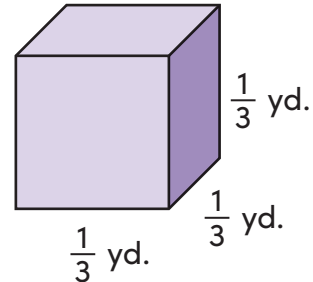
Volume of Rectangular Prisms and Cubes With Fractions

Find the volume of each rectangular prism. Write your answer as a fraction or mixed number in simplest form. Remember the volume formula!

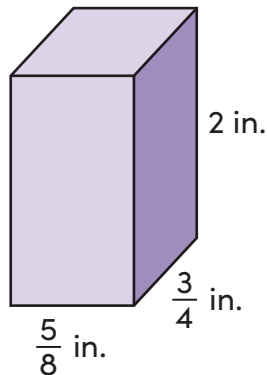
Volume = length \times width \times height



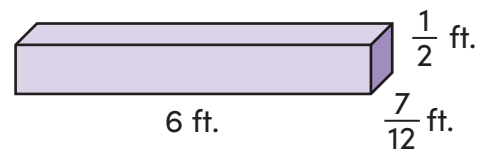
Volume = _____



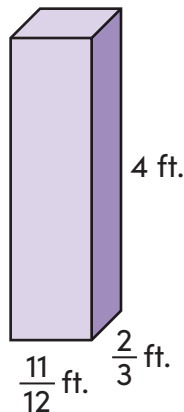
Volume = _____



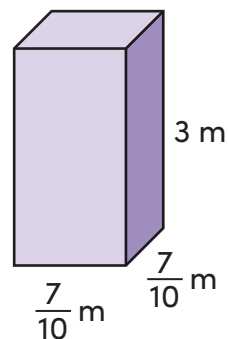
Volume = _____



Volume = _____



Volume = _____



Volume = _____