



Name _____ Date _____

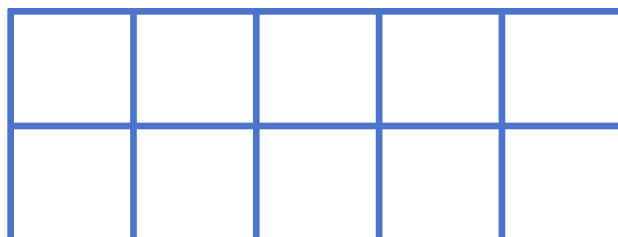
Make 10 in Ten Frames: Match the Equation #1



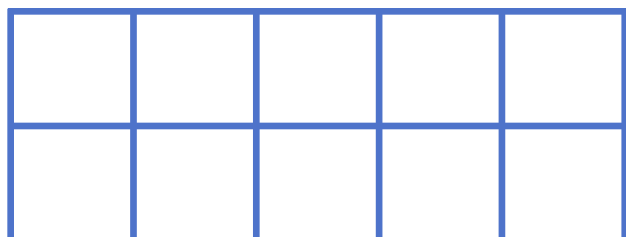
Make circles in each ten frame. Use **two colors** to match the equation. The first problem has been done for you.



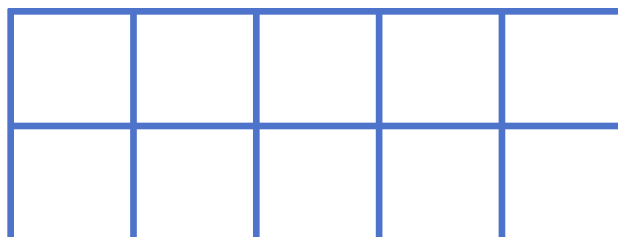
$$2 + 8 = 10$$



$$6 + 4 = 10$$



$$3 + 7 = 10$$



$$5 + 5 = 10$$