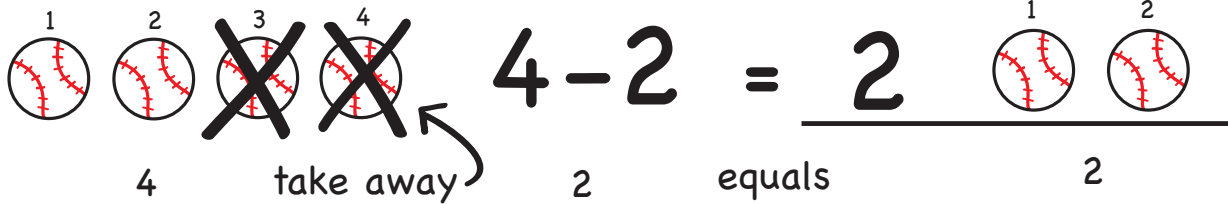








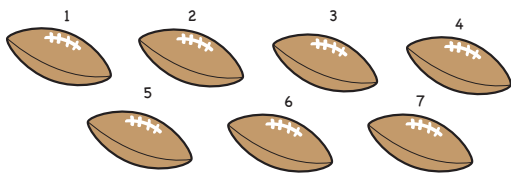
# Let's Practice Subtraction!

Count the pictures and subtract.

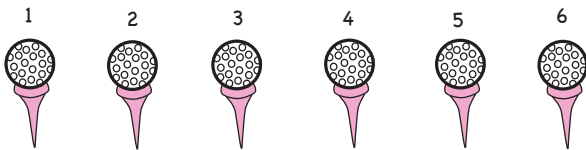
Example:

 1 2 3 4  
     
4 take away 2 equals 2  
   
2


1 2 3 4 5 6 7 8 9 10




$7 - 2 = \underline{\hspace{2cm}}$




$6 - 5 = \underline{\hspace{2cm}}$



$10 - 1 = \underline{\hspace{2cm}}$



$9 - 2 = \underline{\hspace{2cm}}$



$8 - 4 = \underline{\hspace{2cm}}$



$10 - 7 = \underline{\hspace{2cm}}$