


# Longer / Shorter


## Grade 1 Measurement Worksheet

Look at the pictures in the boxes. Answer the question by circling the correct picture.


Which is longer?



Which is shorter?



Which has shorter ears?



Which has longer legs?



Which has a longer tail?



Which has a longer neck?

