

Name _____

2nd Grade Homework

January 6-10, 2025



Monday

Reading-
Spelling-
English-
Math-

Practice reading "Happy New Year" to an adult.
Do the attached worksheet page 1.
Do the attached worksheet page 1.
Do the attached worksheet page 1.

Tuesday

Reading-
Spelling-
English-
Math-

Practice reading "Happy New Year" to an adult.
Do the attached worksheet page 2.
Do the attached worksheet page 2.
Do the attached worksheet page 2.

Wednesday

Reading
Spelling-
English-
Math-

Practice reading "Happy New Year" to an adult.
Do the attached worksheet page 3.
Do the attached worksheet page 3.
Do the attached worksheet page 3.

Thursday

Reading
Spelling-
English-
Math-

Practice reading "Happy New Year" to an adult. Answer the questions in complete sentences.
Do the attached worksheet page 4.
Do the attached worksheet page 4.
Do the attached worksheet page 4.

The Weekly Bulletin

January 6-10, 2025

Week 19

Subject	Unit		Test
Reading	4.1	"Happy New Year"	Friday
English	4.1	Linking Verbs	Thursday
Spelling	4.1	Silent Letters: wr, kn, gn, mb, sc	Thursday
Math	Topic 10	Add within 1000	Next Wednesday January 15
Social Studies		Antarctica	Next Friday January 17
Religion			



Spelling Words

comb
crumb
scene
scent
gnat
sign
knife
know
wrist
writing
cube
music
don't
eat
very

Language Arts Study Guide

Lesson 4.1
"Happy New Year"

Comprehension Skills

- text evidence
- make inferences
- compare and contrast characters, setting, plot
- literary elements
- similes

Phonics

silent letters

Grammar

linking verbs

High Frequency Words

below
colors
don't
down
eat
many
morning
sleep
through
very

Reading Vocabulary

common- owned or shared by two or more people

customs- a way of acting that a group of people have done over and over again

favorite- something liked the best

parades- large groups of people moving through a public place for a special event

surrounded- closed in on all sides


costume- clothing worn to look like something else

travels- goes somewhere

wonder- to want to know about

Antarctica

Study Guide



- Antarctica is located at the South Pole.
- Antarctica is surrounded by the Southern Ocean.
- Antarctica is a frozen desert.
- Vinson Massive is the highest mountain in Antarctica.
- Raold Amundsen was the first explorer to reach the South Pole.
- There are no native people from Antarctica.
- Scientists live in research stations to study the South Pole.
- A huge, slow, moving, river of ice is called a glacier.
- Huge chunks of ice that float in the ocean are icebergs.
- A floating sheet of ice attached to land is an ice shelf.
- The place where penguins lay eggs is called a rookery.
- Enemies of penguins are leopard seals and killer whales.
- There are 17 different kinds of penguins.
- Some types of penguins found in Antarctica include Adelie, Emperor, Chinstrap, and Rockhopper.
- The largest penguins are Emperor penguins.
- Penguins are birds. They cannot fly.
- Penguins spend most of their time in the water.
- Penguins eat fish and krill.
- Penguins can swim up to 30 miles per hour.
- Penguins have waterproof feathers.
- Penguins are very good swimmers.
- Tobogganing is a way penguins move quickly by sliding on their stomachs.
- Porpoising is when penguins pop out of the water to see what is going on around them.

Name: _____

Date: _____

Lesson 4.1

Word Unscramble

Unscramble the words by writing the letters in the correct order in the space provided.

- 1) mbcru _____
- 2) on'td _____
- 3) stenc _____
- 4) mcob _____
- 5) ceesn _____
- 6) ownk _____
- 7) angt _____
- 8) cueb _____
- 9) nkief _____
- 10) itwsr _____
- 11) tae _____
- 12) igsn _____
- 13) smuic _____
- 14) reyv _____
- 15) wnirtig _____

Name _____

- A **linking verb** connects the subject to the rest of the sentence.
- A linking verb does not show action.
- The linking verb **be** has special forms in the present tense: **is**, **are**, and **am**.

Parrots are birds.

The forest is big.

I am in the forest.

A. Circle the linking verb in each sentence.

1. Forests are busy places.
2. I am near a large tree.
3. A bird is in the tree.
4. It is very colorful.
5. A snake is near the bird.
6. Other animals are in the tree too.

B. Write a sentence of your own using a linking verb.

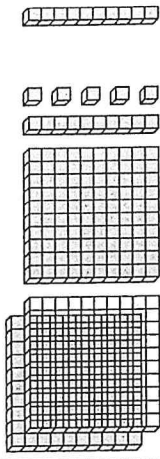
7. _____

Copyright © The McGraw-Hill Companies, Inc.



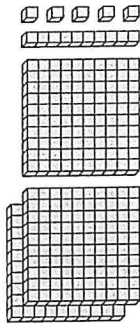
Name _____

Another Look! Use mental math to add 10 or 100 to 3-digit numbers. Find $315 + 10$ and $315 + 100$.



1 ten plus 1 ten is 2 tens.

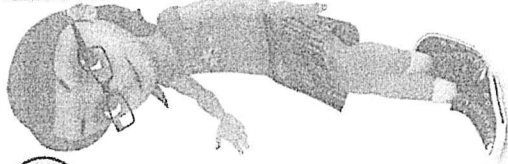
$$315 + 10 = 3\boxed{2}5$$



3 hundreds plus 1 hundred is 4 hundreds.

$$315 + 100 = \boxed{4}15$$

Place value can help you add 10 or 100 mentally.

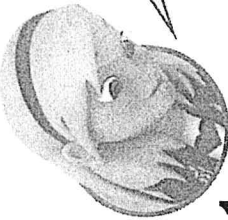


Additional Practice 10-1

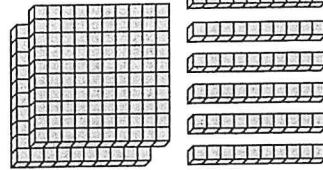
Add 10 and 100

HOME ACTIVITY Choose a number between 200 and 300. Ask your child to add 10 to the number and tell you the sum. Repeat with adding 100 to the number.

Add 10 and then add 100 to each number shown. Use blocks if needed.



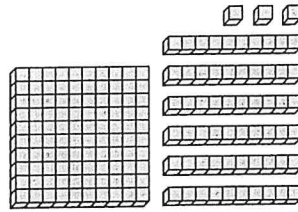
1.



$$\underline{\hspace{1cm}} + 10 = \underline{\hspace{1cm}}$$

$$\underline{\hspace{1cm}} + 100 = \underline{\hspace{1cm}}$$

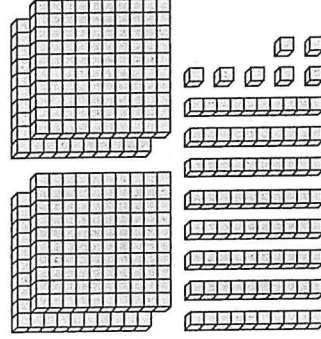
2.



$$\underline{\hspace{1cm}} + 10 = \underline{\hspace{1cm}}$$

$$\underline{\hspace{1cm}} + 100 = \underline{\hspace{1cm}}$$

3.



$$\underline{\hspace{1cm}} + 10 = \underline{\hspace{1cm}}$$

$$\underline{\hspace{1cm}} + 100 = \underline{\hspace{1cm}}$$

Look for Patterns Use mental math. Write the missing digit.

4. $100 + \square 00 = 200$

5. $223 + \square 00 = 323$

6. $\$10 + \$351 = \$3\square 1$



Vocabulary Use mental math. Write the missing digit. Then complete the sentence with **addend** or **sum**.

7. $6\square 3 + 10 = 683$

8. $\square 35 + 100 = 535$

9. $802 + 10 = 81\square$

683 is the _____.

The _____ is 535.

802 is an _____.

Higher Order Thinking Write the missing digits.

10. $22\square + 100 + 105 = 4\square 8$

11. $\square 12 + 205 + 10 = 32\square$

Use mental math to solve.

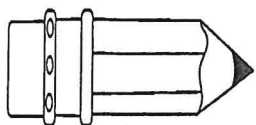
12. Assessment Practice Which is the missing addend in the equation?
 $\$379 + \underline{\hspace{1cm}} = \389

- A. \$10
- B. \$20
- C. \$100
- D. \$380

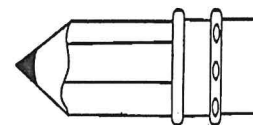
13. Assessment Practice Which is the sum of $274 + 100$?

- A. 174
- B. 184
- C. 284
- D. 374

Name: _____



Spelling Homework



Write your words three times each.

1. _____
2. _____
3. _____
4. _____
5. _____
6. _____
7. _____
8. _____
9. _____
10. _____
11. _____
12. _____
13. _____
14. _____
15. _____
16. _____

Name _____

- A **linking verb** does not show action. Linking verbs can show ideas from the past.
- The past-tense forms of the linking verb *be* include **was** (singular) and **were** (plural).

I am in Africa. Last week, I was in New York.

The lion is in the tree. Earlier, it was in the grass.

We are awake. Last night, we were asleep.

Choose the correct linking verb in (). Write the complete sentence.

1. Last week, I (was, were) near the ocean.

2. Whales (was, were) nearby.

3. The birds (was, were) in the sky.

4. Boats (was, were) in the distance.


5. The scene (was, were) peaceful.

Name _____

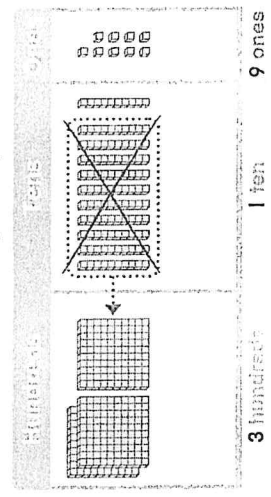
Additional Practice 10-3 Add Using Models

Another Look! Find $154 + 165$.


Step 1: Show each number with place-value blocks.



Step 2: Join the hundreds, tens, and ones. Regroup if needed.

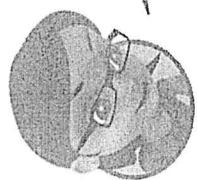


So, $154 + 165 = \underline{319}$.



Regroup. 10 tens = 1 hundred

HOME ACTIVITY Ask your child to show you how to add $305 + 497$ using models. Have your child explain how he or she does the addition.



Use numbers or place value blocks to find each sum. Regroup if needed.

- $248 + 455 =$ _____
- $209 + 376 =$ _____
- $594 + 126 =$ _____



Use place-value blocks or drawings to find each sum. Regroup if needed.

4. $285 + 507 =$ _____

5. $701 + 132 =$ _____

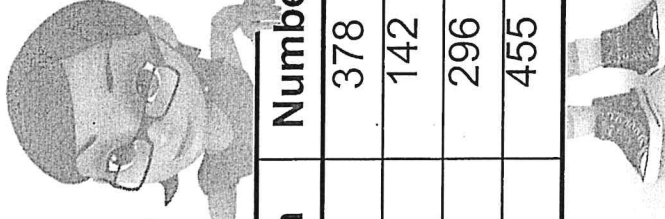
6. $371 + 431 =$ _____

Be Precise Find the total number of buttons for each. Use the chart. Add using place-value blocks.

7. Mrs. Jones buys all of the animal and fruit buttons.

8. Mr. Frost buys all of the sport and holiday buttons.

Be precise when using the numbers in the table.



Button	Number
Animal	378
Sport	142
Fruit	296
Holiday	455

_____ buttons

_____ buttons

9. Higher Order Thinking A theater manager wants to add 140 seats. Then the theater will have a total of 375 seats. How many seats does the theater have now?

_____ seats

10. Assessment Practice What is the sum of $294 + 225$? Use drawings of place-value blocks if needed.

- 419 509 519 529
A. B. C. D.

Name: _____

#: _____

Spelling Practice Test

Have someone call out your spelling words and take a spelling practice test. Go back and correct any mistakes.

1. _____

2. _____

3. _____

4. _____

5. _____

6. _____

7. _____

8. _____

9. _____

10. _____

11. _____

12. _____

13. _____

14. _____

15. _____

16. _____

Name _____

Circle the present-tense form of the linking verb *be* in each sentence. Rewrite the sentence. Change the verb to the past tense.

1. I am in the grasslands.

2. Zebras are nearby.

3. The grass is brown.

4. Animals are in the grass.

5. We are near the water hole.

6. Water is all around us.



Name _____

Additional Practice 10-4

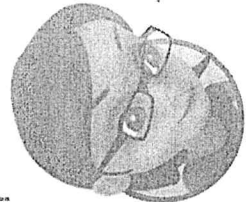
Continue to Add Using Models and Place Value

Another Look! Find $135 + 248$. Draw blocks or write equations to solve.

Hundreds	Tens	Ones



$135 + 248 = \underline{383}$



Draw blocks to find the partial sums. Add the partial sums to find the sum.

1. $341 + 127 =$ _____

Hundreds	Tens	Ones

2. $524 + 249 =$ _____

Hundreds	Tens	Ones



Draw blocks to find the partial sums. Add the partial sums to find the sum.

3. $209 + 123 =$ _____

Hundreds	Tens	Ones

4. $493 + 265 =$ _____

Hundreds	Tens	Ones

5. $582 + 356 =$ _____

Hundreds	Tens	Ones

6. $234 + 427 =$ _____

Hundreds	Tens	Ones

7. **Higher Order Thinking** Write and solve an addition story for $482 + 336$.

8. **Assessment Practice** Find $486 + 204$.

$486 + 204 =$ _____

Hundreds	Tens	Ones

Name _____

"Happy New Year"

1. How was the New Year celebrated in the United States?

2. How was the New Year celebrated in China?

3. What do the celebrations in the United States and China have in common?

4. What was the speaker's favorite part of the New Year in the United States?

5. On which day was the Lantern Festival?
