



Summer Math Program
Entering Second Grade
Week 9



Fast Facts

See how many you can do in one minute!

21	9	22	10	13	10	20
<u>- 11</u>	<u>+ 20</u>	<u>- 17</u>	<u>- 7</u>	<u>+ 18</u>	<u>+ 14</u>	<u>- 7</u>

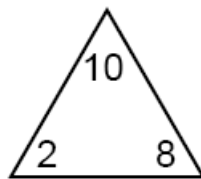
31	19	21	16	14	24	8
<u>- 13</u>	<u>- 15</u>	<u>- 8</u>	<u>+ 16</u>	<u>- 6</u>	<u>- 13</u>	<u>+ 17</u>

13	26	22	3	9	30	12
<u>+ 15</u>	<u>- 14</u>	<u>- 15</u>	<u>+ 1</u>	<u>+ 20</u>	<u>- 12</u>	<u>+ 6</u>

Fact Families

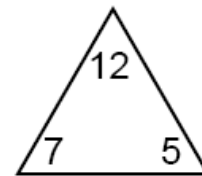
Complete the addition and subtraction problems to create these fact families.

1)




<input type="text"/>	+	<input type="text"/>	=	<input type="text"/>
<input type="text"/>	+	<input type="text"/>	=	<input type="text"/>
<input type="text"/>	-	<input type="text"/>	=	<input type="text"/>
<input type="text"/>	-	<input type="text"/>	=	<input type="text"/>

2)






<input type="text"/>	+	<input type="text"/>	=	<input type="text"/>
<input type="text"/>	+	<input type="text"/>	=	<input type="text"/>
<input type="text"/>	-	<input type="text"/>	=	<input type="text"/>
<input type="text"/>	-	<input type="text"/>	=	<input type="text"/>



Great graphs!





1. Use the picture. Complete the tally chart. Cross out a picture and write 1 tally mark for each animal you cross out.

Animals	
	
	
	

Use the tally chart to solve.

2. How many  are there?
 _____ 

3. How many  are there?
 _____ 

4. Which has the most?
 Circle.



5. Which has the fewest?
 Circle.



6. How many more monkeys are there than birds? Write an addition or subtraction sentence then solve.

7. Ask five to ten people which sport is their favorite in the Olympics. Then complete the pictograph. Use a 😊 for each person's vote.

Favorite Olympic Sports

Sport	Number of Favorite
Swimming/Diving	
Gymnastics	
Track & Field	
Volleyball	

Web Links

Try these web sites for additional practice and interactive learning!

- Minus Mission

http://www.mathplayground.com/ASB_MinusMission.html