



Summer Math Program  
Entering First Grade  
Week 9



**Fast Facts**

See how many you can do in one minute!

$\begin{array}{r} 6 \\ + 7 \\ \hline \end{array}$	$\begin{array}{r} 5 \\ + 3 \\ \hline \end{array}$	$\begin{array}{r} 5 \\ - 4 \\ \hline \end{array}$	$\begin{array}{r} 2 \\ - 1 \\ \hline \end{array}$	$\begin{array}{r} 6 \\ + 5 \\ \hline \end{array}$	$\begin{array}{r} 3 \\ + 5 \\ \hline \end{array}$	$\begin{array}{r} 6 \\ - 1 \\ \hline \end{array}$
---	---	---	---	---	---	---

$\begin{array}{r} 7 \\ + 5 \\ \hline \end{array}$	$\begin{array}{r} 6 \\ - 4 \\ \hline \end{array}$	$\begin{array}{r} 3 \\ + 8 \\ \hline \end{array}$	$\begin{array}{r} 5 \\ + 2 \\ \hline \end{array}$	$\begin{array}{r} 4 \\ - 1 \\ \hline \end{array}$	$\begin{array}{r} 6 \\ + 5 \\ \hline \end{array}$	$\begin{array}{r} 3 \\ + 5 \\ \hline \end{array}$
---	---	---	---	---	---	---

**Time for Time**

Circle the event in each set that takes the longest amount of time to complete.




Draw the hour hand on each clock to show the time.




2:00




10:00




5:00



7:00



11:00



3:00

Write the time you usually do the following activities:

1. Go to bed at night \_\_\_\_\_

2. Eat breakfast \_\_\_\_\_

3. Brush your teeth \_\_\_\_\_

4. Wake up \_\_\_\_\_

## Web Links

- Robo Packer

[http://www.eduplace.com/kids/mw/swfs/robopacker\\_grade1\\_p.html](http://www.eduplace.com/kids/mw/swfs/robopacker_grade1_p.html)

- Minus Mission

[http://www.mathplayground.com/ASB\\_MinusMission.html](http://www.mathplayground.com/ASB_MinusMission.html)