



Summer Math Program
Entering First Grade
Week 7



Fast Facts


See how many you can do in one minute!

$\begin{array}{r} 9 \\ + 0 \\ \hline \end{array}$	$\begin{array}{r} 6 \\ + 4 \\ \hline \end{array}$	$\begin{array}{r} 3 \\ + 2 \\ \hline \end{array}$	$\begin{array}{r} 7 \\ + 5 \\ \hline \end{array}$	$\begin{array}{r} 5 \\ + 4 \\ \hline \end{array}$	$\begin{array}{r} 10 \\ + 2 \\ \hline \end{array}$	$\begin{array}{r} 6 \\ + 1 \\ \hline \end{array}$
---	---	---	---	---	--	---

$\begin{array}{r} 7 \\ - 3 \\ \hline \end{array}$	$\begin{array}{r} 8 \\ - 4 \\ \hline \end{array}$	$\begin{array}{r} 10 \\ - 6 \\ \hline \end{array}$	$\begin{array}{r} 9 \\ - 1 \\ \hline \end{array}$	$\begin{array}{r} 6 \\ - 3 \\ \hline \end{array}$	$\begin{array}{r} 1 \\ - 0 \\ \hline \end{array}$	$\begin{array}{r} 4 \\ - 2 \\ \hline \end{array}$
---	---	--	---	---	---	---

Addition and Subtraction Sentences


Write (or finish) an addition sentence or a subtraction sentence for the pictures shown.




$$2 + \underline{\quad} = 3$$



$$3 - \underline{\quad} = 2$$



$$\underline{\quad} + \underline{\quad} = \underline{\quad}$$




$$\underline{\quad} - \underline{\quad} = \underline{\quad}$$

Place Value Practice

Lacy's Place Value

Lacy the Llama is having a hard time figuring out **tens** from **ones**. Help her by writing each digit in the correct **place value** column.

	tens	ones
46	_____	_____
72	_____	_____
54	_____	_____
83	_____	_____
18	_____	_____
61	_____	_____
39	_____	_____
25	_____	_____






Circle the groups of ten. Write how many tens and ones. Then, write how many in all.



in all
2 tens + 4 ones = 24



in all

___ tens + ___ ones = ___



in all

___ tens + ___ ones = ___



in all

___ tens + ___ ones = ___




in all

___ tens + ___ ones = ___



in all

___ tens + ___ ones = ___



in all

___ tens + ___ ones = ___