



Summer Math Program
Entering First Grade
Week 2



Fast Facts

See how many you can do in one minute!

$$\begin{array}{r} 3 \\ + 3 \\ \hline \end{array}$$

$$\begin{array}{r} 2 \\ + 5 \\ \hline \end{array}$$

$$\begin{array}{r} 7 \\ + 2 \\ \hline \end{array}$$

$$\begin{array}{r} 3 \\ + 5 \\ \hline \end{array}$$

$$\begin{array}{r} 8 \\ + 0 \\ \hline \end{array}$$

$$\begin{array}{r} 7 \\ + 1 \\ \hline \end{array}$$

$$\begin{array}{r} 4 \\ + 3 \\ \hline \end{array}$$

$$\begin{array}{r} 6 \\ - 2 \\ \hline \end{array}$$

$$\begin{array}{r} 9 \\ - 0 \\ \hline \end{array}$$

$$\begin{array}{r} 5 \\ - 5 \\ \hline \end{array}$$

$$\begin{array}{r} 3 \\ - 2 \\ \hline \end{array}$$


$$\begin{array}{r} 4 \\ - 4 \\ \hline \end{array}$$

$$\begin{array}{r} 3 \\ - 2 \\ \hline \end{array}$$

$$\begin{array}{r} 8 \\ - 7 \\ \hline \end{array}$$

Patterning Practice

Finish each pattern:



4 3 1 4 3 1 _____

Web Links


- ABC-Ya! Math website for addition skills
<http://www.abcya.com/addition.htm>

ADD THE NUMBERS




Jumbo needs help finding the right ball.
Add the numbers in each box and color
the ball with the correct answer.


$5 + 6 = \dots\dots\dots$




$4 + 3 = \dots\dots\dots$




$6 + 7 = \dots\dots\dots$




$7 + 2 = \dots\dots\dots$




$8 + 8 = \dots\dots\dots$




$3 + 9 = \dots\dots\dots$



$9 + 8 = \dots\dots\dots$



$5 + 3 = \dots\dots\dots$



$7 + 8 = \dots\dots\dots$

