

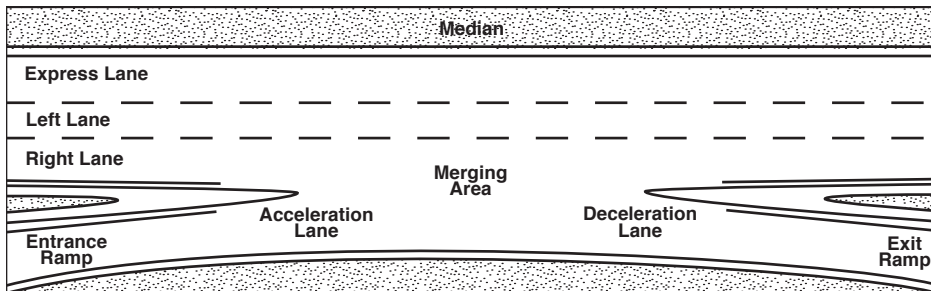
Pick a Word

Use the word or words in the box that best matches each statement below.

acceleration lane	deceleration lane	highway hypnosis	merging area
common speed	entrance ramp	hole in traffic	velocitation
controlled-access highway	exit ramp		

- _____ 1. Speed used by most drivers who drive on an expressway
- _____ 2. Condition in which a driver unconsciously drives too fast after leaving an expressway
- _____ 3. Allows the driver to search for a gap while picking up speed to match traffic flow
- _____ 4. Type of expressway where vehicles can enter or leave only at an interchange
- _____ 5. An added lane in which to slow your vehicle without slowing vehicles to the rear on the expressway
- _____ 6. Condition in which a driver is lulled into an inattentive, drowsy state
- _____ 7. Leads off of the expressway and allows the driver to look for a speed change and slow the vehicle
- _____ 8. Allows the driver to evaluate path of travel, control zones, and determine the best entry speed
- _____ 9. Allows the driver to evaluate time and space prior to moving into traffic flow
- _____ 10. Empty space between traffic clusters

Use the Diagram



Study the diagram above. Write the expressway term that matches each statement below.

- 1. Ramp that gives you access to an expressway _____
- 2. Area that separates two-way traffic on an expressway _____
- 3. Ramp that leads a vehicle off an expressway _____
- 4. Added lane on an expressway in which to slow a vehicle without blocking vehicles behind _____
- 5. Part of an expressway entrance you enter at the same speed as vehicles in the nearest lane _____
- 6. Part of an expressway entrance that allows you to increase speed to that of vehicles on the expressway _____
- 7. Expressway lane with few exits, used by traffic during morning and evening rush hours _____

Copyright © Pearson Education, Inc., or its affiliates. All rights reserved.

Test Your Knowledge

Check correct or incorrect for each statement below about expressways.

1. Cross traffic is eliminated on controlled-access expressways because there are no intersections.
2. Expressways have a median strip or barrier between opposing lanes of traffic.
3. Expressways have narrow shoulders and underpasses.
4. Pedestrians, nonmotorized vehicles, and slow-moving vehicles are permitted on most expressways.
5. Expressways are designed to help drivers anticipate conditions ahead.

	Correct	Incorrect
1.		
2.		
3.		
4.		
5.		

List Expressway Strategies

List four strategies to use to become a safe highway driver.

1. _____
2. _____
3. _____
4. _____

Identify Problem Areas

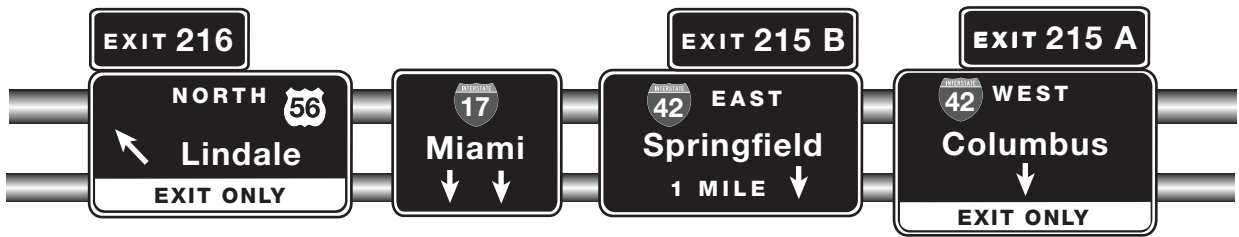
Check the box to the right that identifies different problems you must look for when entering and exiting expressways.

1. Crossing paths with traffic
2. Roadway repair activity
3. Ramp signal light
4. High wall blocks vision
5. Ramp overflow
6. Merging area
7. Short acceleration lane
8. Wrong ramp choice
9. Short deceleration lane
10. Gap difficult to find
11. WRONG WAY or DO NOT ENTER sign

	Entering	Exiting	Both
1.			
2.			
3.			
4.			
5.			
6.			
7.			
8.			
9.			
10.			
11.			

Copyright © Pearson Education, Inc., or its affiliates. All rights reserved.

Check the Lane



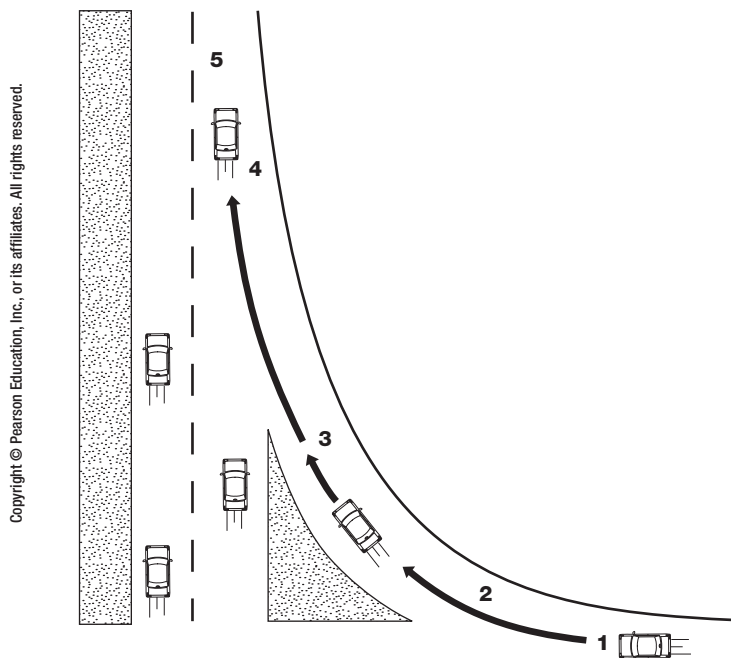
Above is a group of signs over an expressway. Check the correct lane for each question below.

1. Which lane should you use to go to Springfield?
2. Which lane should you use to go to Columbus?
3. Which lane should you use to exit highway 56?
4. Which two lanes can you use to go to Miami?
5. Which two lanes of the expressway are ending?

	Far Left Lane	Left Center Lane	Center Lane	Right Center Lane	Far Right Lane
1.					
2.					
3.					
4.					
5.					

Use the Diagram

Study the diagram. Write what actions to take at each of the five numbered points.

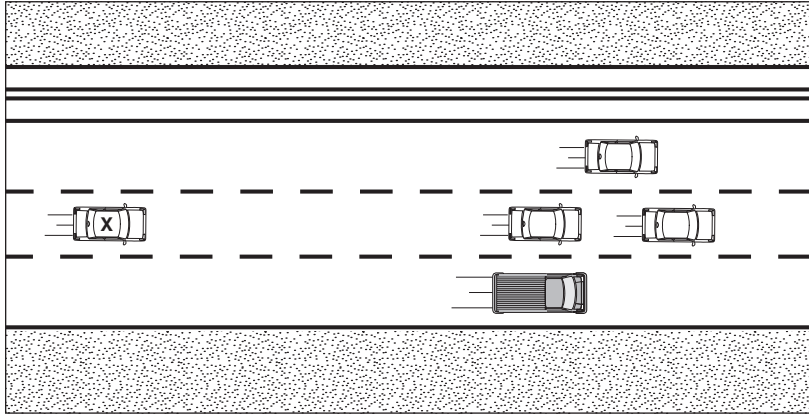


Copyright © Pearson Education, Inc., or its affiliates. All rights reserved.

1. a. _____
b. _____
2. a. _____
b. _____
c. _____
3. a. _____
b. _____
c. _____
4. a. _____
5. a. _____
b. _____
c. _____

Use the Picture

You are driving car X on an expressway with a view of traffic ahead as shown in the picture below. Check yes or no for each statement.



1. A wolf pack is forming ahead.
2. You should accelerate to join the cars ahead.
3. Maintain speed; be a “loner.”
4. A driver in a wolf pack is likely to have trouble with lane changes.
5. If you are tailgated, speed up so the wolf pack protects you.

	Yes	No
1.		
2.		
3.		
4.		
5.		

Match the Location

Study the picture of the expressway exits. Write the letter of the location that matches where each action should take place.

- _____ 1. Give right turn signal to use exit S.
- _____ 2. Begin to decelerate for exit S.
- _____ 3. Change to deceleration lane for exit N.
- _____ 4. Adjust to exit ramp speed for exit N.
- _____ 5. Give right turn signal to use exit N.

