



1. World Continents and Oceans

Objective: Students will be able to identify and label each of the world continents and oceans when provided a blank map of the world.

Continents: Africa, Antarctica, Asia, Australia, Europe, North America, South America

Oceans: Arctic, Atlantic, Indian, Pacific, Southern

The Physical World

Continents and Oceans

Provided by: graphicmaps.com

12

Name the Continents

1 _____	4 _____	6 _____
2 _____	5 _____	7 _____
3 _____		

Name the Oceans

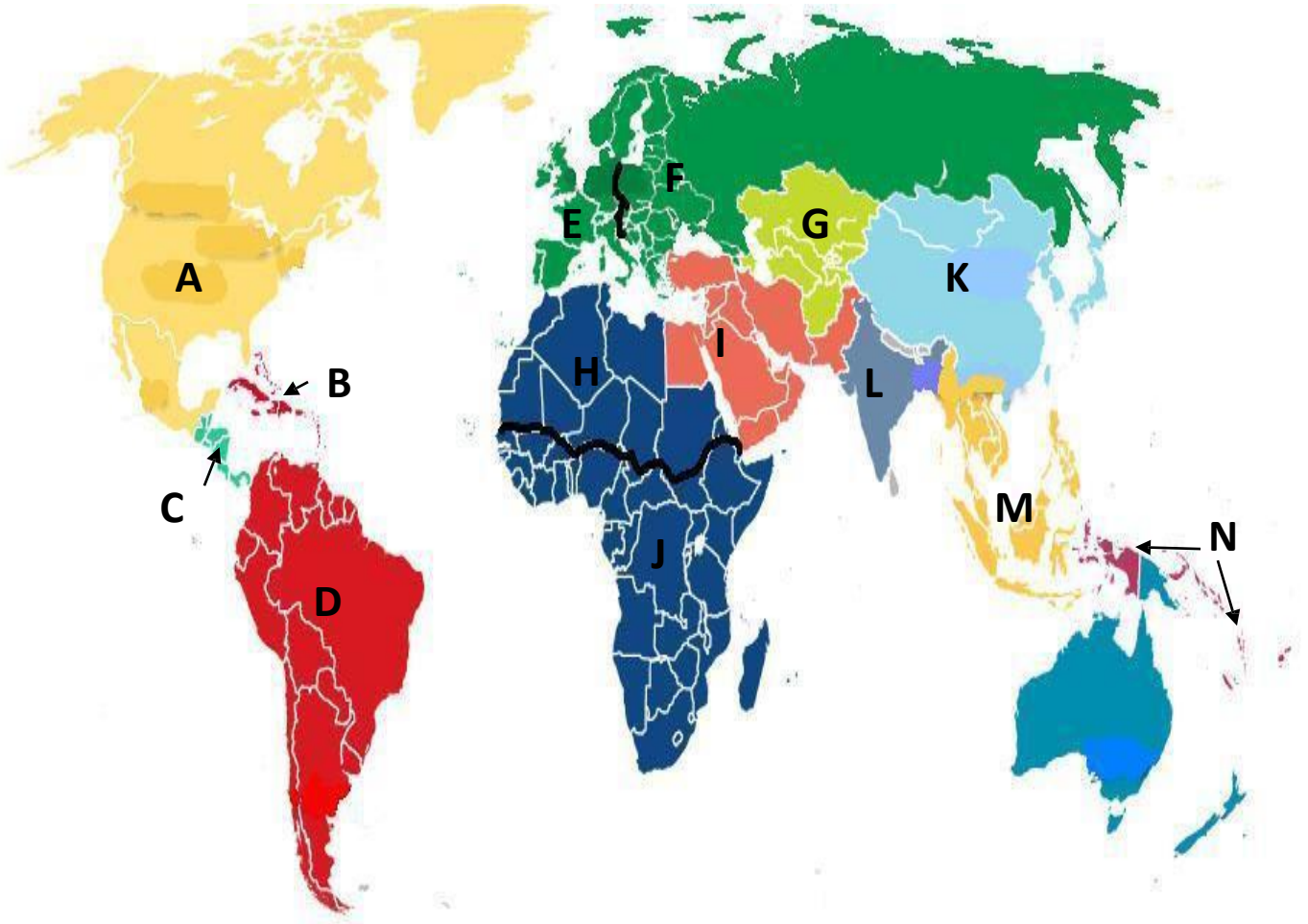
8 _____	11 _____
9 _____	12 _____
10 _____	



2. Regions of the World

Objective: Students will be able to identify and label each of the major regions of the world when provided a blank map of the world.

Regions: Identify each of the following regions: Caribbean, Central America, Central Asia, East Asia, Eastern Europe, Middle East (aka Southwest Asia), North Africa, North America, Australia/Oceania, South America (aka Latin America), South Asia, Southeast Asia, Sub-Saharan Africa, Western Europe



- A. _____
- D. _____
- G. _____
- J. _____
- M. _____

- B. _____
- E. _____
- H. _____
- K. _____
- N. _____

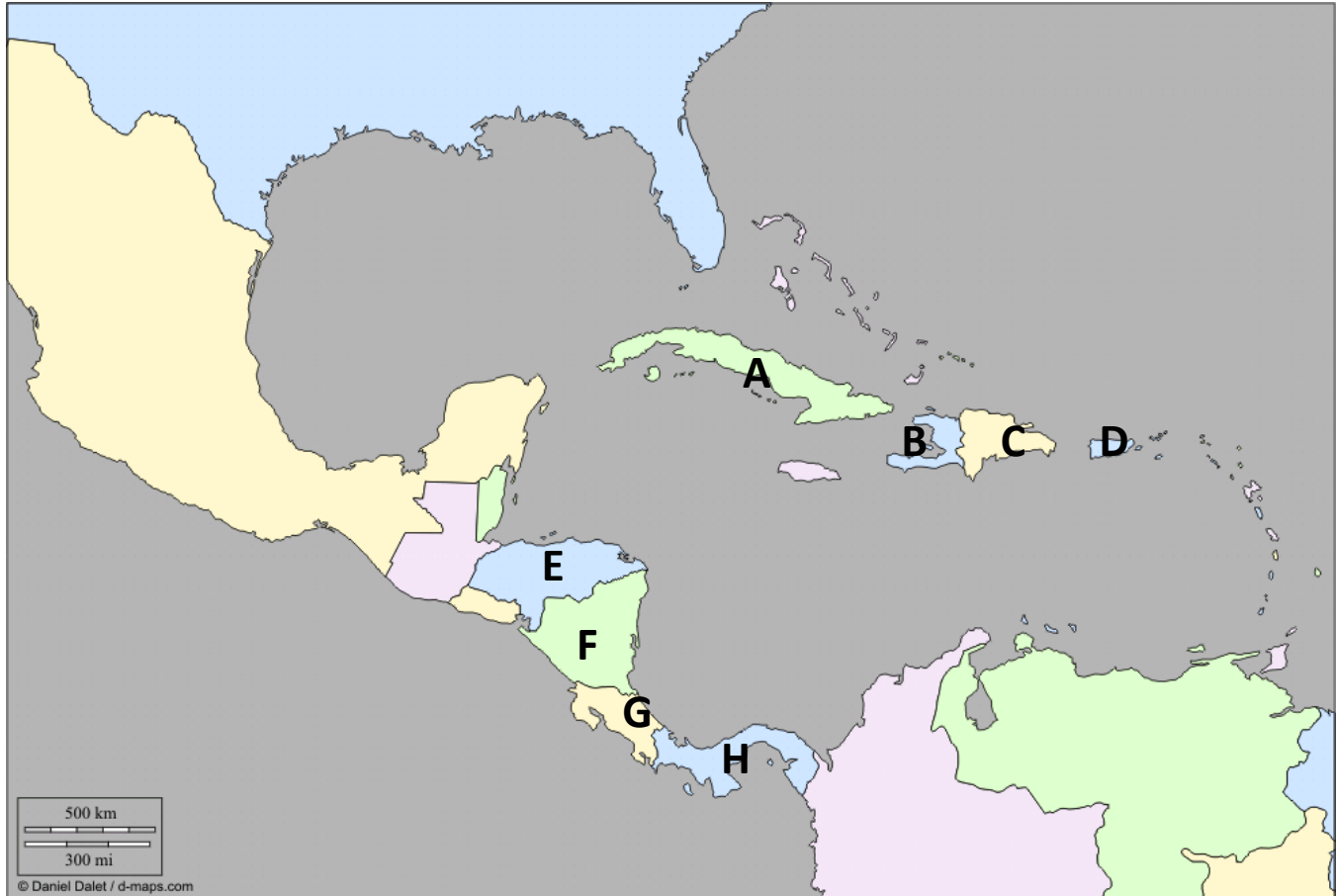
- C. _____
- F. _____
- I. _____
- L. _____



3. Countries of the Central American and Caribbean Regions

Objective: Students will be able to identify and label a selection of countries found within each of the major regions of the world when provided a blank map of the world.

Countries: Identify each of the following: Costa Rica, Cuba, Dominican Republic, Haiti, Honduras, Nicaragua, Panama, Puerto Rico*



*Puerto Rico is a commonwealth of the United States

A. _____

B. _____

C. _____

D. _____

E. _____

F. _____

G. _____

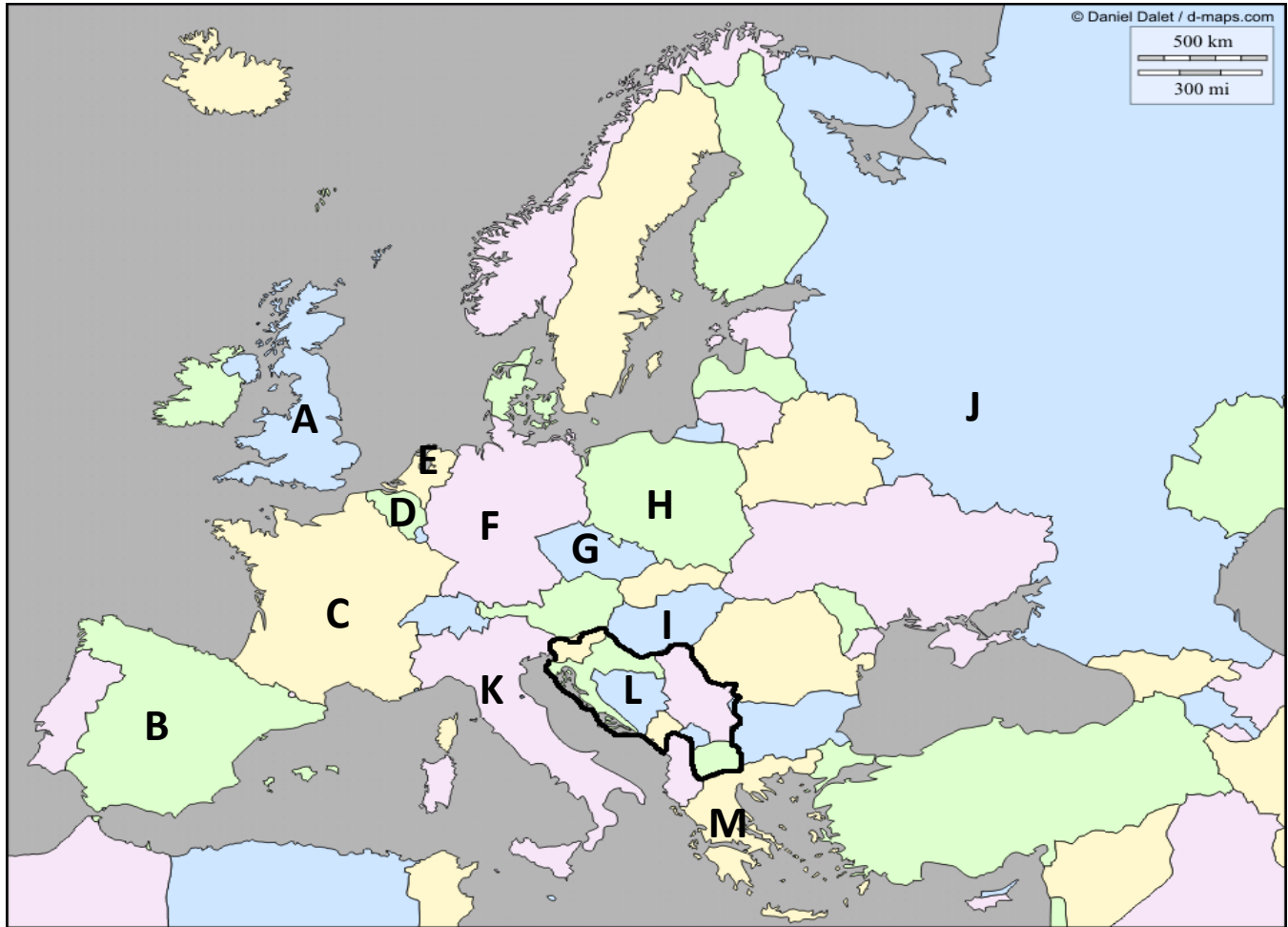
H. _____



4. Countries of the Eastern and Western European Regions

Objective: Students will be able to identify and label a selection of countries found within each of the major regions of the world when provided a blank map of the world.

Countries: Identify each of the following: Belgium, Czech Republic, France, Germany, Greece, Hungary, Italy, Netherlands, Poland, Russia, Spain, United Kingdom, the Former Yugoslavia*



*The Former Yugoslavia is today comprised of several countries: Bosnia-Herzegovina, Croatia, Kosovo (recognized by the United States and European Union), Macedonia, Montenegro, Serbia, and Slovenia.

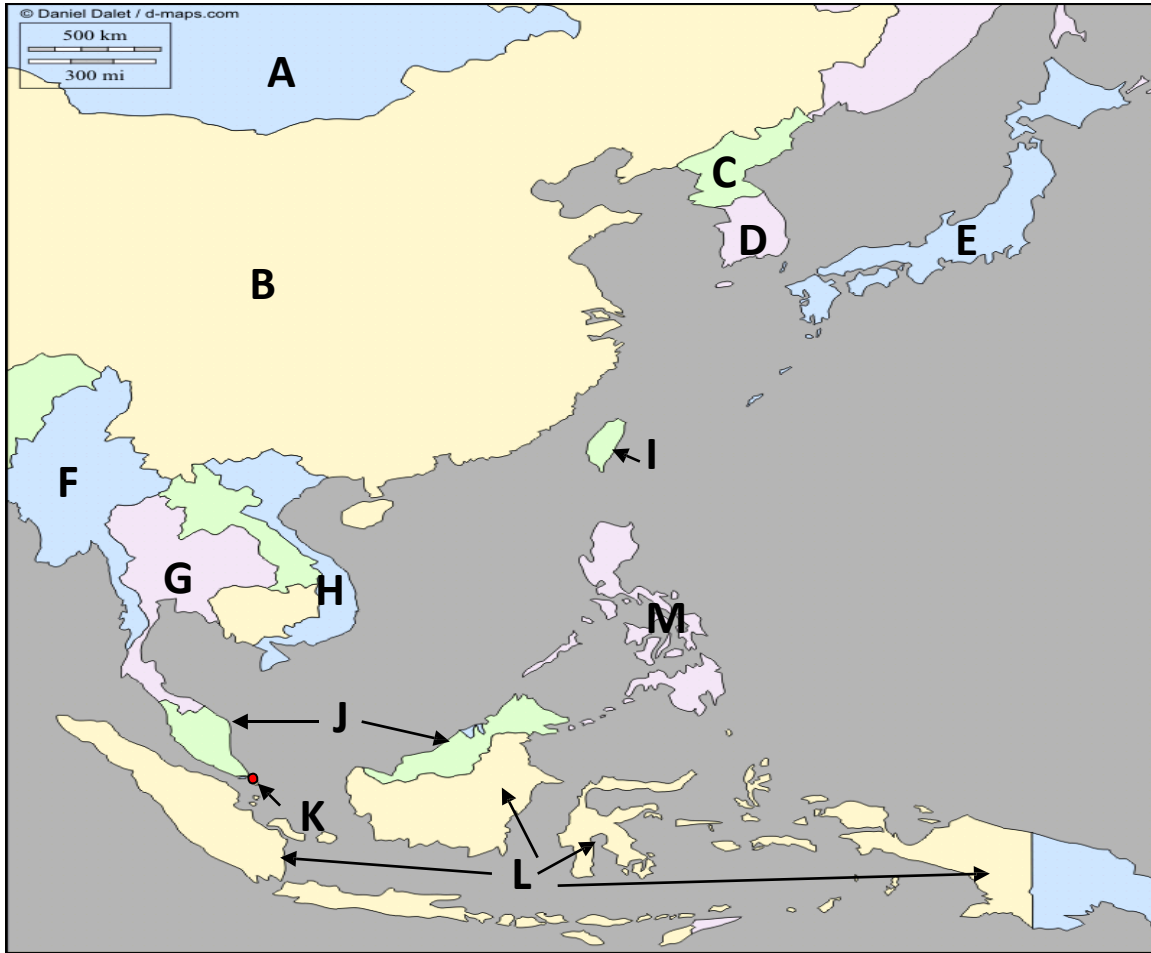
- | | | |
|----------|----------|----------|
| A. _____ | B. _____ | C. _____ |
| D. _____ | E. _____ | F. _____ |
| G. _____ | H. _____ | I. _____ |
| J. _____ | K. _____ | L. _____ |
| M. _____ | | |



5. Countries of the East Asian and Southeast Asian Regions

Objective: Students will be able to identify and label a selection of countries found within each of the major regions of the world when provided a blank map of the world.

Countries: Identify each of the following: China, Indonesia, Japan, Malaysia, Mongolia, Myanmar (Burma), North Korea, Philippines, Singapore, South Korea, Taiwan*, Thailand, Vietnam



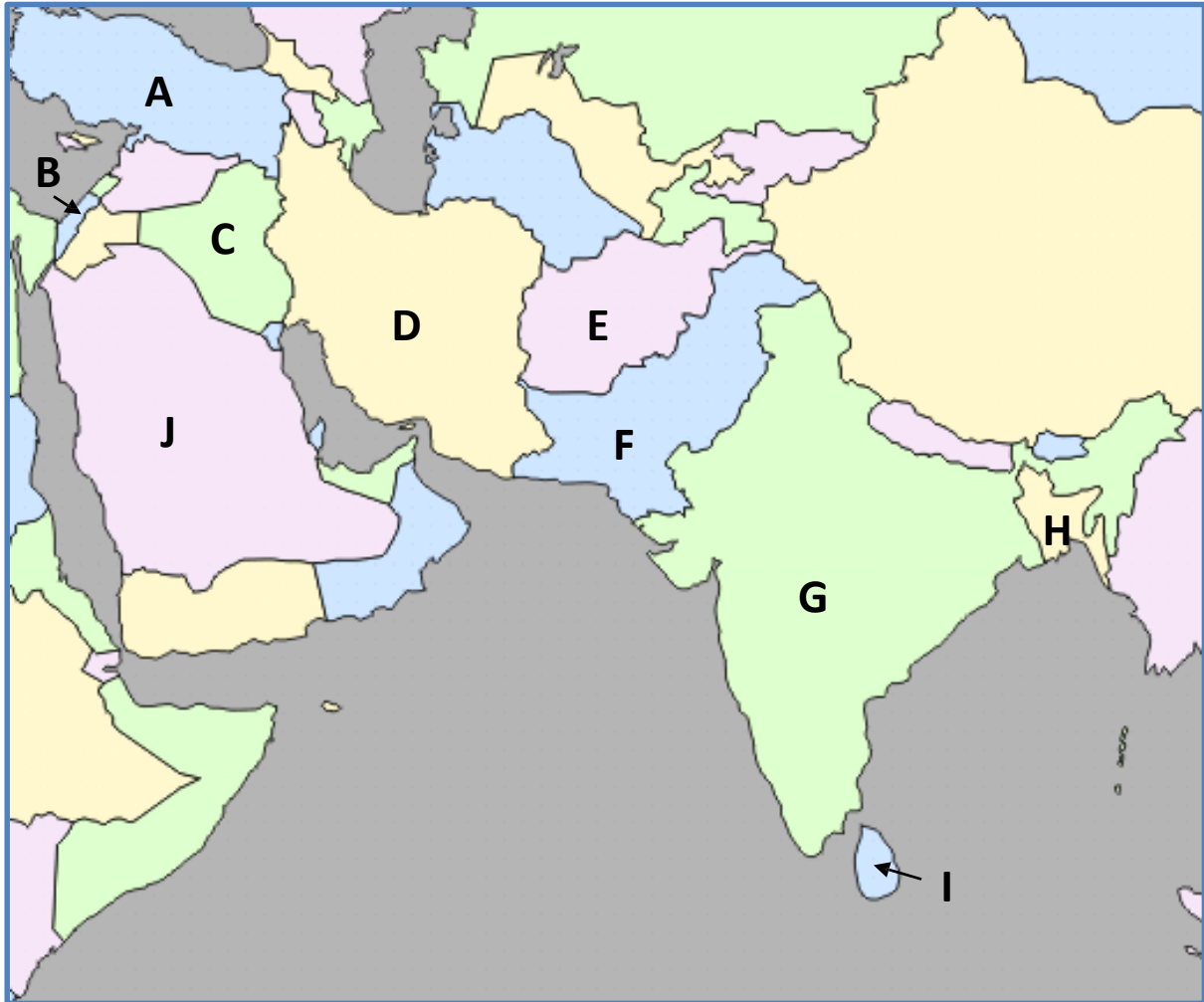
*Taiwan is an independently governed territory claimed by China.

- | | | |
|----------|----------|----------|
| A. _____ | B. _____ | C. _____ |
| D. _____ | E. _____ | F. _____ |
| G. _____ | H. _____ | I. _____ |
| J. _____ | K. _____ | L. _____ |
| M. _____ | | |

6. Countries of the Middle East (or Southwest Asia) and South Asian Regions

Objective: Students will be able to identify and label a selection of countries found within each of the major regions of the world when provided a blank map of the world.

Countries: Identify the following: Afghanistan, Bangladesh, India, Iran, Iraq, Israel, Pakistan, Saudi Arabia, Sri Lanka, Turkey



A. _____

B. _____

C. _____

D. _____

E. _____

F. _____

G. _____

H. _____

I. _____

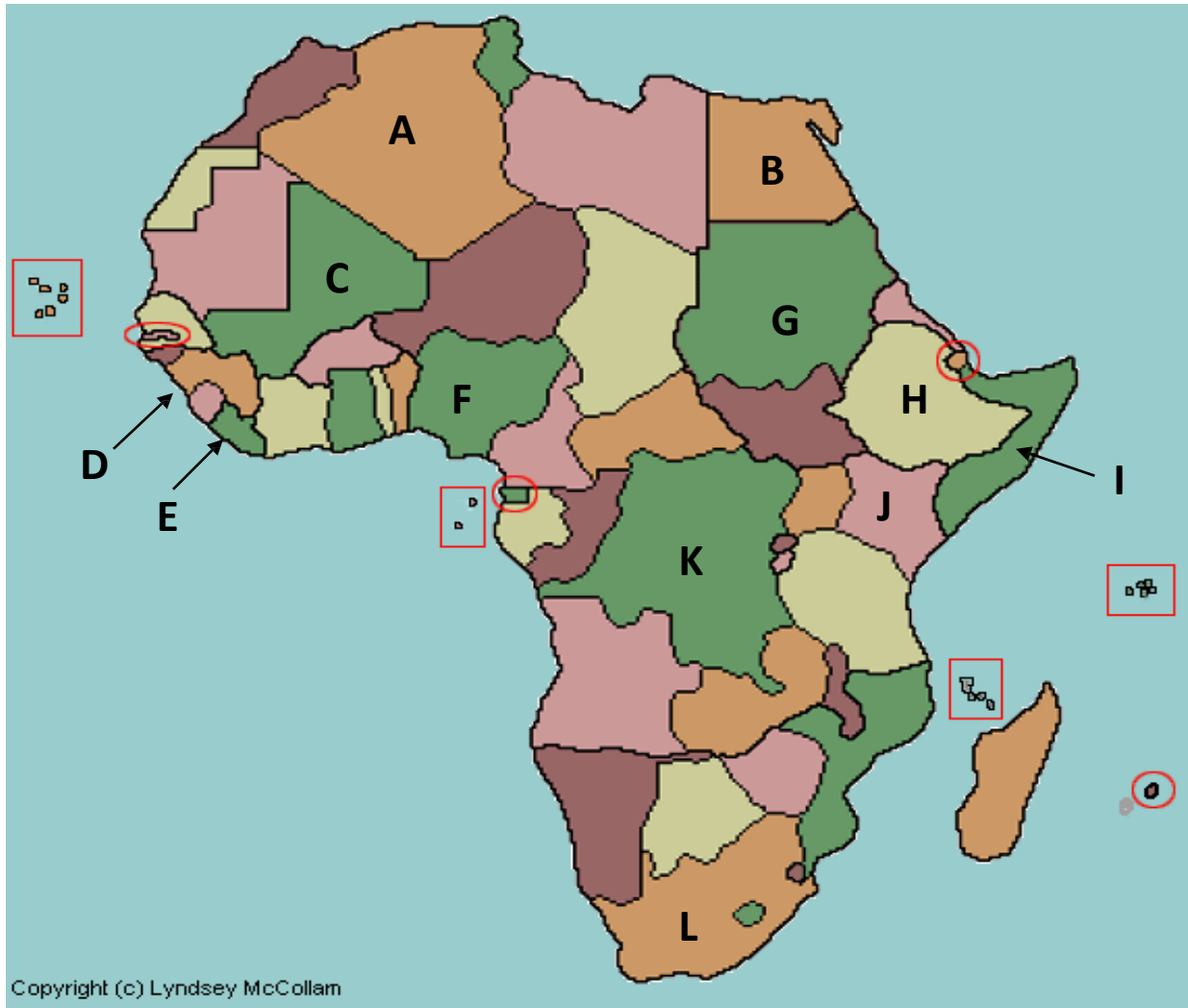
J. _____



7. Countries of the North African and Sub-Saharan Regions

Objective: Students will be able to identify and label a selection of countries found within each of the major regions of the world when provided a blank map of the world.

Countries: Identify each of the following: Algeria, Democratic Republic of Congo, Egypt, Ethiopia, Kenya, Liberia, Mali, Nigeria, Sierra Leone, Somalia, South Africa, Sudan



A. _____

B. _____

C. _____

D. _____

E. _____

F. _____

G. _____

H. _____

I. _____

J. _____

K. _____

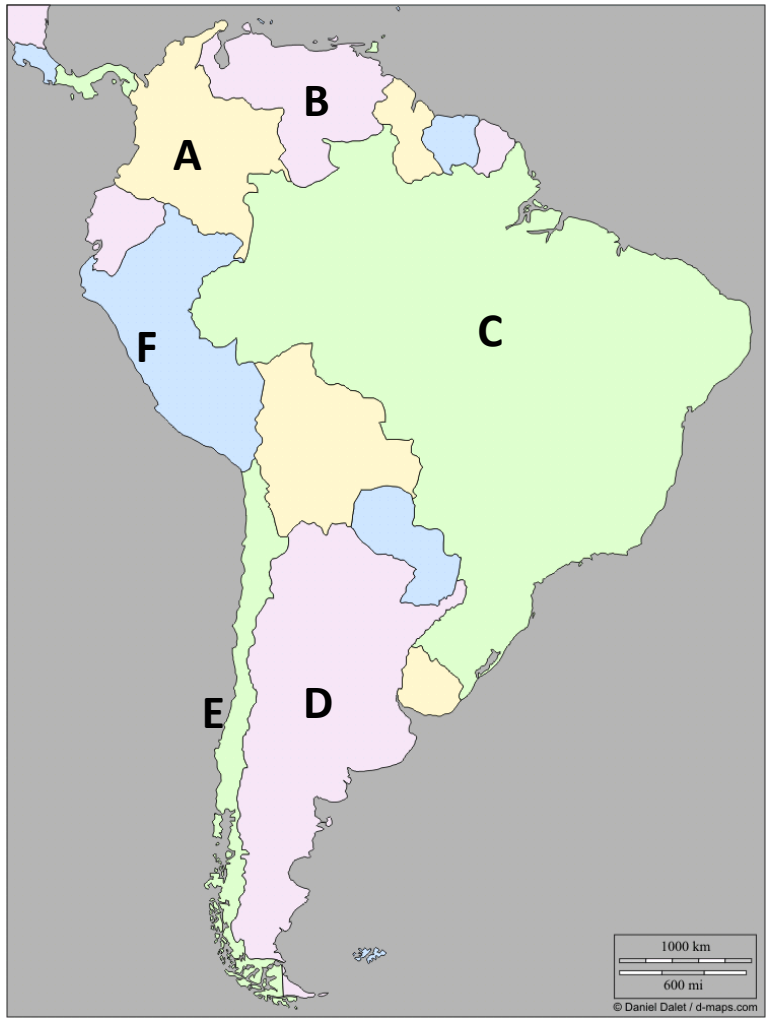
L. _____



8. Countries of the South American Region

Objective: Students will be able to identify and label a selection of countries found within each of the major regions of the world when provided a blank map of the world.

Countries: Identify each of the following: Argentina, Brazil, Chile, Colombia, Peru, Venezuela



A. _____

B. _____

C. _____

D. _____

E. _____

F. _____



9. Countries of the North American Region

Objective: Students will be able to identify and label a selection of countries found within each of the major regions of the world when provided a blank map of the world.

Countries: Identify each of the following: Canada, Mexico, United States

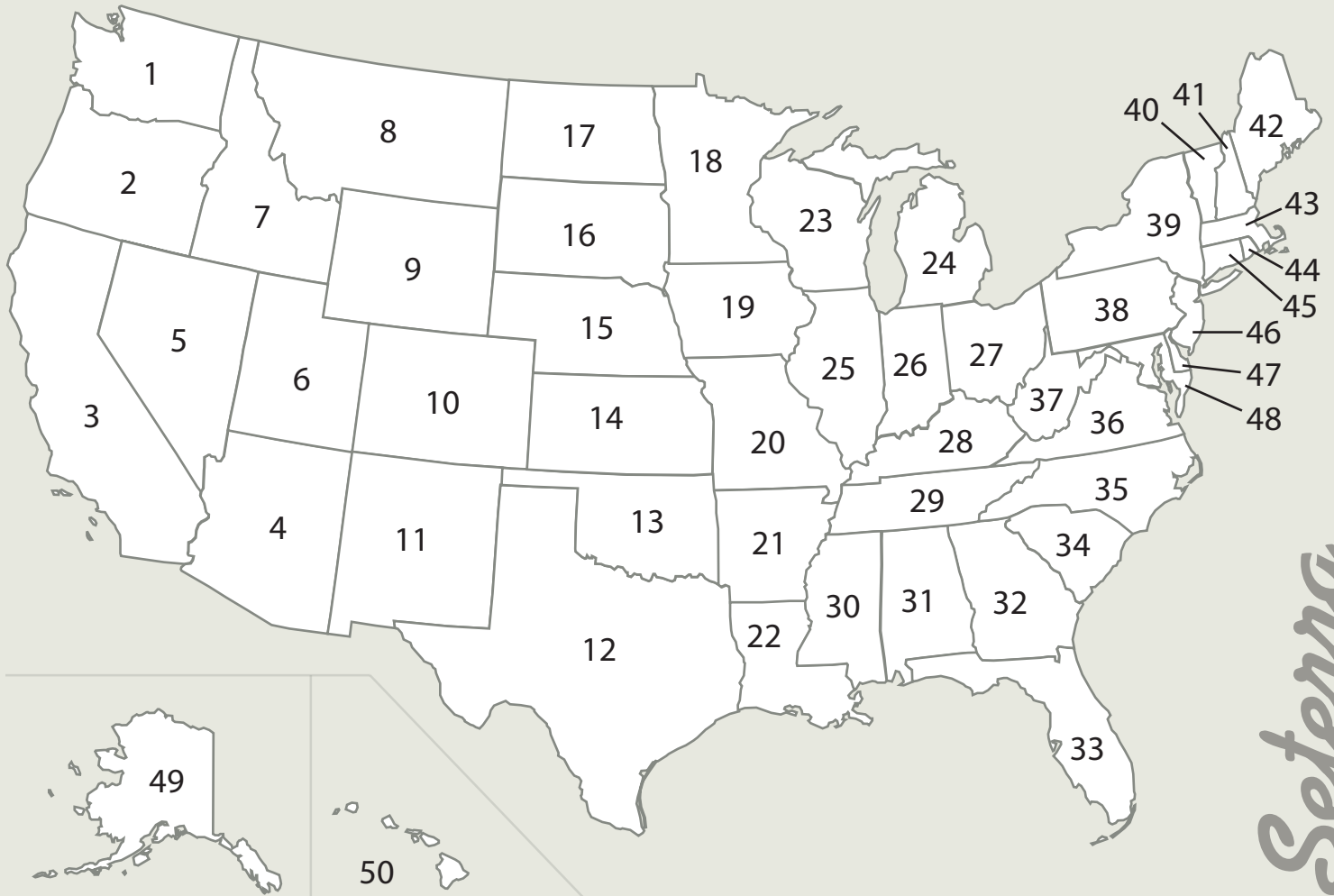


A. _____

B. _____

C. _____

THE UNITED STATES OF AMERICA



Seterra

1	_____	11	_____	21	_____	31	_____	41	_____
2	_____	12	_____	22	_____	32	_____	42	_____
3	_____	13	_____	23	_____	33	_____	43	_____
4	_____	14	_____	24	_____	34	_____	44	_____
5	_____	15	_____	25	_____	35	_____	45	_____
6	_____	16	_____	26	_____	36	_____	46	_____
7	_____	17	_____	27	_____	37	_____	47	_____
8	_____	18	_____	28	_____	38	_____	48	_____
9	_____	19	_____	29	_____	39	_____	49	_____
10	_____	20	_____	30	_____	40	_____	50	_____