




Summer Math Practice

Preparing for




7th-grade Math



These problems are meant to prepare you to be successful in 7th-grade math next year. The packet is designed so that you can practice a variety of problems each week. It is recommended that you complete only one page of the packet each week so that you are able to keep your brain fresh from now until August! Remember to *show all of your work* in the space provided below the problem. Please complete all work without the use of calculators.



You may email
Mrs. Tenery (ktenery@fwc.org)
for any other summer math needs.



I look forward to working with you in the fall!

Student Name _____

Name _____

Students are expected to know the following:

Multiplication tables for 1-12

x	1	2	3	4	5	6	7	8	9	10	11	12
1	1	2	3	4	5	6	7	8	9	10	11	12
2	2	4	6	8	10	12	14	16	18	20	22	24
3	3	6	9	12	15	18	21	24	27	30	33	36
4	4	8	12	16	20	24	28	32	36	40	44	48
5	5	10	15	20	25	30	35	40	45	50	55	60
6	6	12	18	24	30	36	42	48	54	60	66	72
7	7	14	21	28	35	42	49	56	63	70	77	84
8	8	16	24	32	40	48	56	64	72	80	88	96
9	9	18	27	36	45	54	63	72	81	90	99	108
10	10	20	30	40	50	60	70	80	90	100	110	120
11	11	22	33	44	55	66	77	88	99	110	121	132
12	12	24	36	48	60	72	84	96	108	120	132	144

PaperTrailDesign.com

Perfect Squares and Square Roots (1-12)

$1^2 = 1$	$\sqrt{1} = 1$	$7^2 = 49$	$\sqrt{49} = 7$
$2^2 = 4$	$\sqrt{4} = 2$	$8^2 = 64$	$\sqrt{64} = 8$
$3^2 = 9$	$\sqrt{9} = 3$	$9^2 = 81$	$\sqrt{81} = 9$
$4^2 = 16$	$\sqrt{16} = 4$	$10^2 = 100$	$\sqrt{100} = 10$
$5^2 = 25$	$\sqrt{25} = 5$	$11^2 = 121$	$\sqrt{121} = 11$
$6^2 = 36$	$\sqrt{36} = 6$	$12^2 = 144$	$\sqrt{144} = 12$

Measurement Conversions

1 week = 7 days	1 mile = 5280 feet
1 day = 24 hours	1 foot = 12 inches
1 hour = 60 minutes	1 mile = 1760 yards
1 minute = 60 seconds	1 yard = 3 feet
1 gallon = 4 quarts	1 kilometer = 1000 meters
1 quart = 2 pints	1 meter = 100 centimeters
1 pint = 2 cups	1 centimeter = 10 millimeters
1 kilogram = 1000 grams	1 pound = 16 ounces
1 liter = 1000 milliliters	1 dollar = 100 cents

Vocabulary

Evaluate - to calculate the value of an expression

Simplify - to reduce an expression to its simplest form (fewest number of terms possible)

Solve - to find a value for the variable that makes an equation true

Expression - numbers, symbols, and operations (+, -, ÷, x) grouped together (*can be evaluated/simplified*)

Equation - uses an *equal sign* to show two expressions are equal to the same value (*can be solved*)

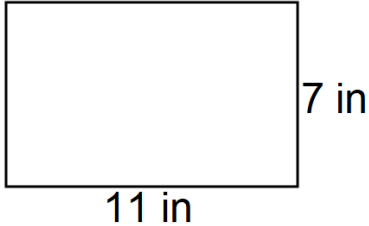
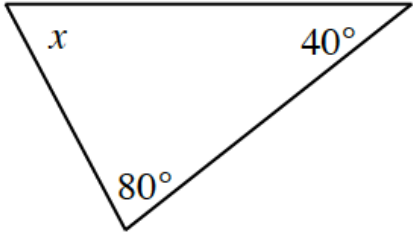
Name _____

Preparing for Math 7!



Week 1



<p>Find the sum.</p> $\frac{3}{4} + \frac{1}{12}$	<p>Round to the nearest TENTHS place:</p> <p>41,567.145</p>	<p>Find the area of the rectangle.</p> 
<p>Find the Greatest Common Factor between the following:</p> <p>12 and 36</p>	<p>Change the following mixed number into an improper fraction.</p> $2\frac{3}{8}$	<p>Find the missing angle measurement of the triangle below.</p> 
<p>Solve:</p> $x - 14 = 22$	<p>Evaluate the following.</p> $8 + (21 \div 3) - 5$	<p>Find the quotient.</p> $84.42 \div 6$

Name _____

Preparing for Math 7!



Week 2



<p>Find the sum. $8.74 + 10.35$</p>	<p>Find the product. $2\frac{1}{2} \times \frac{2}{5}$</p>	<p>Simplify the expression: $5(3 + x)$</p>
<p>Convert the following measurement. $32 \text{ pints} = \underline{\hspace{2cm}} \text{ gallons}$</p>	<p>Find the quotient. $396 \div 2.4$</p>	<p>List all the <i>factors</i> of 36:</p>
<p>Find the Least Common Multiple between the two numbers: <i>10 and 25</i></p>	<p>Write an expression to represent the following: <i>“the product of negative four and a number”</i></p>	<p>Evaluate the following. $42 \div (-6)$</p>

Name _____

Preparing for Math 7!



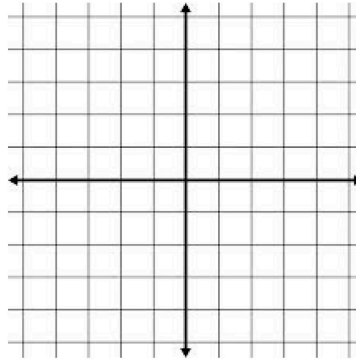
Week 3



Evaluate the following.
 $(20 - 6) \div 7 + 9$

Graph the following points on the coordinate plane.

$(1, -3), (2, 2), (-4, 0)$

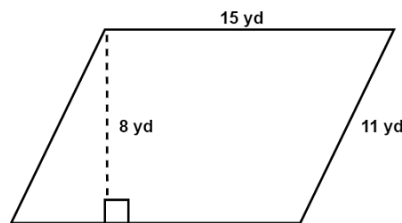


Find the quotient.

$$\frac{2}{11} \div \frac{1}{33}$$

Round to the nearest WHOLE NUMBER:
12,915.56

Find the area of the parallelogram.



Find the difference.

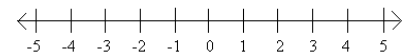
$$8.04 - 6.8$$

Evaluate the following:
 $22 + (-15)$

Matt would like to share $\frac{5}{8}$ of a pound of chocolate with his 3 friends. How many pounds of chocolate will each of the 4 people receive?

Graph the inequality on the number line below.

$$x \leq 2$$



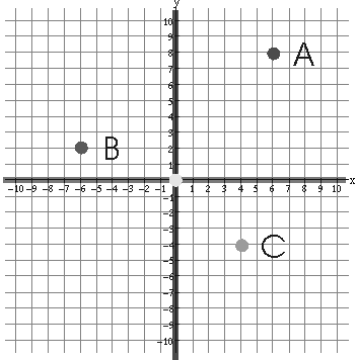
Name _____

Preparing for Math 7!



Week 4



<p>Find the mean. 16 23 40 32 12 29 17</p>	<p>Name each point on the graph:</p>  <p>A: (,) B: (,) C: (,)</p>	<p>Find the median. 33 54 21 40 56 29 48</p>
<p>Evaluate the following: $3^2 + (6 \times 4) - 5$</p>	<p>List two equivalent numbers for: $\frac{3}{4}$</p>	<p>Find the product. $(2.34)(5.6)$</p>
<p>Find the difference. $14.76 - 9.8$</p>	<p>Solve. $5x = 25$</p>	<p>Find the Greatest Common Factor between the numbers: 20 and 24</p>

Name _____

Preparing for Math 7!



Week 5



Find the difference.

$$10\frac{3}{4} - 6\frac{2}{5}$$

Find the range.

66 35 28 44 14 62 39

Round to the nearest TENTH:

87,321.09

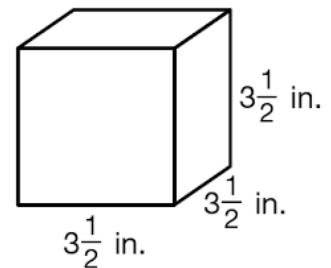
List two equivalent numbers for:

55%

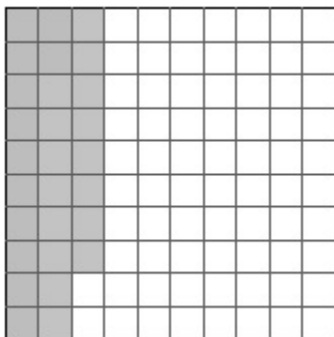
Simplify the expression:

$$x + 6 + 4x + 3$$

Find the volume of the rectangular prism.



What decimal describes the model below?



Find the quotient.

$$6 \div \frac{1}{2}$$

Find the sum.

$$24.1 + 3.74$$

Name _____

Preparing for Math 7!



Week 6



<p>Convert the following measurement. Show all work.</p> <p>48 inches = _____ feet</p>	<p>Evaluate the following. $(36 \div 6) + 14 - 9 \times 2$</p>	<p>Evaluate the following. 6^3</p>
<p>Write a numerical expression for the following:</p> <p><i>The product of 3 and y</i></p>	<p>Order the numbers from <i>least</i> to <i>greatest</i>.</p> <p>12.03, 1.2, 12.3, 1.203, 12.301</p>	<p>Find the difference.</p> $12\frac{4}{5} - 9\frac{1}{10}$
<p>Evaluate the following: $(-11) + (-13)$</p>	<p>Find the sum. $18\frac{7}{8} + 16\frac{3}{4}$</p>	<p>Solve. $x + 24 = 60$</p>

Name _____

Preparing for Math 7!



Week 7



Simplify the expression:

$$8(9x + 4)$$

Find the product.

$$188 \times 730$$

Find the quotient.

$$\frac{1}{4} \div 2$$

Round to the nearest HUNDREDTH.

11,922.3006

Evaluate the following:

$$-13 - 15$$

Find the mean.

36 53 41 39 52 59 49

Find the Greatest Common Factor

between the numbers:

45 and 48

Find the sum..

$$4\frac{2}{3} + 2\frac{3}{4}$$

Find the product.

$$\frac{1}{5} \times \frac{2}{3}$$

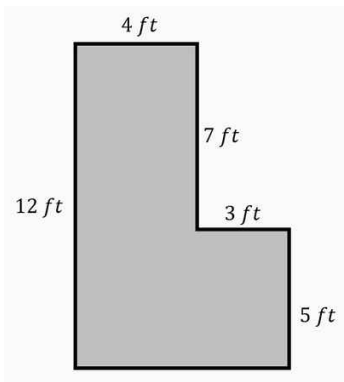
Name _____

Preparing for Math 7!



Week 8



<p>A recipe for lemonade calls for 2 tablespoons of powder for every 3 cups of water. Write a ratio equivalent to that of the lemonade mix.</p>	<p>Circle the prime numbers, and box the composite numbers.</p> <p>14 5 9 22 1 3 18</p> <p>33 7 2 16 29 13</p>	<p>Convert the following measurement. Show all work.</p> <p>6 pints = _____ cups</p>
<p>Find the sum.</p> $622.86 + 53.49$	<p>Find the product.</p> $\frac{1}{6} \times \frac{3}{4}$	<p>Find the Least Common Multiple between the two numbers: 6 and 18</p>
<p>Determine the missing side of the figure below.</p> 	<p>Write a fraction that represents 65%.</p>	<p>Round to the nearest WHOLE NUMBER.</p> <p>823.049</p>

Name _____

Preparing for Math 7!



Week 9



Simplify the expression:

$$6(2x - 4)$$

List all of the *factors* of:

48

Find the product.

$$2.91 \times 0.5$$

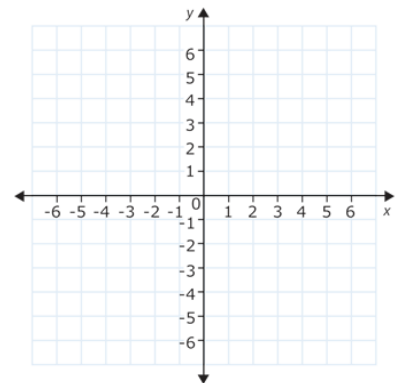
Find the Least Common Multiple
between the two numbers:

3 and 12

List all the *multiples* of 9.

Graph the following points on the
coordinate plane.

$(-2, 3)$, $(4, -5)$, $(0, 6)$



Find the range.

455 122 204 444 210 85

Find the product.

$$8.9 \times 2.5$$

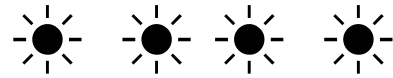
A candy store charges \$3.20 per
pound for chocolate peanuts. If Suzie
wants to purchase 2.3 pounds, then
how much will it cost?

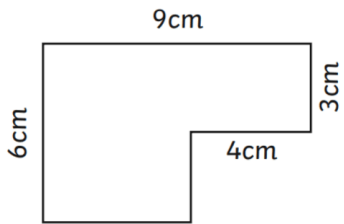

Name _____

Preparing for Math 7!



Week 10



<p>Find the area of the shape below. Break the larger shape into smaller shapes, if needed.</p> 	<p>What decimal describes the model below?</p> 	<p>Convert the following measurement. Show all work.</p> <p>8 cups = _____ ounces</p>
<p>Evaluate the following. 2^5</p>	<p>Find the Least Common Multiple between the two numbers: <i>5 and 25</i></p>	<p>Find the mean. 90 93 88 86 91 77 82</p>
<p>Convert the following measurement.</p> <p>32 ounces = _____ pounds</p>	<p>Evaluate the following: $-75 \div -15$</p>	<p>Find the quotient. $106.5 \div 15$</p>

Name _____