

Name \_\_\_\_\_ Date \_\_\_\_\_

# Perimeter and Area Worksheet

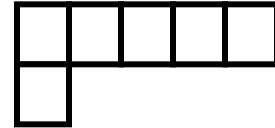
Write the perimeter and area of each figure.



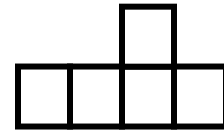
1. P = \_\_\_\_\_ A = \_\_\_\_\_



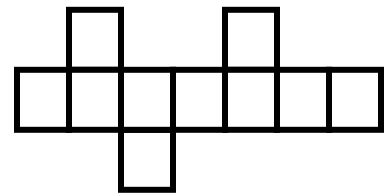
2. P = \_\_\_\_\_ A = \_\_\_\_\_



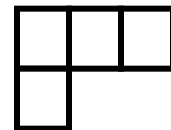
3. P = \_\_\_\_\_ A = \_\_\_\_\_



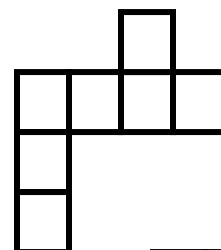
4. P = \_\_\_\_\_ A = \_\_\_\_\_



5. P = \_\_\_\_\_ A = \_\_\_\_\_



6. P = \_\_\_\_\_ A = \_\_\_\_\_



7. P = \_\_\_\_\_ A = \_\_\_\_\_

