

A Story of Units[®]

Eureka Math[™]

Grade 4, Module 2

Student File_A

*Contains copy-ready classwork and homework
as well as templates (including cut outs)*

Published by the non-profit Great Minds.

Copyright © 2015 Great Minds. All rights reserved. No part of this work may be reproduced or used in any form or by any means — graphic, electronic, or mechanical, including photocopying or information storage and retrieval systems — without written permission from the copyright holder. “Great Minds” and “Eureka Math” are registered trademarks of Great Minds.

Printed in the U.S.A.

This book may be purchased from the publisher at eureka-math.org

10 9 8 7 6 5 4 3 2 1

Name _____

Date _____

1. Convert the measurements.

a. $1 \text{ km} = \underline{\hspace{2cm}} \text{ m}$

b. $4 \text{ km} = \underline{\hspace{2cm}} \text{ m}$

c. $7 \text{ km} = \underline{\hspace{2cm}} \text{ m}$

d. $\underline{\hspace{2cm}} \text{ km} = 18,000 \text{ m}$

e. $1 \text{ m} = \underline{\hspace{2cm}} \text{ cm}$

f. $3 \text{ m} = \underline{\hspace{2cm}} \text{ cm}$

g. $80 \text{ m} = \underline{\hspace{2cm}} \text{ cm}$

h. $\underline{\hspace{2cm}} \text{ m} = 12,000 \text{ cm}$

2. Convert the measurements.

a. $3 \text{ km } 312 \text{ m} = \underline{\hspace{2cm}} \text{ m}$

b. $13 \text{ km } 27 \text{ m} = \underline{\hspace{2cm}} \text{ m}$

c. $915 \text{ km } 8 \text{ m} = \underline{\hspace{2cm}} \text{ m}$

d. $3 \text{ m } 56 \text{ cm} = \underline{\hspace{2cm}} \text{ cm}$

e. $14 \text{ m } 8 \text{ cm} = \underline{\hspace{2cm}} \text{ cm}$

f. $120 \text{ m } 46 \text{ cm} = \underline{\hspace{2cm}} \text{ cm}$

3. Solve.

a. $4 \text{ km} - 280 \text{ m}$

b. $1 \text{ m } 15 \text{ cm} - 34 \text{ cm}$

c. Express your answer in the smaller unit:
 $1 \text{ km } 431 \text{ m} + 13 \text{ km } 169 \text{ m}$

d. Express your answer in the smaller unit:
 $231 \text{ m } 31 \text{ cm} - 14 \text{ m } 48 \text{ cm}$

e. $67 \text{ km } 230 \text{ m} + 11 \text{ km } 879 \text{ m}$

f. $67 \text{ km } 230 \text{ m} - 11 \text{ km } 879 \text{ m}$

Name _____

Date _____

1. Find the equivalent measures.

a. $5 \text{ km} = \underline{\hspace{2cm}} \text{ m}$

b. $13 \text{ km} = \underline{\hspace{2cm}} \text{ m}$

c. $\underline{\hspace{2cm}} \text{ km} = 17,000 \text{ m}$

d. $60 \text{ km} = \underline{\hspace{2cm}} \text{ m}$

e. $7 \text{ m} = \underline{\hspace{2cm}} \text{ cm}$

f. $19 \text{ m} = \underline{\hspace{2cm}} \text{ cm}$

g. $\underline{\hspace{2cm}} \text{ m} = 2,400 \text{ cm}$

h. $90 \text{ m} = \underline{\hspace{2cm}} \text{ cm}$

2. Find the equivalent measures.

a. $7 \text{ km } 123 \text{ m} = \underline{\hspace{2cm}} \text{ m}$

b. $22 \text{ km } 22 \text{ m} = \underline{\hspace{2cm}} \text{ m}$

c. $875 \text{ km } 4 \text{ m} = \underline{\hspace{2cm}} \text{ m}$

d. $7 \text{ m } 45 \text{ cm} = \underline{\hspace{2cm}} \text{ cm}$

e. $67 \text{ m } 7 \text{ cm} = \underline{\hspace{2cm}} \text{ cm}$

f. $204 \text{ m } 89 \text{ cm} = \underline{\hspace{2cm}} \text{ cm}$

3. Solve.

a. $2 \text{ km } 303 \text{ m} - 556 \text{ m}$

b. $2 \text{ m} - 54 \text{ cm}$

c. Express your answer in the smaller unit:
 $338 \text{ km } 853 \text{ m} + 62 \text{ km } 71 \text{ m}$

d. Express your answer in the smaller unit:
 $800 \text{ m } 35 \text{ cm} - 154 \text{ m } 49 \text{ cm}$

e. $701 \text{ km} - 523 \text{ km } 445 \text{ m}$

f. $231 \text{ km } 811 \text{ m} + 485 \text{ km } 829 \text{ m}$

Name _____

Date _____

1. Complete the conversion table.

Mass	
kg	g
1	1,000
3	
	4,000
17	
	20,000
300	

2. Convert the measurements.

a. $1 \text{ kg } 500 \text{ g} = \underline{\hspace{2cm}} \text{ g}$

b. $3 \text{ kg } 715 \text{ g} = \underline{\hspace{2cm}} \text{ g}$

c. $17 \text{ kg } 84 \text{ g} = \underline{\hspace{2cm}} \text{ g}$

d. $25 \text{ kg } 9 \text{ g} = \underline{\hspace{2cm}} \text{ g}$

e. $\underline{\hspace{1cm}} \text{ kg } \underline{\hspace{1cm}} \text{ g} = 7,481 \text{ g}$

f. $210 \text{ kg } 90 \text{ g} = \underline{\hspace{2cm}} \text{ g}$

3. Solve.

a. $3,715 \text{ g} - 1,500 \text{ g}$

b. $1 \text{ kg} - 237 \text{ g}$

c. Express the answer in the smaller unit:
 $25 \text{ kg } 9 \text{ g} + 24 \text{ kg } 991 \text{ g}$


d. Express the answer in the smaller unit:
 $27 \text{ kg } 650 \text{ g} - 20 \text{ kg } 990 \text{ g}$

e. Express the answer in mixed units:
 $14 \text{ kg } 505 \text{ g} - 4,288 \text{ g}$

f. Express the answer in mixed units:
 $5 \text{ kg } 658 \text{ g} + 57,481 \text{ g}$

Use a tape diagram to model each problem. Solve using a simplifying strategy or an algorithm, and write your answer as a statement.

4. One package weighs 2 kilograms 485 grams. Another package weighs 5 kilograms 959 grams. What is the total weight of the two packages?



5. Together, a pineapple and a watermelon weigh 6 kilograms 230 grams. If the pineapple weighs 1 kilogram 255 grams, how much does the watermelon weigh?
6. Javier's dog weighs 3,902 grams more than Bradley's dog. Bradley's dog weighs 24 kilograms 175 grams. How much does Javier's dog weigh?

7. The table to the right shows the weight of three Grade 4 students. How much heavier is Isabel than the lightest student?

Student	Weight
Isabel	35 kg
Irene	29 kg 38 g
Sue	29,238 g

Name _____

Date _____

1. Complete the conversion table.

Mass	
kg	g
1	1,000
6	
	8,000
15	
	24,000
550	

2. Convert the measurements.

a. $2 \text{ kg } 700 \text{ g} = \underline{\hspace{2cm}} \text{ g}$

b. $5 \text{ kg } 945 \text{ g} = \underline{\hspace{2cm}} \text{ g}$

c. $29 \text{ kg } 58 \text{ g} = \underline{\hspace{2cm}} \text{ g}$

d. $31 \text{ kg } 3 \text{ g} = \underline{\hspace{2cm}} \text{ g}$

e. $66,597 \text{ g} = \underline{\hspace{1cm}} \text{ kg } \underline{\hspace{1cm}} \text{ g}$

f. $270 \text{ kg } 41 \text{ g} = \underline{\hspace{2cm}} \text{ g}$

3. Solve.

a. $370 \text{ g} + 80 \text{ g}$

b. $5 \text{ kg} - 730 \text{ g}$

c. Express the answer in the smaller unit:
 $27 \text{ kg } 547 \text{ g} + 694 \text{ g}$

d. Express the answer in the smaller unit:
 $16 \text{ kg} + 2,800 \text{ g}$

e. Express the answer in mixed units:
 $4 \text{ kg } 229 \text{ g} - 355 \text{ g}$

f. Express the answer in mixed units:
 $70 \text{ kg } 101 \text{ g} - 17 \text{ kg } 862 \text{ g}$

Use a tape diagram to model each problem. Solve using a simplifying strategy or an algorithm, and write your answer as a statement.

4. One suitcase weighs 23 kilograms 696 grams. Another suitcase weighs 25 kilograms 528 grams. What is the total weight of the two suitcases?

5. A bag of potatoes and a bag of onions combined weigh 11 kilograms 15 grams. If the bag of potatoes weighs 7 kilograms 300 grams, how much does the bag of onions weigh?

6. The table to the right shows the weight of three dogs. What is the difference in weight between the heaviest and lightest dog?

Dog	Weight
Lassie	21 kg 249 g
Riley	23 kg 128 g
Fido	21,268 g

Name _____

Date _____

1. Complete the conversion table.

Liquid Capacity	
L	mL
1	1,000
5	
38	
	49,000
54	
	92,000

2. Convert the measurements.

a. $2 \text{ L } 500 \text{ mL} = \underline{\hspace{2cm}} \text{ mL}$

b. $70 \text{ L } 850 \text{ mL} = \underline{\hspace{2cm}} \text{ mL}$

c. $33 \text{ L } 15 \text{ mL} = \underline{\hspace{2cm}} \text{ mL}$

d. $2 \text{ L } 8 \text{ mL} = \underline{\hspace{2cm}} \text{ mL}$

e. $3,812 \text{ mL} = \underline{\hspace{1cm}} \text{ L } \underline{\hspace{1cm}} \text{ mL}$

f. $86,003 \text{ mL} = \underline{\hspace{1cm}} \text{ L } \underline{\hspace{1cm}} \text{ mL}$

3. Solve.

a. $1,760 \text{ mL} + 40 \text{ L}$

b. $7 \text{ L} - 3,400 \text{ mL}$

c. Express the answer in the smaller unit:
 $25 \text{ L } 478 \text{ mL} + 3 \text{ L } 812 \text{ mL}$

d. Express the answer in the smaller unit:
 $21 \text{ L} - 2 \text{ L } 8 \text{ mL}$

e. Express the answer in mixed units:
 $7 \text{ L } 425 \text{ mL} - 547 \text{ mL}$

f. Express the answer in mixed units:
 $31 \text{ L } 433 \text{ mL} - 12 \text{ L } 876 \text{ mL}$


Use a tape diagram to model each problem. Solve using a simplifying strategy or an algorithm, and write your answer as a statement.

4. To make fruit punch, John's mother combined 3,500 milliliters of tropical drink, 3 liters 95 milliliters of ginger ale, and 1 liter 600 milliliters of pineapple juice.
 - a. Order the quantity of each drink from least to greatest.

 - b. How much punch did John's mother make?

5. A family drank 1 liter 210 milliliters of milk at breakfast. If there were 3 liters of milk before breakfast, how much milk is left?

6. Petra's fish tank contains 9 liters 578 milliliters of water. If the capacity of the tank is 12 liters 455 milliliters of water, how many more milliliters of water does she need to fill the tank?



Name _____

Date _____

1. Complete the conversion table.

Liquid Capacity	
L	mL
1	1,000
8	
27	
	39,000
68	
	102,000

2. Convert the measurements.

a. $5 \text{ L } 850 \text{ mL} = \underline{\hspace{2cm}} \text{ mL}$

b. $29 \text{ L } 303 \text{ mL} = \underline{\hspace{2cm}} \text{ mL}$

c. $37 \text{ L } 37 \text{ mL} = \underline{\hspace{2cm}} \text{ mL}$

d. $17 \text{ L } 2 \text{ mL} = \underline{\hspace{2cm}} \text{ mL}$

e. $13,674 \text{ mL} = \underline{\hspace{1cm}} \text{ L } \underline{\hspace{1cm}} \text{ mL}$

f. $275,005 \text{ mL} = \underline{\hspace{1cm}} \text{ L } \underline{\hspace{1cm}} \text{ mL}$

3. Solve.

a. $545 \text{ mL} + 48 \text{ mL}$

b. $8 \text{ L} - 5,740 \text{ mL}$

c. Express the answer in the smaller unit:
 $27 \text{ L } 576 \text{ mL} + 784 \text{ mL}$

d. Express the answer in the smaller unit:
 $27 \text{ L} + 3,100 \text{ mL}$

e. Express the answer in mixed units:
 $9 \text{ L } 213 \text{ mL} - 638 \text{ mL}$

f. Express the answer in mixed units:
 $41 \text{ L } 724 \text{ mL} - 28 \text{ L } 945 \text{ mL}$

Name _____

Date _____

1. Complete the table.

Smaller Unit	Larger Unit	How Many Times as Large as?
one	hundred	100
centimeter		100
one	thousand	1,000
gram		1,000
meter	kilometer	
milliliter		1,000
centimeter	kilometer	

2. Fill in the units in word form.

a. 429 is 4 hundreds 29 _____.

b. 429 cm is 4 _____ 29 cm.

c. 2,456 is 2 _____ 456 ones.

d. 2,456 m is 2 _____ 456 m.

e. 13,709 is 13 _____ 709 ones.

f. 13,709 g is 13 kg 709 _____.

3. Fill in the unknown number.

a. _____ is 456 thousands 829 ones.

b. _____ mL is 456 L 829 mL.

4. Use words, equations, or pictures to show and explain how metric units are like and unlike place value units.

5. Compare using $>$, $<$, or $=$.

a. 893,503 mL 89 L 353 mL

b. 410 km 3 m 4,103 m

c. 5,339 m 533,900 cm

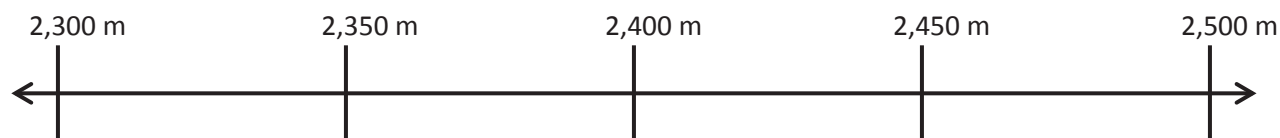
6. Place the following measurements on the number line:

2 km 415 m

2,379 m

2 km 305 m

245,500 cm



7. Place the following measurements on the number line:

2 kg 900 g

3,500 g

1 kg 500 g

2,900 g

750 g



Name _____

Date _____

1. Complete the table.

Smaller Unit	Larger Unit	How Many Times as Large as?
centimeter	meter	100
	hundred	100
meter	kilometer	
gram		1,000
one		1,000
milliliter		1,000
one	hundred thousand	

2. Fill in the unknown unit in word form.

a. 135 is 1 _____ 35 ones.

b. 135 cm is 1 _____ 35 cm.

c. 1,215 is 1 _____ 215 ones.

d. 1,215 m is 1 _____ 215 m.

e. 12,350 is 12 _____ 350 ones.

f. 12,350 g is 12 kg 350 _____.

3. Write the unknown number.

a. _____ is 125 thousands 312 ones.

b. _____ mL is 125 L 312 mL.

4. Fill in each with $>$, $<$, or $=$.

a. 890,353 mL 89 L 353 mL

b. 2 km 13 m 2,103 m

5. Brandon's backpack weighs 3,140 grams. Brandon weighs 22 kilograms 610 grams more than his backpack. If Brandon stands on a scale wearing his backpack, what will the weight read?

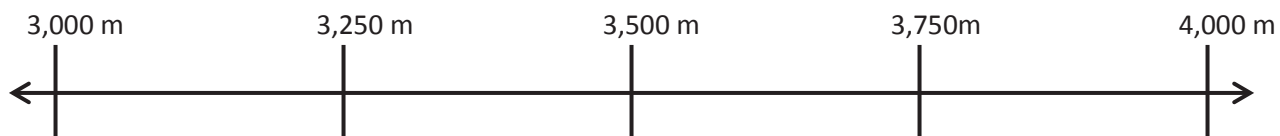
6. Place the following measurements on the number line:

3 km 275 m

3,500 m

3 km 5 m

394,000 cm



7. Place the following measurements on the number line:

1 kg 379 g

3,079 g

2 kg 79 g

3,579 g

579 g



Name _____

Date _____

Model each problem with a tape diagram. Solve and answer with a statement.

1. The potatoes Beth bought weighed 3 kilograms 420 grams. Her onions weighed 1,050 grams less than the potatoes. How much did the potatoes and onions weigh together?



2. Adele let out 18 meters 46 centimeters of string to fly her kite. She then let out 13 meters 78 centimeters more before reeling back in 590 centimeters. How long was her string after reeling it in?



3. Shyan's barrel contained 6 liters 775 milliliters of paint. She poured in 1 liter 118 milliliters more. The first day, Shyan used 2 liters 125 milliliters of the paint. At the end of the second day, there were 1,769 milliliters of paint remaining in the barrel. How much paint did Shyan use on the second day?

4. On Thursday, the pizzeria used 2 kilograms 180 grams less flour than they used on Friday. On Friday, they used 12 kilograms 240 grams. On Saturday, they used 1,888 grams more than on Friday. What was the total amount of flour used over the three days?



5. The gas tank in Zachary's car has a capacity of 60 liters. He adds 23 liters 825 milliliters of gas to the tank, which already has 2,050 milliliters of gas. How much more gas can Zachary add to the gas tank?
6. A giraffe is 5 meters 20 centimeters tall. An elephant is 1 meter 77 centimeters shorter than the giraffe. A rhinoceros is 1 meter 58 centimeters shorter than the elephant. How tall is the rhinoceros?

4. A Springer Spaniel weighs 20 kilograms 490 grams. A Cocker Spaniel weighs 7,590 grams less than a Springer Spaniel. A Newfoundland weighs 52 kilograms 656 grams more than a Cocker Spaniel. What is the difference, in grams, between the weights of the Newfoundland and the Springer Spaniel?
5. Marsha has three rugs. The first rug is 2 meters 87 centimeters long. The second rug has a length 98 centimeters less than the first. The third rug is 111 centimeters longer than the second rug. What is the difference in centimeters between the length of the first rug and the third rug?
6. One barrel held 60 liters 868 milliliters of sap. A second barrel held 20,089 milliliters more sap than the first. A third barrel held 40 liters 82 milliliters less sap than the second. If the sap from the three barrels was poured into a larger container, how much sap would there be in all?