

# Week 1: Day 1

## Syllables

Put the 6 words in the correct box.

backpack family castle  
surfer elephant ladybug

2 syllables

3 syllables

## ABC Order

Put the 10 words in ABC Order.

bag	rat
cat	lag
bit	tug
mop	top
fat	pig

1. \_\_\_\_\_
2. \_\_\_\_\_
3. \_\_\_\_\_
4. \_\_\_\_\_
5. \_\_\_\_\_
6. \_\_\_\_\_
7. \_\_\_\_\_
8. \_\_\_\_\_
9. \_\_\_\_\_
10. \_\_\_\_\_

## Adverbs

Circle the adverb in each of the sentences.

The girl runs quickly.

My dog barks loudly.

My friend whispers softly.

## Nouns

Circle the people, places, & things.

house zoo

an him

boy who

box shovel

vest the

## Prefixes

Circle the prefix in each word.

misstep

recall

unhappy

retell

preview

## Sentence Construction

Correct the sentences below. Rewrite them correctly.

1. jacks hat wuz blue and green

1. \_\_\_\_\_

2. he haz a bucket

2. \_\_\_\_\_



## Minute 48

Name \_\_\_\_\_

1. Circle the number with a 3 in the tens place: 132    321    23
2. Draw a box around the month that comes right before June.

April                  July                  May

For questions 3 and 4, circle Yes or No.

3. Is a bar of soap shorter than 1 foot?    Yes    No
4. Is a flagpole taller than 1 foot?    Yes    No
5. Write what the time was 2 hours before. \_\_\_\_\_



6.  $22 + \square = 32$

Use the picture to complete questions 7 and 8.



Tom




Sharon

7. How much money does Sharon have? \_\_\_\_\_ ¢
8. Who has less money?  
\_\_\_\_\_
9.  $8 + 9 + 5 =$  \_\_\_\_\_

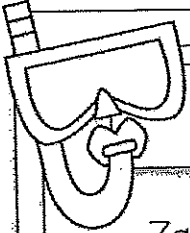



10. Write the name of the shape. \_\_\_\_\_





# Week 1: Day 2



## Reading Comprehension

Zack and Max went to the beach with their parents. When they got there Zack wanted to play in the sand. Max wanted to go in the water. They decided to flip a coin. Zack called heads and Max called tails. The coin landed on heads so the boys built a sand castle first. After they finished building the sand castle, the boys ran into the water. They saw lots of little fish. When they got out of the water, they picked up shells. Zack and Max had a great day at the beach!



Read the story above. Use the story to answer the questions.

1. Where are Zack and Max?

---

---

3. How did the boys solve their problem?

---

---

2. What was the problem?

---

---

4. How would you solve the problem?

---

---

## Sentence Construction


Correct the sentences below. Rewrite them correctly.


1. pam and sam fund shels

1.

2. did she wear the saras hat

2.





## Minute 49

Name \_\_\_\_\_

1. Circle the number that has an 8 in the ones place:

879

978

897

2. Write the missing numbers.

149, 150, \_\_\_\_\_, 152, \_\_\_\_\_, \_\_\_\_\_

3. 
$$\begin{array}{r} 92 \\ -79 \\ \hline \end{array}$$

4.  $6 + 3 + 8 =$  \_\_\_\_\_

Use the menu to complete questions 5 and 6.

Lunch Menu	
juice 15¢	sandwich 35¢
milk 12¢	pizza 42¢

5. Which costs more—pizza or a sandwich? \_\_\_\_\_
6. Mike bought juice and pizza. How much did he spend? \_\_\_\_\_ ¢
7.  $44 + 30 =$  \_\_\_\_\_

Use the letters to complete questions 8–10.

A B C D E F G H I J

8. The fourth letter is \_\_\_\_\_. 9. The ninth letter is \_\_\_\_\_.  
10. The seventh letter is \_\_\_\_\_.

# Week 1: Day 3

## Dictionary Skills

Read the definitions. Decide which definition was used in the sentence.

duck

1. a bird that quacks (noun)
2. to get out of the way of something (verb)

The duck swam in the lake.

- ☐ Definition 1
- ☐ Definition 2

## ABC Order

Put the 10 words in ABC Order.

rate	bale
tale	male
lake	fate
date	pale
file	tile

1. \_\_\_\_\_
2. \_\_\_\_\_
3. \_\_\_\_\_
4. \_\_\_\_\_
5. \_\_\_\_\_
6. \_\_\_\_\_
7. \_\_\_\_\_
8. \_\_\_\_\_
9. \_\_\_\_\_
10. \_\_\_\_\_

## Adverbs

Circle the adverb in each of the sentences.

We walked home slowly.

The snow fell lightly.

Ben cut paper carefully.

## Verbs

Circle the verbs (action words) below.

run      friend  
walk      talked  
and      cut  
one      it  
called      write

## Compound Words

Circle the compound words below.

football	following
crazy	fireworks
walked	butterfly
himself	couches
carrying	sunshine

## Sentence Construction

Correct the sentences below. Rewrite them correctly.

i. did jessica may and tim go to the store

1. \_\_\_\_\_

2. my birthday wuz march 8 2013

2. \_\_\_\_\_



# Minute 51

Name \_\_\_\_\_

1. Write how many hours have passed.  
\_\_\_\_\_ hours

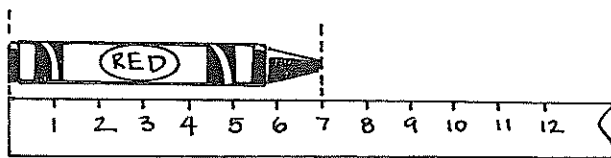


2. 
$$\begin{array}{r} 3 \\ 7 \\ + 5 \\ \hline \end{array}$$

3.  $74 - \square = 22$

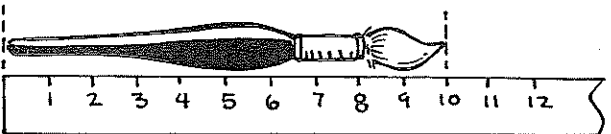
For questions 4 and 5, write how many centimeters long each object is.

4.



\_\_\_\_\_ cm

5.




\_\_\_\_\_ cm

6. Write the missing even numbers.

88, 90, \_\_\_\_\_, 94, 96, \_\_\_\_\_, 100









7. 
$$\begin{array}{r} 41 \\ - 38 \\ \hline \end{array}$$

Use the pictograph to complete questions 8-10.



8. How many fish does  equal? \_\_\_\_\_ fish

9. Skip count. How many fish are in Fins? \_\_\_\_\_ fish

10. How many more fish are in Flips than are in Fins? \_\_\_\_\_ fish

Fish Store	 = 10 fish
Fins	  
Flips	   

# Week 2: Day 1



## Syllables

Put the 6 words in the correct box.

potato

starfish

basketball

hamburger

Frisbee

sunshine

2 syllables

3 syllables

## ABC Order

Put the 10 words in ABC Order.

dog	lizard
snake	ferret
hamster	bird
rabbit	horse
turtle	cat

1. \_\_\_\_\_
2. \_\_\_\_\_
3. \_\_\_\_\_
4. \_\_\_\_\_
5. \_\_\_\_\_
6. \_\_\_\_\_
7. \_\_\_\_\_
8. \_\_\_\_\_
9. \_\_\_\_\_
10. \_\_\_\_\_

## Adverbs

Circle the adverb in each of the sentences.

The child waited patiently.

The band played loudly.

He ate it quickly.

## Adjectives

Find the describing words.

one

talk

pretty

hot

barn

friend

bright

cup

chair

blue

## Suffixes

Circle the suffix in each word.

useless

durable

bigger

badly

helpless

## Sentence Construction


Correct the sentences below. Rewrite them correctly.

1. the flowers werent growing

1. \_\_\_\_\_

2. april come before may

2. \_\_\_\_\_



## Minute 52

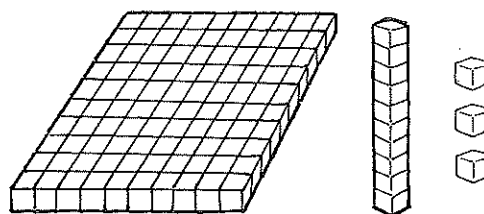
Name \_\_\_\_\_

1. 
$$\begin{array}{r} 56 \\ - 34 \\ \hline \end{array}$$

2.  $8 + 4 + 8 = \underline{\hspace{2cm}}$

3. How many blocks are there?

Circle: 131 or 113



4. Write the next number. 398, 399, \_\_\_\_\_

5. Circle the digit in the ones place: 342

6. Write the number seven hundred thirty-five. \_\_\_\_\_

7. Write how many hours have passed.




\_\_\_\_\_ hours

8. 100 centimeters equals 1 meter. Circle: True or False

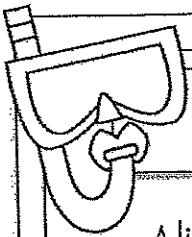

9. How many hours do most children sleep each night?  
Circle the answer. 10 hours 30 hours

10. A square has 4 sides all the same length. Circle: True or False





## Week 2: Day 2



### Reading Comprehension

Alicia and Pam like to go to school. They get to learn new things and they get to see their friends. Both of them are in second grade with Mrs. Johnson. Alicia's favorite subject is science. She likes to learn about plants. Pam's favorite subject is math. She likes to see how fast she can add. Both of them love recess. Alicia likes the swings and Pam likes the slide. Alicia and Pam think that school is a lot of fun.



Read the story above. Use the story to answer the questions.

1. Why do you think that Alicia's favorite subject is science?  
\_\_\_\_\_  
\_\_\_\_\_
2. Why does Pam like math?  
\_\_\_\_\_
3. How are Alicia and Pam alike?  
\_\_\_\_\_  
\_\_\_\_\_
4. How are Alicia and Pam different?  
\_\_\_\_\_  
\_\_\_\_\_

### Sentence Construction



Correct the sentences below. Rewrite them correctly.

1. how old is megans aunt

1. \_\_\_\_\_

2. didnt lesley help you find the dog

2. \_\_\_\_\_



## Minute 54

Name \_\_\_\_\_

1. Circle the name of the solid:

cone   cube   rectangular prism



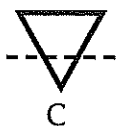
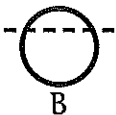
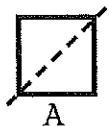
2. Underline the digit in the hundreds place.    352

3.  $70 - 16 =$  \_\_\_\_\_

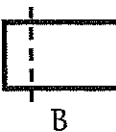
4. Write the missing numbers. 400, 500, \_\_\_\_\_, 700, 800, \_\_\_\_\_

In questions 5 and 6, which shapes have matching parts when they are folded on the line? Circle the answer.

5.



6.



7.  $7 + 5 + 8 =$  \_\_\_\_\_

8. Circle the greater amount:



A



B

9. Write the missing odd number.  
121, 123, 125, 127, \_\_\_\_\_

10. 
$$\begin{array}{r} 41 \\ 28 \\ + 31 \\ \hline \end{array}$$

# Week 2: Day 3

## Dictionary Skills

Read the definitions. Decide which definition was used in the sentence.

ring

1. a round object you wear on your finger(noun)
2. the sound a phone makes(verb)

My ring is on my left hand.

- ☐ Definition 1
- ☐ Definition 2

## ABC Order

Put the 10 words in ABC Order.

grapes	orange
apple	pear
mango	fruit
banana	melon
cherry	berry

1. \_\_\_\_\_
2. \_\_\_\_\_
3. \_\_\_\_\_
4. \_\_\_\_\_
5. \_\_\_\_\_
6. \_\_\_\_\_
7. \_\_\_\_\_
8. \_\_\_\_\_
9. \_\_\_\_\_
10. \_\_\_\_\_

## Pronouns

Circle the pronoun that can replace the underlined words.

The kids ran outside.

They

She

Tim walked home.

He

Him

## Proper Nouns

Circle the words that need capital letters.

april

kid

monday

zack

too

lamp

christmas

may

light

friend

## Compound Words

Circle the compound words below.

hamburger

funny

talking

popcorn

surfer

airport

sunflower

ladder

calling

firefly

## Sentence Construction

Correct the sentences below. Rewrite them correctly.

1. robin likes dogs cats fishes and rabbits

1. \_\_\_\_\_

2. thanksgiving is in november

2. \_\_\_\_\_



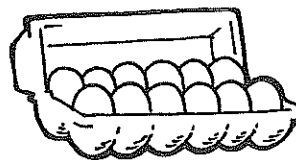
# Minute 63

Name \_\_\_\_\_

1. Write the numbers that come before and after.  
\_\_\_\_\_ 789 \_\_\_\_\_

















2.  $\begin{array}{r} 45 \\ + 10 \\ \hline \end{array}$


3. Write how many eggs are in one dozen. \_\_\_\_\_ eggs



Use the pictograph to complete questions 4–6.

Flower Sales

Monday	  
Tuesday	   
Wednesday	
Thursday	    
Friday	  









 = 10 flowers

4. How many flowers were sold on Tuesday? \_\_\_\_\_ flowers

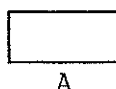
5. Which two days sold the same number of flowers?  
\_\_\_\_\_ and  
\_\_\_\_\_

6. Which day sold the least flowers? \_\_\_\_\_

7.  $632 =$  \_\_\_\_\_ hundreds \_\_\_\_\_ tens \_\_\_\_\_ ones

8.  $2 + 2 + 2 + 2 =$     +   +   +  

9. Circle the cylinder:



10. Write the day that comes next after Saturday. \_\_\_\_\_

# Week 3: Day 1

## Syllables

Put the 6 words in the correct box.

horses

garden

candy

grasshopper

dinosaur

notebook

2 syllables

3 syllables

## ABC Order

Put the 10 words in ABC Order.

shovel	ocean
bucket	flip flops
shell	towel
popsicle	sun
waves	beach

- \_\_\_\_\_
- \_\_\_\_\_
- \_\_\_\_\_
- \_\_\_\_\_
- \_\_\_\_\_
- \_\_\_\_\_
- \_\_\_\_\_
- \_\_\_\_\_
- \_\_\_\_\_
- \_\_\_\_\_

## Pronouns

Circle the pronoun that can replace the underlined words.

His mom made us pizza.

Her

She

I called Max on the phone.

he

him

## Adjectives

Find the describing words.

cloudy

big

eyes

nice

floor

and

call

short

soft

carpet

## Root Words

Circle the root words below.

tell	tells
bigger	big
smiling	smile
eat	eating
sleep	sleeps

## Sentence Construction


Correct the sentences below. Rewrite them correctly.

1. stephanie couldnt go to walmart

1. \_\_\_\_\_

2. meg wrote a letter on april 1, 2011

2. \_\_\_\_\_



## Minute 65

Name \_\_\_\_\_

1. Circle the greater number:  
359    395

2.  $80 + 10 =$  \_\_\_\_\_

3. Nancy has 16¢. Randy has 7¢ less than Nancy. How much money does Randy have? \_\_\_\_\_ ¢


4. Write how much money in all. \_\_\_\_\_ ¢



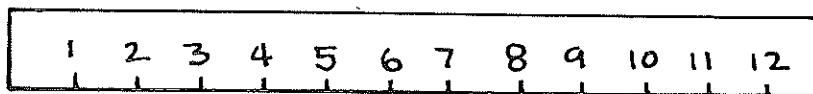
5. Megan has one dozen cars. How many cars is that? \_\_\_\_\_ cars

6. Use < or >.     $851$  \_\_\_\_\_  $815$

7.  $3 + 3 + 3 + 3 =$




8. Jana needs 10 centimeters of ribbon. Circle the ribbon she needs.



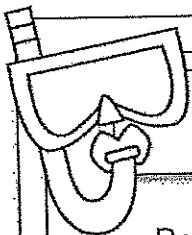

9. Write the number four hundred thirty-eight. \_\_\_\_\_

10. Write how many hours have passed. \_\_\_\_\_ hours





## Week 3: Day 2



### Reading Comprehension

Ben is my dog. He likes to bark at big trucks. He likes to catch his baseball. When he gets hungry, Ben pushes his dish to my feet. One day, I went outside to get the mail. When I came back inside I could not find Ben. I looked under my bed, in the bathroom, and in the kitchen. He was not in any of those places. All of a sudden, I heard a scratching noise and a bark. I ran to the door and opened it. Ben had followed me outside. I gave him a treat for waiting for me. Ben is a great dog!



Read the story above. Use the story to answer the questions.

1. What was the problem?

\_\_\_\_\_

\_\_\_\_\_

2. How would you search for your dog if it was missing?

\_\_\_\_\_

\_\_\_\_\_

3. Name two places the boy looked for Ben.

\_\_\_\_\_

\_\_\_\_\_

4. Where was Ben?

\_\_\_\_\_

\_\_\_\_\_

### Sentence Construction

Correct the sentences below. Rewrite them correctly.

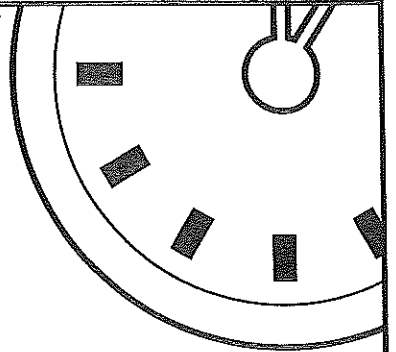
1. alicia cant eat onions beans or eggs

1. \_\_\_\_\_

2. did you see the boys horse run


2. \_\_\_\_\_





# Minute 68

Name \_\_\_\_\_



1. Circle how much money in all:  
\$2.23      \$2.33      \$2.43

2.  $89 + 10 =$  \_\_\_\_\_

3. Write how many hours have passed.  
\_\_\_\_\_ hours



4.  $56 + 40 =$  \_\_\_\_\_

5. Use < or >. \$2.35 \_\_\_\_\_ \$2.53

6. Is this shape a square or a cube? \_\_\_\_\_



Use the table of tallies to complete questions 7 and 8.

Children's Favorite Books

Tall Tales	<del>    </del> <del>    </del>
Fantasy	<del>    </del>

7. How many children like fantasy books? \_\_\_\_\_ children

8. What is the most favorite kind of books? \_\_\_\_\_

9. Is this a line of symmetry? Circle: Yes or No



10. In the number 563, which digit is in the tens place? \_\_\_\_\_



# Week 3: Day 3

## Dictionary Skills

Read the definitions. Decide which definition was used in the sentence.

### bat

1. an object used to hit a ball(noun)
2. an animal that flies at night(noun)

The bat lives in a cave.

☐ Definition 1

☐ Definition 2

## ABC Order

Put the 10 words in ABC Order.

rock	luck
sock	dock
lock	pack
tack	mock
crock	duck

1. \_\_\_\_\_
2. \_\_\_\_\_
3. \_\_\_\_\_
4. \_\_\_\_\_
5. \_\_\_\_\_
6. \_\_\_\_\_
7. \_\_\_\_\_
8. \_\_\_\_\_
9. \_\_\_\_\_
10. \_\_\_\_\_

## Pronouns

Circle the pronoun that can replace the underlined words.

Zack and I went to dinner.

They

We

The tree was tall.

It

He

## Proper Nouns

Circle the words that need capital letters.

jackson

ball

leaves

june

monday

lisa

ribbon

pens

october

glue

## Prefixes

Circle the prefix in each word.

preface

unhelpful

mistake

review

mistreat

## Sentence Construction


Correct the sentences below. Rewrite them correctly.

1. january an february arent hot months

1. \_\_\_\_\_

2. we went surfing in california

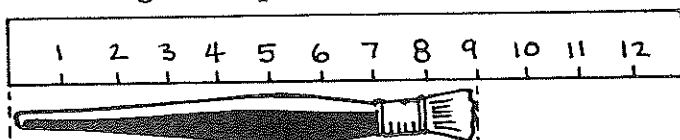
2. \_\_\_\_\_



## Minute 70

Name \_\_\_\_\_

1. How long is the paintbrush? \_\_\_\_\_ cm

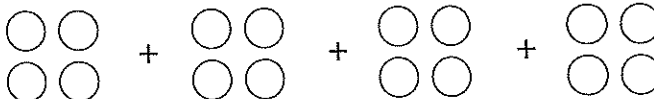


2. Circle the number that is less: 298      689


3. Draw a line of symmetry on the shape.



4.  $4 + 4 + 4 + 4 =$  \_\_\_\_\_



5. Circle the time:  
1:25      7:25



6. Is the circle divided into 4 equal parts?  
Circle: Yes    or    No



7. In the number 328, which digit is in the hundreds place? \_\_\_\_\_

8. Claude picks a half-dozen apples. How many apples did he pick?  
\_\_\_\_\_ apples

9. 
$$\begin{array}{r} 58 \\ - 29 \\ \hline \end{array}$$

10. Use  $<$  or  $>$ .       $789$  \_\_\_\_\_  $798$

### 3RD GRADE SUMMER READING 2023

#### YOUR TEACHERS' FAVORITE BOOKS!

Video for how to get Digital Books through Overdrive (Libby)		Video for how to get Digital Books through Hoopla		
<a href="https://drive.google.com/file/d/1AqR5o2g2JfE1Zk1z2tnt5G6Q6/view">https://drive.google.com/file/d/1AqR5o2g2JfE1Zk1z2tnt5G6Q6/view</a>		<a href="https://drive.google.com/file/d/1DqR5o2g2JfE1Zk1z2tnt5G6Q6/view">https://drive.google.com/file/d/1DqR5o2g2JfE1Zk1z2tnt5G6Q6/view</a>		
Book Title	Author	Reading Level	Genre	Specific Genre
The Bravest Dog Ever: The True Story of Balto	Natalie Standiford	L	Non-Fiction	
Young Cam Jansen (Series- multiple titles)	David Adler	L-N	Fiction	Mystery
Donovan's Word Jar	Monalisa Degross	N	Fiction	Realistic Fiction
Juana and Lucas (series-multiple titles)	Juana Medina	P	Fiction	Realistic Fiction
Flat Stanley (Series- multiple titles)	Jeff Brown	M- N	Fiction	Fantasy
Black Lagoon (various titles)	Mike Thaler	N-O	Fiction	Fantasy
Sherlock Sam (series - multiple titles)	AJ Low	O	Fiction	Realistic Fiction
Ramona Quimby Age 8 (and other titles)	Beverly Cleary	O	Fiction	Realistic Fiction
Who Would win? (various titles)	Jerry Pallotta	O-P	Non-Fiction	
Puppy Place (various titles)	Ellen Miles	O-P	Fiction	Realistic Fiction
Who was...? Various titles	Various authors	P-R	Non-Fiction	Biography
Sports Books- Various titles	Matt Christopher	M-R	Fiction	Realistic Fiction
Meet Yasmin (series)	Saadia Faruqi	K	Fiction	Realistic Fiction
Little Rhino (series)	Krystle and Ryan Howard	L	Fiction	Realistic Fiction
The Case for Loving	Salina Alko	P	Non-Fiction	
The Girl who Thought in Pictures	Julia Finley Mosca	M	Non-Fiction	