

# NTI Day 4

Name: \_\_\_\_\_

Date: \_\_\_\_\_

(This is for the fourth day we are off for snow)

# Words to Know

Read the sentence. Then read both words. Circle the word that best completes the sentence.

## Words to Know

all does here me my who

1.



Ben will make it \_\_\_\_\_.  
all my

2.



What \_\_\_\_\_ this do?  
does here

3.



\_\_\_\_\_ is it?  
My Who

4.



Rob is \_\_\_\_\_ friend.  
my me

5.



Will you help \_\_\_\_\_?  
me all

6.



Rex likes it in \_\_\_\_\_.  
no here

Name \_\_\_\_\_

# DRIBBLE, SHOOT, AND SINK

It's your lucky day! You're watching the Harlem Hotshots practice for the NBA Playoffs. Suddenly, Slam Dunker, their star center, misses a shot and you catch the ball. He invites you to shoot with them.

How many baskets can you sink? Find the sums. Count your correct answers. Find your score on the scoreboard.

25 numbered basketballs with addition problems:

- Top row (left to right):  $\begin{smallmatrix} 5 \\ +7 \\ \hline \end{smallmatrix}$ ,  $\begin{smallmatrix} 7 \\ +7 \\ \hline \end{smallmatrix}$ ,  $\begin{smallmatrix} 4 \\ +6 \\ \hline \end{smallmatrix}$ ,  $\begin{smallmatrix} 3 \\ +7 \\ \hline \end{smallmatrix}$
- Second row:  $\begin{smallmatrix} 5 \\ +5 \\ \hline 10 \end{smallmatrix}$ ,  $\begin{smallmatrix} 1 \\ +9 \\ \hline \end{smallmatrix}$ ,  $\begin{smallmatrix} 6 \\ +9 \\ \hline \end{smallmatrix}$ ,  $\begin{smallmatrix} 3 \\ +8 \\ \hline \end{smallmatrix}$
- Third row:  $\begin{smallmatrix} 6 \\ +6 \\ \hline \end{smallmatrix}$ ,  $\begin{smallmatrix} 5 \\ +8 \\ \hline \end{smallmatrix}$
- Fourth row:  $\begin{smallmatrix} 8 \\ +8 \\ \hline \end{smallmatrix}$ ,  $\begin{smallmatrix} 2 \\ +8 \\ \hline \end{smallmatrix}$ ,  $\begin{smallmatrix} 8 \\ +6 \\ \hline \end{smallmatrix}$ ,  $\begin{smallmatrix} 2 \\ +9 \\ \hline \end{smallmatrix}$
- Fifth row:  $\begin{smallmatrix} 4 \\ +7 \\ \hline \end{smallmatrix}$ ,  $\begin{smallmatrix} 6 \\ +8 \\ \hline \end{smallmatrix}$ ,  $\begin{smallmatrix} 6 \\ +7 \\ \hline \end{smallmatrix}$
- Sixth row:  $\begin{smallmatrix} 9 \\ +7 \\ \hline \end{smallmatrix}$ ,  $\begin{smallmatrix} 9 \\ +6 \\ \hline \end{smallmatrix}$ ,  $\begin{smallmatrix} 4 \\ +8 \\ \hline \end{smallmatrix}$
- Seventh row:  $\begin{smallmatrix} 7 \\ +9 \\ \hline \end{smallmatrix}$ ,  $\begin{smallmatrix} 5 \\ +6 \\ \hline \end{smallmatrix}$
- Eighth row:  $\begin{smallmatrix} 9 \\ +8 \\ \hline \end{smallmatrix}$ ,  $\begin{smallmatrix} 3 \\ +9 \\ \hline \end{smallmatrix}$

Scoreboard:

Your Score	
25	Court Champ
20-24	Spectacular Sinker
15-19	Backboard Ace
10-14	Daring Dribbler
5-9	Out of Bounds
0-4	Try again

SS.EP 7.1.1  
SSEP 4.1.2

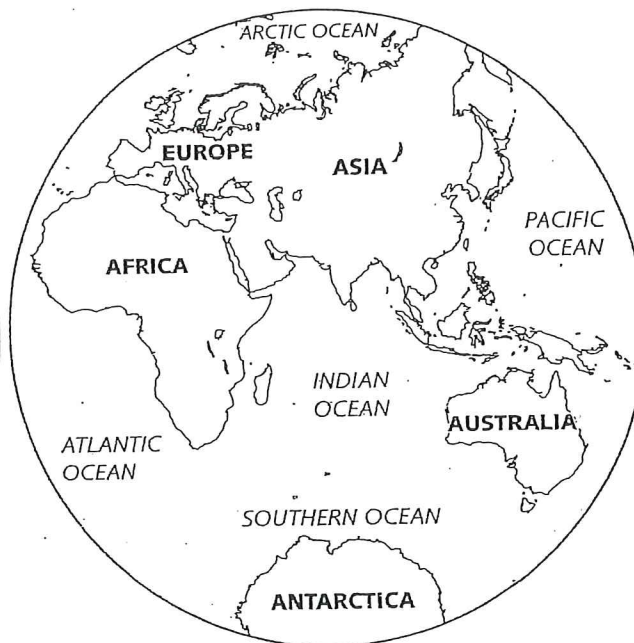
Name \_\_\_\_\_ Date \_\_\_\_\_



## MAP AND GLOBE SKILLS

# Color a Globe

Follow the directions below the globes.



- 1 Find Africa. Color it green.
- 2 Find the continent where you live. Color it yellow.
- 3 Find the Atlantic Ocean. Color it blue.
- 4 Find Australia. Color it red.



# The Water Cycle

Look at the diagram of the water cycle.  
Label the parts. Use the words in the box.

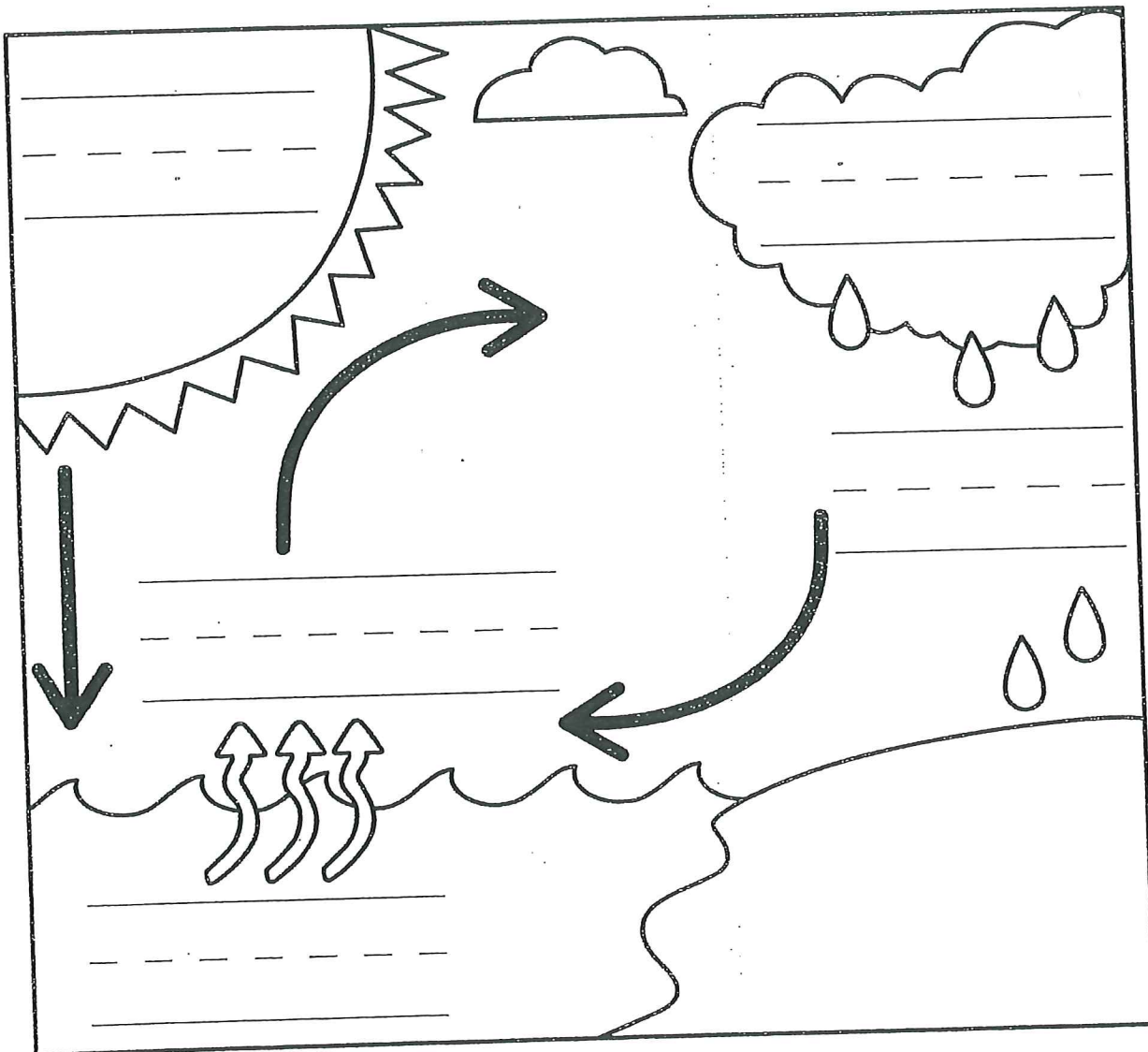
clouds

Sun

water vapor

rain

water



© Macmillan/McGraw-Hill


Name \_\_\_\_\_

Make each sentence true.

Use the words below.

eyes   ears   skin

1. Your \_\_\_\_\_ could hear a horn honk.
2. Your \_\_\_\_\_ could see a deep puddle.
3. Your \_\_\_\_\_ can help you tell if you are near something hot.
4. Are both persons protecting their eyes, ears, and skin? Circle the one who is.



A **landscape** shows an outdoor scene. The horizon line is where the land and sky meet. The horizon line does not have to be a straight line. Draw and color a landscape in the space provided. Label horizon in drawing.

