

Prepare for the 2019 PSAT™ 10



Contents

- What Is the PSAT™ 10?
- When Is the 2019 PSAT 10?
- Skills Tested on the PSAT 10
- How to Prepare for the PSAT 10
- Sample PSAT 10 Questions
- Resources

What Is the PSAT 10?



Some Key Facts

Scores for the SAT® Suite of Assessments (SAT, PSAT/NMSQT®, PSAT 10, and PSAT™ 8/9) are reported on a common vertical scale, allowing **educators to measure students progress.**

- The PSAT 10 propels students toward **college and career readiness.**
- The PSAT/NMSQT and PSAT 10 are the same test, offered at different times of the year.
- The PSAT/NMSQT and PSAT 10 test the same skills and knowledge as the SAT—in a way that makes sense for your grade level.
- The PSAT 10 serves as an entry point to over \$235 million in scholarships for qualified students with financial need.

What to Know About the PSAT 10



Test length: 2 hours 45 minutes

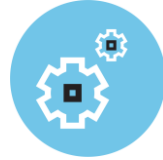


No penalty for guessing or blank responses,
also known as “rights-only scoring”



Scale ranges for the scores are
320–1520 for the total score

Benefits of the PSAT 10



Aligned to the SAT



Increased access to scholarship providers



Online college and career planning tools on BigFuture™



Student score reports recommend Advanced Placement® courses that may be good matches



Majors and career exploration with the College Board and Roadtrip Nation



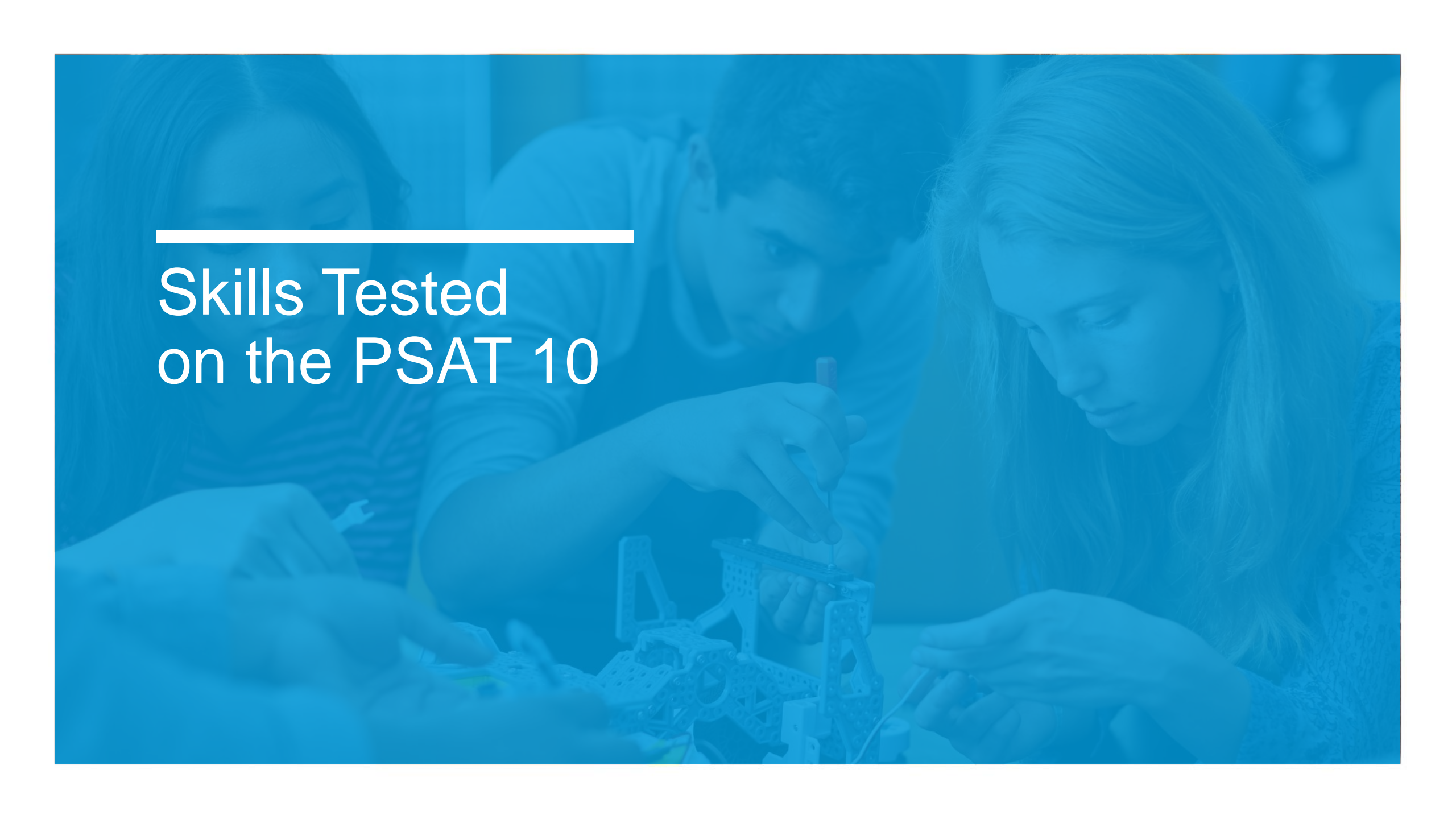
Free, personalized official SAT practice on Khan Academy based on PSAT 10 scores

PSAT 10 Test Dates

The PSAT 10 is given in two testing periods:

FEB. 25 – MARCH 29, 2019

APRIL 1 – APRIL 26, 2019

A blue-tinted background image showing three students working together on a project. They are focused on a task, possibly building a model or working on a circuit. The student in the foreground is a young woman with long blonde hair, looking down at her work. The student in the middle is a young man with dark hair, also looking down. The student in the background is a young woman with dark hair, partially visible. They are all wearing casual clothing. The overall tone is educational and collaborative.

Skills Tested on the PSAT 10

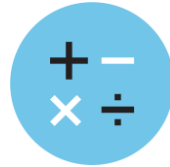
Skills Tested



Reading Test



Writing and Language Test



Math Test

- Each test assesses the academic skills that students have developed over the years, primarily through their coursework.
- These skills are considered essential for success in high school, college, and career.

Reading Test

- 5 Passages
- 47 Passage-Based Questions;
60 minutes



Quick Facts

- All questions are multiple choice and based on passages.
- Some passages are paired with other passages or informational graphics such as tables and graphs.
- No mathematical computation is required.
- Prior topic-specific knowledge is never tested.

Reading Test

What to Expect

In the Reading Test, students will encounter questions like those asked in a lively, thoughtful, evidence-based discussion.



Writing and Language Test



- 4 Passages
- 44 Passage-Based Questions; 35 minutes

Quick Facts

- All questions are multiple choice and based on passages.
- Some passages are paired with informational graphics such as tables and graphs.
- No mathematical computation is required.
- Prior topic-specific knowledge is never tested.

Writing and Language Test

What to Expect

The Writing and Language Test puts students in the active role of an editor who is improving a written passage. Most questions ask students to decide which, if any, of the three alternatives to an underlined part of a passage most improves it.



Math Test



- 2 Test Sections; 70 minutes
- 48 Questions
(40 multiple choice, 8 grid-ins)

Quick Facts

- Most math questions will be multiple choice, but some will be student-produced responses (grid-ins).
- The Math Test is divided into two portions:
Math Test – Calculator and Math Test – No Calculator.
- Some parts of the test will present students with a scenario and then ask several questions about it.

Math Test

What to Expect

The Math Test focuses on the math that matters most for college and career readiness. To succeed on the Math Test, students will need to demonstrate mathematical practices, such as problem solving and using appropriate tools strategically.



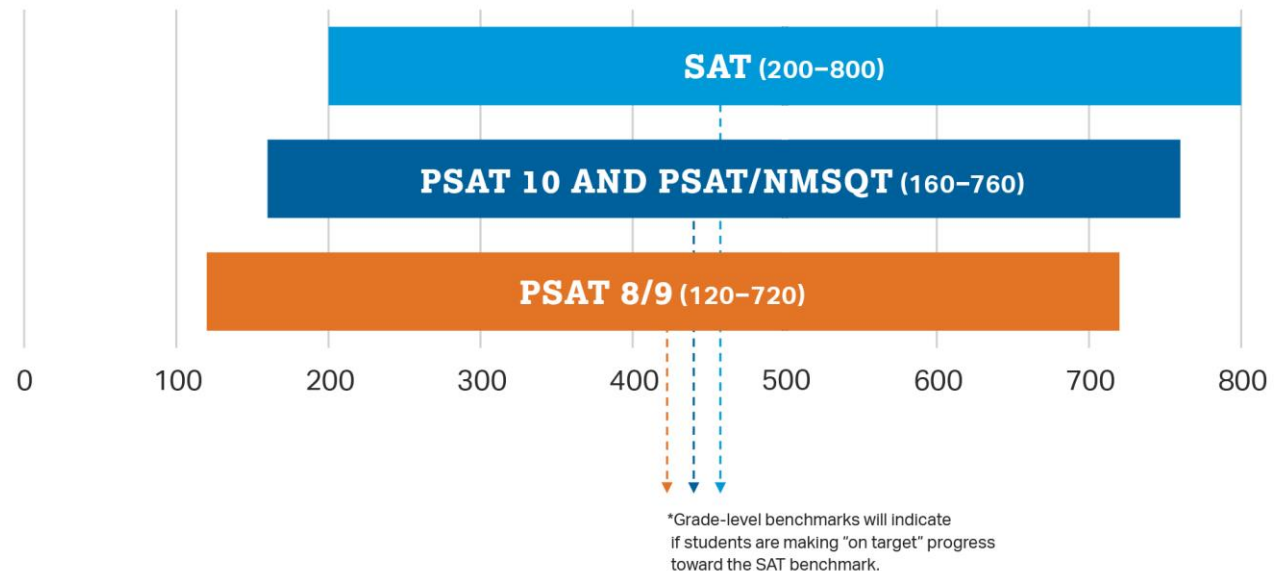
How Do the PSAT/NMSQT and PSAT 10 Connect to the SAT?

Content and Domain Alignment

All tests in the SAT Suite of Assessments (SAT, PSAT/NMSQT, PSAT 10, and PSAT 8/9) are aligned to the same research backbone and focus on the same domain of knowledge and skills.

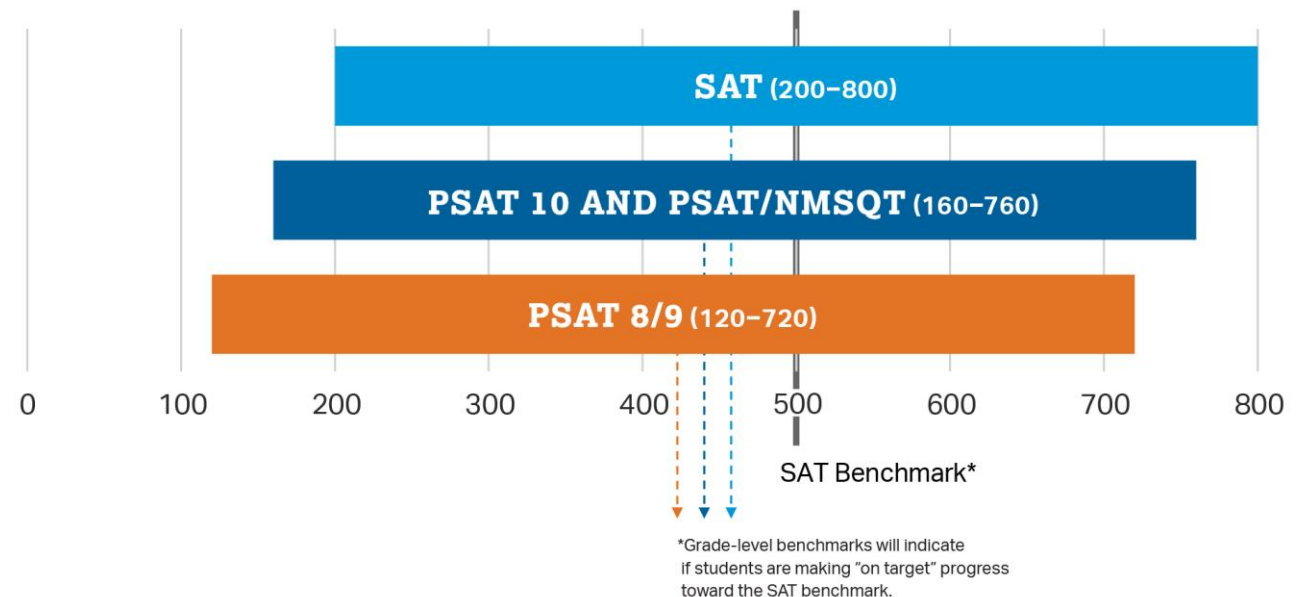
Scoring

All tests in the SAT Suite of Assessments are on a common score scale that provides consistent feedback, enabling teachers to adjust instruction to better support students who are ahead or behind.



How Do the PSAT/NMSQT and PSAT 10 Connect to the SAT?

That means the score students get on the PSAT/NMSQT or PSAT 10 is the same score they would have gotten on the SAT if they'd taken it on the same day.



How Do the PSAT/NMSQT and PSAT 10 Compare to the SAT?

PSAT/NMSQT and PSAT 10

2 hours
45 minutes



Time

X



Essay

160–760



Section Score
Range

SAT

3 hours
50 minutes

Optional

200–800

How to Prepare for the PSAT 10



Know How the PSAT 10 Is Scored

Rights-Only Scoring

- 1 point for each correct answer
- 0 points deducted for each incorrect or blank question

Math Grid-ins

- You can enter answers as (reduced) fractions or decimals.
- If rounding a decimal, make sure to use every box.

Scale

- 160–760 for each test section
- 320–1520 for the total score

Personalized Skills Information

The PSAT 10 Score Report

- Contains information **to help students improve academic skills.**
- **Lists skills** that students have the best chance of improving with additional work.
- Connects to **personalized practice** recommendations on **Khan Academy.**

Preparation Starts in School

Read

Continuous reading improves vocabulary and develops essential skills.

Take Challenging Courses

This will help students to develop and strengthen their critical thinking skills.

Sample PSAT 10 Questions



Reading Test

Passage-Based Questions

Passage Excerpt:

[. . .] The coming decades will likely see more intense clustering of jobs, innovation, and productivity in a smaller number of bigger cities and city-regions. Some regions could end up bloated beyond the capacity of their infrastructure, while others struggle, their promise stymied by inadequate human or other resources.

*Adapted from Richard Florida, The Great Reset.
© 2010 by Richard Florida.*

As used in line 2, “intense” most nearly means

- (A) emotional.
- (B) concentrated.
- (C) brilliant.
- (D) determined.



Reading Test

Passage-Based Questions

Passage Excerpt:

[. . .] The coming decades will likely see more intense clustering of jobs, innovation, and productivity in a smaller number of bigger cities and city-regions. Some regions could end up bloated beyond the capacity of their infrastructure, while others struggle, their promise stymied by inadequate human or other resources.

*Adapted from Richard Florida, The Great Reset.
© 2010 by Richard Florida.*

As used in line 2, “intense” most nearly means

- (A) emotional.
- (B) concentrated.**
- (C) brilliant.
- (D) determined.



Reading Test

Passage-Based Questions

This question asks students to determine word meaning within a social science context. While students may frequently use the word “intense” to describe personalities or emotions, the context of this sentence requires students to recognize that “intense” can also mean “concentrated.” The best answer here is choice B because the context makes clear that the clustering of jobs, innovation, and productivity is expected to be denser, or more concentrated in a smaller number of bigger cities and city-regions, over the coming decades. In these ways, the question draws students back to the text rather than rewarding only isolated vocabulary knowledge.



Writing and Language Test

Passage-Based Questions



Passage Excerpt:

[. . .] As Kingman developed as a painter, his works were often compared to paintings by Chinese landscape artists dating back to CE 960, a time when a strong tradition of landscape painting emerged in Chinese art. Kingman, however, **5** vacated from that tradition in a number of ways, most notably in that he chose to focus not on natural landscapes, such as mountains and rivers, but on cities. [. . .]

5

- (A) NO CHANGE
- (B) evacuated
- (C) departed
- (D) retired

Writing and Language Test

Passage-Based Questions



Passage Excerpt:

[. . .] As Kingman developed as a painter, his works were often compared to paintings by Chinese landscape artists dating back to CE 960, a time when a strong tradition of landscape painting emerged in Chinese art. Kingman, however, **5** vacated from that tradition in a number of ways, most notably in that he chose to focus not on natural landscapes, such as mountains and rivers, but on cities. [. . .]

5

- (A) NO CHANGE
- (B) evacuated
- (C) departed**
- (D) retired

Writing and Language Test

Passage-Based Questions

This question asks students to determine which word makes the most sense in the context of a sentence. "**Departed**" is the most contextually appropriate way to indicate that Kingman had deviated from the tradition of Chinese landscape painting in a number of ways. In this sort of question, students must demonstrate not only facility with language in general but also skill in using language in particular contexts to convey meaning clearly and precisely.



Math Test

Calculator: Permitted



Aaron is staying at a hotel that charges \$99.95 per night plus tax for a room. A tax of 8% is applied to the room rate, and an additional one-time untaxed fee of \$5.00 is charged by the hotel. Which of the following represents Aaron's total charge, in dollars, for staying x nights?

- (A) $(99.95 + 0.08x) + 5$
- (B) $1.08(99.95x) + 5$
- (C) $1.08(99.95x + 5)$
- (D) $1.08(99.95 + 5)x$

Math Test

Calculator: Permitted



Aaron is staying at a hotel that charges \$99.95 per night plus tax for a room. A tax of 8% is applied to the room rate, and an additional one-time untaxed fee of \$5.00 is charged by the hotel. Which of the following represents Aaron's total charge, in dollars, for staying x nights?

(A) $(99.95 + 0.08x) + 5$

(B) $1.08(99.95x) + 5$

(C) $1.08(99.95x + 5)$

(D) $1.08(99.95 + 5)x$

Math Test

Calculator: Permitted

This problem asks students to interpret a situation and formulate a linear expression that represents the situation mathematically. The construction of mathematical models that represent real-world scenarios is a critical skill.

The total charge is the room rate, the 8% tax on the room rate, and a fixed fee. If Aaron stayed x nights, then the total charge is $99.95x + (0.08 \times 99.95x) + 5$, which can be rewritten as $1.08(99.95x) + 5$.



Math Test

Calculator: Not Permitted

In this equation, what is the value of k ?

$$\frac{5(k+2)-7}{6} = \frac{13-(4-k)}{9}$$

(A) $\frac{9}{7}$

(B) $\frac{9}{13}$

(C) $\frac{33}{17}$

(D) $\frac{33}{13}$



Math Test

Calculator: Not Permitted



In this equation, what is the value of k ?

$$\frac{5(k+2)-7}{6} = \frac{13-(4-k)}{9}$$

In this problem, students will demonstrate their fluency in solving equations in one variable.

Choice B is correct. Simplifying the numerators yields

$$\frac{5k+3}{6} = \frac{9+k}{9}$$

and cross-multiplication gives $45k + 27 = 54 + 6k$.

Solving for k yields $k = \frac{9}{13}$

(A) $\frac{9}{7}$

(B) $\frac{9}{13}$

(C) $\frac{33}{17}$

(D) $\frac{33}{13}$

Student-Produced Responses



Instead of choosing a correct answer from a list of options, students will need to solve problems and enter their answers in the grids provided on the answer sheet.

Acceptable ways to grid $\frac{2}{3}$ are:

	2	1	3		6	6	6		6	6	7
	1	1			1	1			1	1	
0	0	0	0	0	0	0	0	0	0	0	0
1	1	1	1	1	1	1	1	1	1	1	1
2	2	2	2	2	2	2	2	2	2	2	2
3	3	3		3	3	3	3	3	3	3	3
4	4	4	4	4	4	4	4	4	4	4	4
5	5	5	5	5	5	5	5	5	5	5	5
6	6	6	6	6	6	6	6	6	6	6	6
7	7	7	7	7	7	7	7	7	7	7	7
8	8	8	8	8	8	8	8	8	8	8	8
9	9	9	9	9	9	9	9	9	9	9	9

Answer: $\frac{7}{12}$

Write answer in boxes. →

Grid in result. →

← Fraction line

← Decimal point

Answer: 201- either position is correct

NOTE: You may start your answers in any column, space permitting. Columns you don't need to use should be left blank.

Math Section

Math Test – Calculator



Students: Know Your Calculator

- A scientific or graphing calculator is recommended.
- Students should bring a familiar calculator. Test day is not the time to figure out how to use a new calculator.

Math Section

Math Test – Calculator



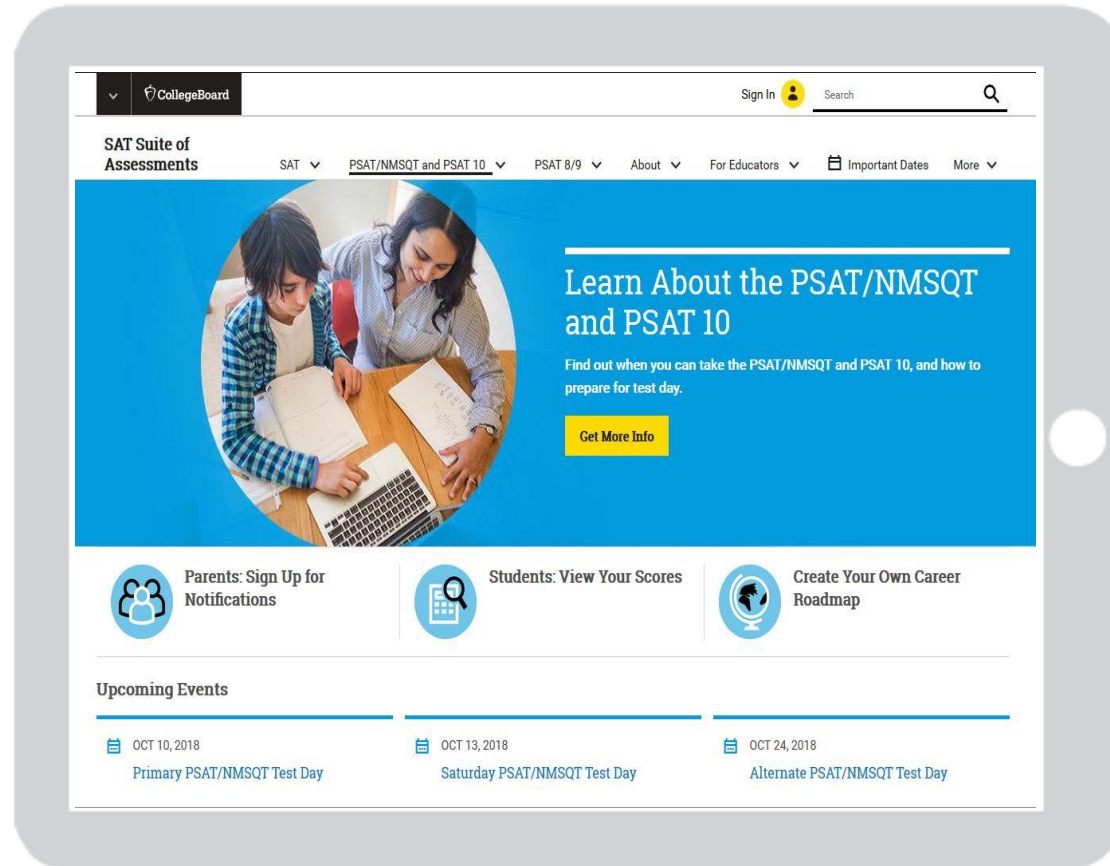
Additional Calculator Tips for Students

- Don't try to use the calculator on every question—no question requires one.
- Decide how to solve each problem; then decide whether to use a calculator.
- Make sure your calculator is in good working order and that batteries are fresh.
- Students will not be permitted to use laptops or other computers, tablets, cell phones, or smartphones, etc. Please reference the *PSAT 10 Student Guide* for a complete list.

Resources

The background of the slide features a photograph of a group of people, likely students, standing in a circle and holding hands. They are positioned in front of a brick wall. The entire image is covered with a semi-transparent blue overlay, which serves as a background for the white text and line.

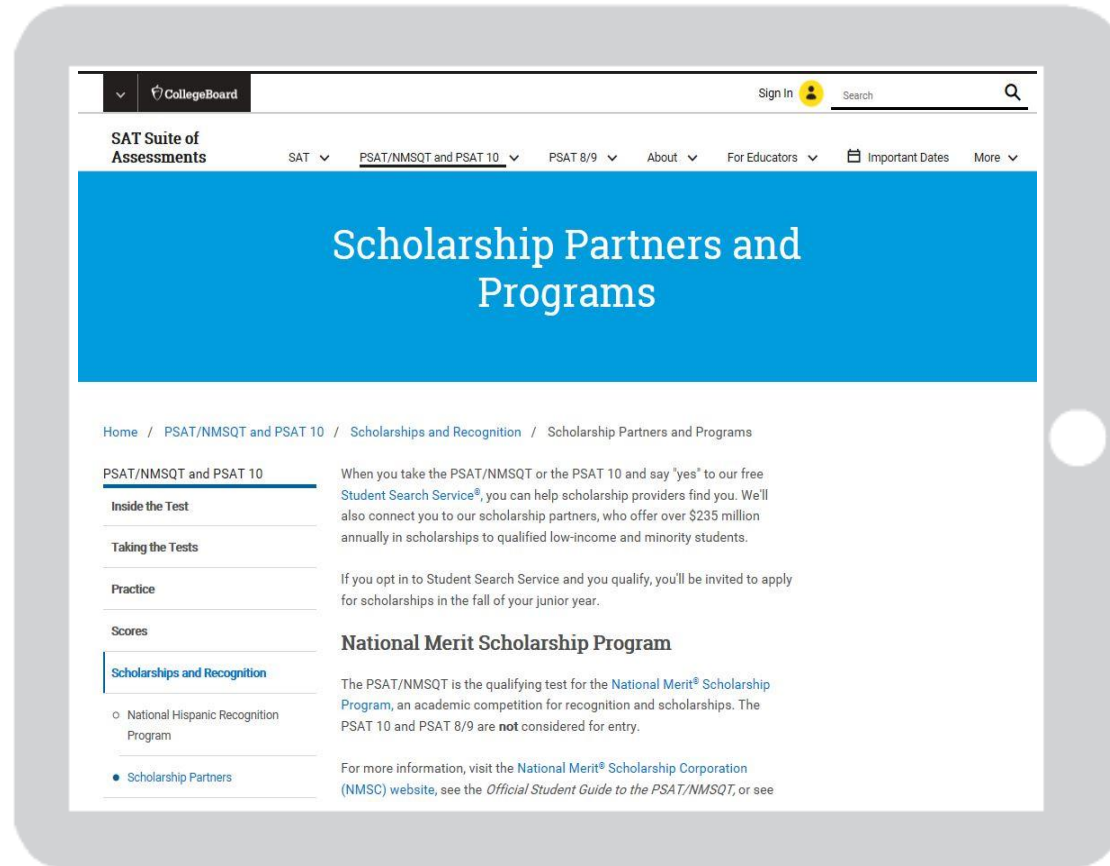
Resources



For general information about the PSAT/NMSQT and PSAT 10, please visit:

collegeboard.org/psat

Resources



To find out more about scholarship opportunities, visit:

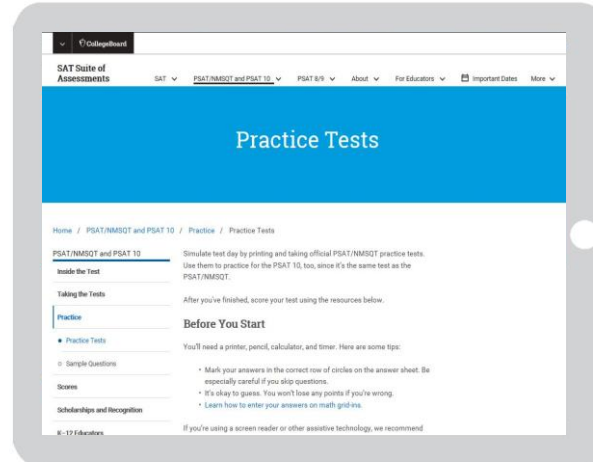
psat.org/scholarships

Resources



For free, personalized official SAT practice based on PSAT 10 scores, visit:

khanacademy.org/sat



Take a PSAT 10 practice test in the *PSAT 10 Student Guide*, available through your counselor or at:

collegeboard.org/psatpractice

Take the 2019 PSAT 10

How to Sign Up: _____

Test Day/Date: _____

Time: _____

Location: _____

Make sure you bring:

- Two No. 2 pencils
- Calculator (optional)

Good luck!