

Pounds and pence

1 How much money is there?



38 p



£ 38

What is the same and what is different?



2



a) Complete the statements.

There is 4 pounds.

There is 75 pence.

There is £ 4 and 75 p.

There is £ 4.75

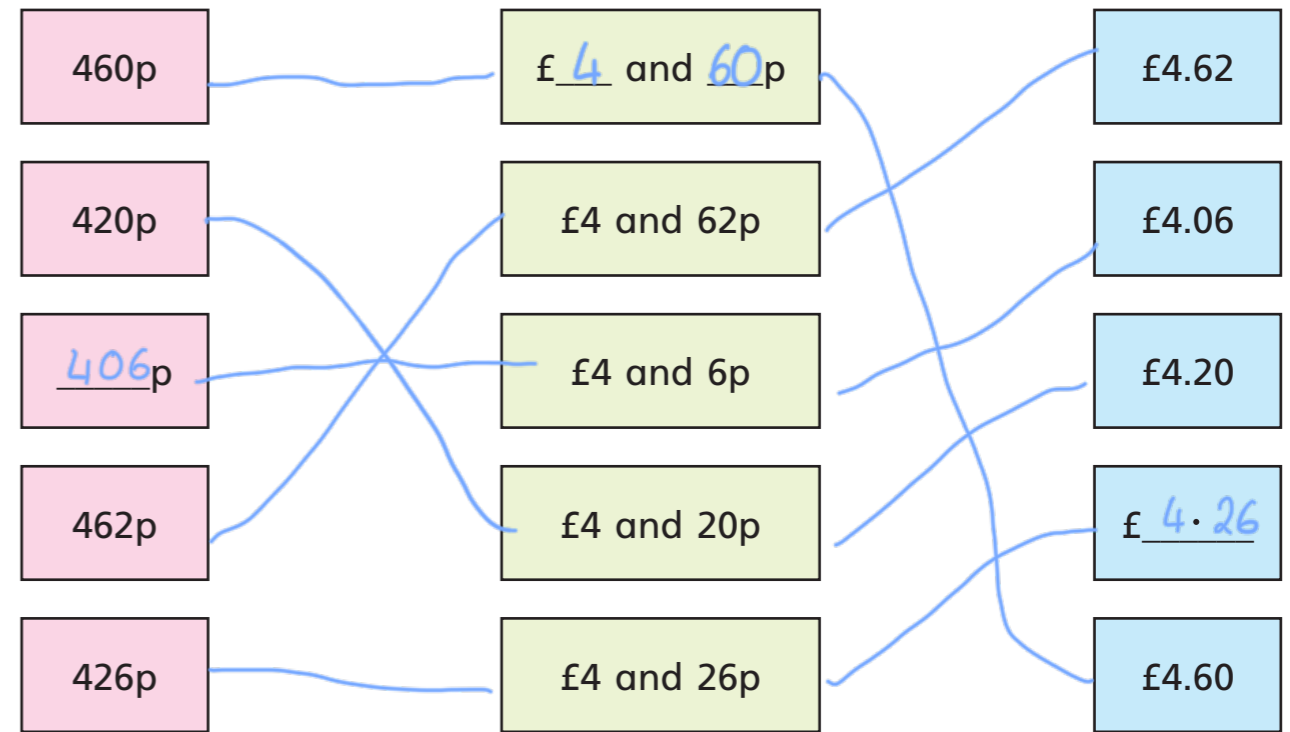
b) Draw money so that there are fewer coins but the same total amount.

e.g.




3 Match the amounts that are equal.

Fill in the missing digits.



4 Match the person to the correct amount.



Ron

I have a note and some coins.




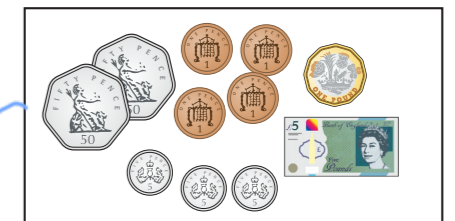
Rosie

I have more than Ron.




Jack

I have the most money.



5 Amir has a note in his pocket.

Annie has three coins in her pocket.



Amir must have more money than Annie.

Do you agree with Dora? _____

Explain your answer.

6 Kim has four coins.

- The coins add to a multiple of 10
- The total amount is more than £1
- All the coins are silver.
- The total is less than £1.50

a) Which four coins could Kim have?

b) How many different combinations can you find?



7 Mo has this money.



Decide whether Mo's statements are true (T) or false (F).

Circle your answer and give a reason for your choice.



You can make an amount greater than £11

T F



You can make exactly £1.50 using three coins.

T F



You can make exactly £2.02 using four coins.

T F



You can make exactly £6.11

T F

