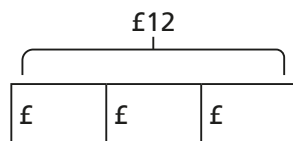
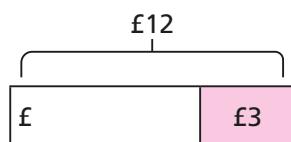


1 a) Match the problems to the bar models.

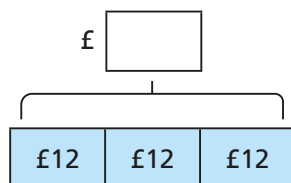
Nijah has £12. Her mum gives her £3 more.  
How much does she have now?



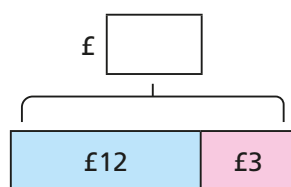
Nijah has £12.  
She buys a book for £3.  
How much does she have now?



Nijah has £12. She shares it between 3 of her friends. How much does each friend get?



Nijah has £12. Her friend has 3 times as much. How much does her friend have?



b) Complete the bar models.

2 A child's ticket to the cinema costs £4.50 and an adult's ticket costs £7.95  
Dexter wants to know how much more an adult's ticket costs than a child's ticket.



I just need to add £7.95 to £4.50 to find out how much more.

Do you agree with Dexter? Explain your answer.



3 Whitney is finding the total of £23.70 and £34.40



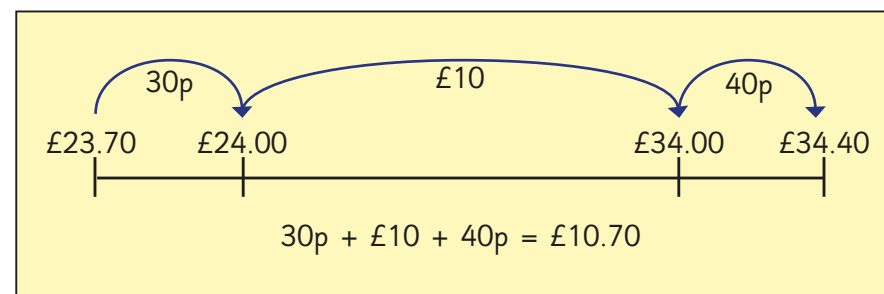
I can add £23 and £34 together to give £57 and add 70p and 40p together to give £1.10 and then combine the two parts. So the total is £58.10

Use Whitney's method to complete the additions.

a)  $£8.60 + £7.80$

b)  $£11.80 + £9.25$

4 Teddy uses a number line to find the difference between £23.70 and £34.40



Use Teddy's method to help you complete the sentences.

a) The difference between £17.30 and £32.45 is

b) The difference between £42.11 and £22.65 is

- 3 Whitney is finding the total of £23.70 and £34.40

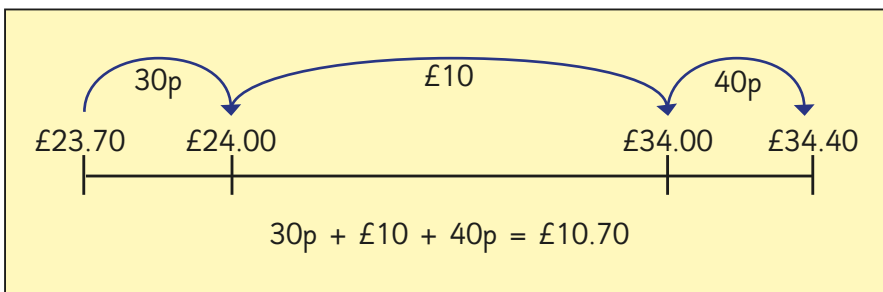


I can add £23 and £34 together to give £57 and add 70p and 40p together to give £1.10 and then combine the two parts. So the total is £58.10

Use Whitney's method to complete the additions.

- a) £8.60 + £7.80  
b) £11.80 + £9.25

- 4 Teddy uses a number line to find the difference between £23.70 and £34.40



Use Teddy's method to help you complete the sentences.

- a) The difference between £17.30 and £32.45 is   
b) The difference between £42.11 and £22.65 is

- 5 A shop sells these items.



- a) Scott buys some marbles, a book and a cap. He pays with a £20 note.  
How much change does he get?  
b) Esther buys three sets of headphones. She has a voucher for £5 off the total.  
How much does Esther need to pay?  
c) Dani buys a cap and some marbles. Tom buys a book.  
How much more does Dani spend than Tom?

- 6 The board shows the cost of different rides at a theme park. Some of the prices are missing.

Use the clues to work out the missing prices.

- Frenzy costs one quarter of the price of Galaxy.
- Speedster costs double the price of Up 'n' Down.
- The combined cost of Galaxy and Up 'n' Down is £17.20

Up 'n' Down	£	<input type="text"/>
Speedster	£	<input type="text"/>
Galaxy	£12.80	
Frenzy	£	<input type="text"/>