
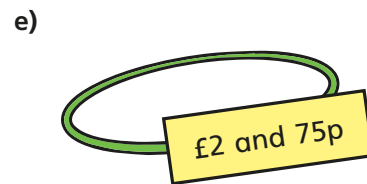



1 How much change would you get from a £10 note?



2 Annie buys some crayons.



She pays with this money.



She gets this change.



Has Annie been given the correct amount of change?

Explain your answer.

3 Huan buys a hot chocolate for £2 and 60p.

He pays with a £5 note.

How much change does he get?

4 Dani buys a milkshake.

She pays with a £5 note.

She gets £2 and 60p change.

How much did the milkshake cost?

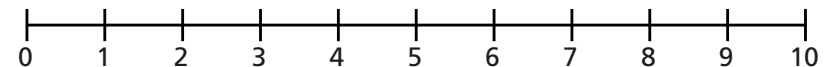
5 Ms Hall has £9 to buy breakfast.

She gets £4 and 25p change.

Waffles	£4 and 75p
Omelette	£5 and 75p

Which breakfast does Ms Hall buy?

Use a number line to explain your answer.



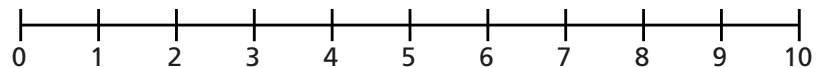
3 Huan buys a hot chocolate for £2 and 60p.
He pays with a £5 note.
How much change does he get?

4 Dani buys a milkshake.
She pays with a £5 note.
She gets £2 and 60p change.
How much did the milkshake cost?

5 Ms Hall has £9 to buy breakfast.
She gets £4 and 25p change.

Waffles	£4 and 75p
Omelette	£5 and 75p

Which breakfast does Ms Hall buy?
Use a number line to explain your answer.



6 A train ticket costs £3 and 60p.
A bus ticket costs £2 and 85p.
Mr Khan buys a train and a bus ticket.
He pays with a £10 note.
How much change does he get?

7 Mrs Dean buys a T-shirt.
She pays with a £10 note.
She gets four coins in change.
Each coin is different.



- a) What is the lowest possible price of the T-shirt?
- b) What is the highest possible price of the T-shirt?

Compare answers with a partner.

