

****** PLEASE DOWNLOAD THE DOCUMENT BEFORE PRINTING ******

2020 Summer Math Packet for Incoming High School & Grade 8 Algebra I Students

The math faculty at Shepaug Valley School would like to welcome you 2020- 2021 school year. We are looking forward to helping you achieve your greatest potential. We hope a quality education is one thing you will value.

We have developed the attached review packet to help you prepare for the Algebra I class you will be taking this fall. This packet includes material students are expected to understand before beginning the Algebra I curriculum. The topics covered by the packet are the foundational skills necessary to be successful in Algebra I. Algebra I teachers will be collecting the completed packet on the first day of school.

Students may use any resources available to them to complete this packet. Helpful websites include:

www.purplemath.com

www.math.com

www.khanacademy.com

Please spend the time needed to do a quality job on this packet. Show and organize your work for each problem. Show all of your work!

Enjoy your summer vacation and keep your education moving forward during this break.

Section 1 – Order of Operations

The order of operations in mathematics is a set of rules to follow to determine which operation to do first when there are different operations within a single problem. The order to perform combined operations is called the **PEMDAS** rule. A common mnemonic for **PEMDAS** is **Please Excuse My Dear Aunt Sally**.

- Always work on the calculations within *parenthesis* first (if any)
- Next, calculate the *exponents*
- Then, carry out *multiplication* or *division*, working from *left to right*
- Lastly, do *addition* and *subtraction*, working from *left to right*

Example 1

Evaluate $16 - 8 \div 2^2 + 14$.

$$\begin{aligned} 16 - 8 \div 2^2 + 14 &= 16 - 8 \div 4 + 14 && \text{Evaluate powers.} \\ &= 16 - 2 + 14 && \text{Divide 8 by 4.} \\ &= 14 + 14 && \text{Subtract 2 from 16.} \\ &= 28 && \text{Add 14 and 14.} \end{aligned}$$

Example 2

Evaluate each expression.

a. $4 \div 2 + 5(10 - 6)$

$$\begin{aligned} 4 \div 2 + 5(10 - 6) &= 4 \div 2 + 5(4) && \text{Evaluate inside parentheses.} \\ &= 2 + 5(4) && \text{Divide 4 by 2.} \\ &= 2 + 20 && \text{Multiply 5 by 4.} \\ &= 22 && \text{Add 2 to 20.} \end{aligned}$$

b. $6[32 - (2 + 3)^2]$

$$\begin{aligned} 6[32 - (2 + 3)^2] &= 6[32 - (5)^2] && \text{Evaluate innermost expression first.} \\ &= 6[32 - 25] && \text{Evaluate power.} \\ &= 6[7] && \text{Subtract 25 from 32.} \\ &= 42 && \text{Multiply.} \end{aligned}$$

Section 1 – Exercises

Evaluate and simplify each expression.

1. 3^5	2. $10 + 8^3 \div 16$	3. $(12 - 6) \cdot 5^2$
4. $18 \div 9 + 2 \cdot 6$	5. $3[10 - (27 \div 9)]$	6. $4[(6^3 - 9) \div 23]$
7. $\frac{8 + 3^3}{12 - 7}$	8. $3[4 - 8 + 4^2(2 + 5)]$	9. $25 + \left[(16 - 3 \cdot 5) + \frac{12 + 3}{5} \right]$

Section 2 – Fractions

We use fractions or ratios every day. A fraction is part of an entire object. It consists of two numbers, a number on the top called a numerator and a number on the bottom called a denominator. To add or subtract a fraction, you must have a common denominator.

- Find the Least Common Denominator (LCD) of the fractions
- Rename the fractions to have the LCD
- Add (or subtract) the numerators
- Keep the LCD
- Simplify the fraction

Example 1

Find each sum or difference. Write in simplest form.

a. $\frac{1}{2} + \frac{2}{3}$

$$\begin{aligned}\frac{1}{2} + \frac{2}{3} &= \frac{3}{6} + \frac{4}{6} \\ &= \frac{3+4}{6} \\ &= \frac{7}{6} \text{ or } 1\frac{1}{6}\end{aligned}$$

The LCD for 2 and 3 is 6. Rename $\frac{1}{2}$ as $\frac{3}{6}$ and $\frac{2}{3}$ as $\frac{4}{6}$.

Add the numerators.

Simplify.

b. $\frac{3}{8} - \frac{1}{3}$

$$\begin{aligned}\frac{3}{8} - \frac{1}{3} &= \frac{9}{24} - \frac{8}{24} \\ &= \frac{9-8}{24} \\ &= \frac{1}{24}\end{aligned}$$

The LCD for 8 and 3 is 24. Rename $\frac{3}{8}$ as $\frac{9}{24}$ and $\frac{1}{3}$ as $\frac{8}{24}$.

Subtract the numerators.

Simplify.

c. $\frac{2}{5} - \frac{3}{4}$

$$\begin{aligned}\frac{2}{5} - \frac{3}{4} &= \frac{8}{20} - \frac{15}{20} \\ &= \frac{8-15}{20} \\ &= -\frac{7}{20}\end{aligned}$$

The LCD for 5 and 4 is 20. Rename $\frac{2}{5}$ as $\frac{8}{20}$ and $\frac{3}{4}$ as $\frac{15}{20}$.

Subtract the numerators.

Simplify.

Section 2 – Exercises

Find each sum or difference. Write your answer in simplest form. (Leave as an improper fraction.)

10. $\frac{2}{3} + \frac{7}{8}$

11. $\frac{13}{20} - \frac{2}{5}$

12. $\frac{5}{6} - \frac{8}{9}$

To multiply fractions, multiply the numerators and multiply the denominators. If the numerators and denominators have common factors, you can simplify before you multiply by cross canceling.

Example 2

Find each product.	
<p>a. $\frac{2}{5} \cdot \frac{1}{3}$</p> $\frac{2}{5} \cdot \frac{1}{3} = \frac{2 \cdot 1}{5 \cdot 3}$ $= \frac{2}{15}$	<p>Multiply the numerators. Multiply the denominators. Simplify.</p>
<p>b. $\frac{3}{5} \cdot 1\frac{1}{2}$</p> $\frac{3}{5} \cdot 1\frac{1}{2} = \frac{3}{5} \cdot \frac{3}{2}$ $= \frac{3 \cdot 3}{5 \cdot 2}$ $= \frac{9}{10}$	<p>Write $1\frac{1}{2}$ as an improper fraction. Multiply the numerators. Multiply the denominators. Simplify.</p>
<p>c. $\frac{1}{4} \cdot \frac{2}{9}$</p> $\frac{1}{4} \cdot \frac{2}{9} = \frac{1}{\cancel{4}^2} \cdot \frac{\cancel{2}^1}{9}$ $= \frac{1 \cdot 1}{2 \cdot 9} \text{ or } \frac{1}{18}$	<p>Divide by the GCF, 2. Multiply the numerators. Multiply the denominators and simplify.</p>

Section 2 – Exercises

Find each product. Write your answer in simplest form. (Leave as an improper fraction.)

13. $\frac{3}{5} \cdot \frac{5}{6}$	14. $\frac{11}{3} \cdot \frac{9}{44}$	15. $3\frac{1}{2} \cdot 1\frac{1}{2}$
16. $-\frac{2}{7} \cdot 4\frac{2}{3}$	17. $-\frac{1}{3} \cdot -7\frac{1}{2}$	18. $\frac{1}{4} \cdot -3\frac{5}{6}$

To divide one fraction by another, you multiply the first fraction by the reciprocal of the second fraction.

Example 3

Find each quotient.

a. $\frac{1}{3} \div \frac{1}{2}$

$$\frac{1}{3} \div \frac{1}{2} = \frac{1}{3} \cdot \frac{2}{1}$$
$$= \frac{2}{3}$$

Multiply $\frac{1}{3}$ by $\frac{2}{1}$, the reciprocal of $\frac{1}{2}$.

Simplify.

b. $\frac{3}{8} \div \frac{2}{3}$

$$\frac{3}{8} \div \frac{2}{3} = \frac{3}{8} \cdot \frac{3}{2}$$
$$= \frac{9}{16}$$

Multiply $\frac{3}{8}$ by $\frac{3}{2}$, the reciprocal of $\frac{2}{3}$.

Simplify.

c. $\frac{3}{4} \div 2\frac{1}{2}$

$$\frac{3}{4} \div 2\frac{1}{2} = \frac{3}{4} \div \frac{5}{2}$$

Write $2\frac{1}{2}$ as an improper fraction

$$= \frac{3}{4} \cdot \frac{2}{5}$$

Multiply $\frac{3}{4}$ by $\frac{2}{5}$, the reciprocal of $2\frac{1}{2}$.

$$= \frac{6}{20} \text{ or } \frac{3}{10}$$

Simplify.

d. $-\frac{1}{5} \div \left(-\frac{3}{10}\right)$

$$-\frac{1}{5} \div \left(-\frac{3}{10}\right) = -\frac{1}{5} \cdot \left(-\frac{10}{3}\right)$$

Multiply $-\frac{1}{5}$ by $-\frac{10}{3}$, the reciprocal of $-\frac{3}{10}$.

$$= \frac{10}{15} \text{ or } \frac{2}{3}$$

Same sign \rightarrow positive quotient; simplify.

Section 2 – Exercises

Find each quotient. Write your answer in simplest form. (Leave as an improper fraction.)

19. $\frac{3}{25} \div \frac{2}{15}$

20. $2\frac{1}{4} \div \frac{1}{2}$

21. $-\frac{9}{10} \div 3$

Section 3 – Real Number Comparison

An inequality is a mathematical sentence that compares the value of two expressions using an inequality symbol.

Inequality Symbol	Pronounced	Example
$<$	Less than	$4 < 9$
\leq	Less than or equal to	$-3 \leq 2$
$>$	Greater than	$-4 > -7$
\geq	Greater than or equal to	$5 \geq 5$
\neq	Not equal to	$7 \neq 11$

Example 1

Which one is greater, $\frac{4}{9}$ or $\frac{5}{12}$?

Rewrite each fraction using the LCD.

$$\frac{4}{9} = \frac{16}{36} \quad \text{and} \quad \frac{5}{12} = \frac{15}{36}$$

$$\frac{16}{36} > \frac{15}{36} \quad \text{So} \quad \frac{4}{9} > \frac{5}{12}$$

Section 3 – Exercises

Use $<$, $=$, or $>$ to compare the numbers.

22. -12 _____ -15	23. 0.63 _____ 0.6	24. 0.88 _____ $\frac{8}{9}$
25. $\frac{2}{3}$ _____ $\frac{1}{6}$	26. $\frac{3}{4}$ _____ $\frac{12}{16}$	27. $-2\frac{5}{8}$ _____ $-2\frac{1}{2}$

Section 4 – Variables & Verbal Expressions

Translating in mathematics usually involves changing a verbal phrase into a mathematical phrase. The following are common phrases used in mathematics.

Phrase	Sign
sum, increased, added to, more than, plus, totals, combined, perimeter	+
difference, minus, less than, used, remain, subtracted from, decreased by	-
product, of, times, area, doubles, multiplied by	•
quotient, division, average, half, divided by, per	÷
is, is the same as, equal, was, were, has, costs, becomes	=

Section 4 – Exercises

Write an algebraic expression for each phrase.

28. 7 increased by x	29. the difference of 8 and n
30. the product of 2 and t	31. 10 decreased by m
32. 32 divided by d	33. 12 less than p
34. the sum of 7 and h	35. 9 plus the quotient of y and 15

Section 5 – Evaluating Algebraic Expressions

A *variable* is a letter that represents an unspecified number. To evaluate an algebraic expression, replace the variables with their values. Then find the value of the numerical expression using the order of operations.

Example 1

Evaluate $3x^2 + (2y + z^3)$ if $x = 4, y = 5, z = 3$.	
$3x^2 + (2y + z^3)$	
$= 3(4)^2 + (2 \cdot 5 + 3^3)$	Replace x with 4, y with 5, and z with 3.
$= 3(4)^2 + (2 \cdot 5 + 27)$	Evaluate 3^3 .
$= 3(4)^2 + (10 + 27)$	Multiply 2 by 5.
$= 3(4)^2 + (37)$	Add 10 to 27.
$= 3(16) + 37$	Evaluate 4^2 .
$= 48 + 37$	Multiply 3 by 16.
$= 85$	Add 48 to 37.

Section 5 – Exercises

Evaluate each expression.

36. xy for $x = 3, y = 16$	37. $n + 2$ for $n = -7$
38. $10 - r + 5$ for $r = 23$	39. $t + u \div 6$ for $t = 12, u = 18$
40. $4p - 26$ for $p = 10$	41. $m^2 - 7$ for $m = 11$
42. $3ab - c$ for $a = -4, b = 2, c = 5$	43. $\frac{ab}{2} - 4c$ for $a = 6, b = 5, c = 3$

Section 6 – Solving One-Step Equations

In an equation, the variable represents the number that satisfies the equation. To solve an equation means to find the value of the variable that makes the equation true. You will only need to perform one step in order to solve a **one-step** equation.

The strategy for getting the variable by itself involves using opposite operations. The most important thing to remember in solving a linear equation is that whatever you do to one side of the equation, you **MUST** do to the other side.

Example 1

$-2 = k - 14$	Solve
$-2 + 14 = k - 14 + 14$	Since 14 is subtracted from k , you must add 14 to each side of the equation
$12 = k$ or $k = 12$	Answer

Example 2

$\frac{x}{-7} = 15$	Solve
$(-7)\frac{x}{-7} = 15(-7)$	Since x is divided by -7 , you must multiply both sides by -7
$x = -105$	Answer

Example 3

$\frac{3}{4}u = -24$	Solve
$\left(\frac{4}{3}\right)\frac{3}{4}u = -24\left(\frac{4}{3}\right)$	Multiply both sides by the reciprocal of $\frac{3}{4}$ and cancel any common factors
$u = -32$	Answer

On a scale of 1 – 5 (1: Weak, 5: Strong) rate yourself on this section of math: 1 2 3 4 5

Section 6 – Exercises

Solve each equation.

44. $37 = x - 72$

45. $5p = 325$

46. $d + 1.5 = 3.7$

47. $102 + t = 36$

48. $\frac{2}{3}y = 8$

49. $\frac{h}{7} = -12$

50. $\frac{3}{5}g = -6$

51. $\frac{1}{4}m = \frac{5}{8}$

Section 7 – Measures of Central Tendency

In working with statistical data, it is often useful to determine a single quantity that best describes a set of data. The best quantity to choose is usually one of the most popular measures of central tendency: mean, median, mode, or range.

Mean The mean is the sum of the data items in a set divided by the number of data items in the set.

Median The median is the middle value in a set of data when the numbers are arranged in numerical order. If the set has an even number of data items, the median is the mean of the two middle data values.

Mode The mode is the data item that occurs most often in a set of data.

Range The range is the difference between the greatest and least values in a set of data.

Example 1

Set of data: 34, 46, 31, 40, 33, 40, 35

In order: 31, 33, 34, 35, 40, 40, 46

Mean	$\frac{(31 + 33 + 34 + 35 + 40 + 40 + 46)}{7}$	Answer: 37
Median	35 is the middle number when written in numerical order	Answer: 35
Mode	40 is the only number that occurs more than once	Answer: 40
Range	46 – 31	Answer: 15

Example 2

Set of data: 41, 28, 37, 56, 34, 61

In order: 28, 34, 37, 41, 56, 61

Mean	$\frac{(28 + 34 + 37 + 41 + 56 + 61)}{6}$	Answer: $42.\overline{83}$
Median	$\frac{37 + 41}{2}$ (There are an even number of numbers in the data set)	Answer: 39
Mode	No number repeats more than once	Answer: None
Range	61 – 28	Answer: 33

Section 7 – Exercises

Find the mean, median, mode, and range of each set of data.

<p>52. Daily sales from a store \$834, \$1099, \$775, \$900, \$970</p> <p>Mean =</p> <p>Median =</p> <p>Mode =</p> <p>Range =</p>	<p>53. Goals scored in a soccer game 3, 2, 0, 11, 7, 6, 4, 10</p> <p>Mean =</p> <p>Median =</p> <p>Mode =</p> <p>Range =</p>
<p>54. Number of days above 50° in last 5 months 6, 8, 15, 22, 8</p> <p>Mean =</p> <p>Median =</p> <p>Mode =</p> <p>Range =</p>	<p>55. Height of players on a basketball team (inches) 72, 74, 70, 77, 76, 72</p> <p>Mean =</p> <p>Median =</p> <p>Mode =</p> <p>Range =</p>

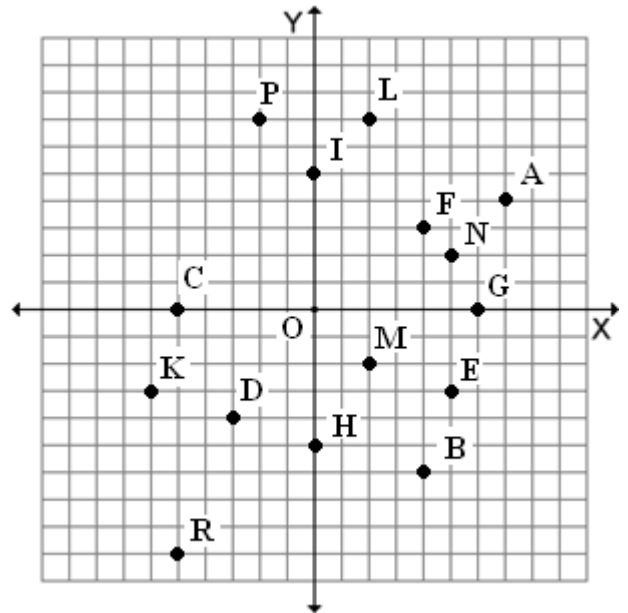
Section 8 – Plotting on the Coordinate Plane

You can graph points on a coordinate plane. Use an ordered pair (x, y) to record the coordinates. The first number in the pair is the *x-coordinate*. The second number is the *y-coordinate*. To graph a point, start at the origin $(0, 0)$. Move **horizontally** according to the value of x . Then move **vertically** according to the value of y .

Section 8 – Exercises

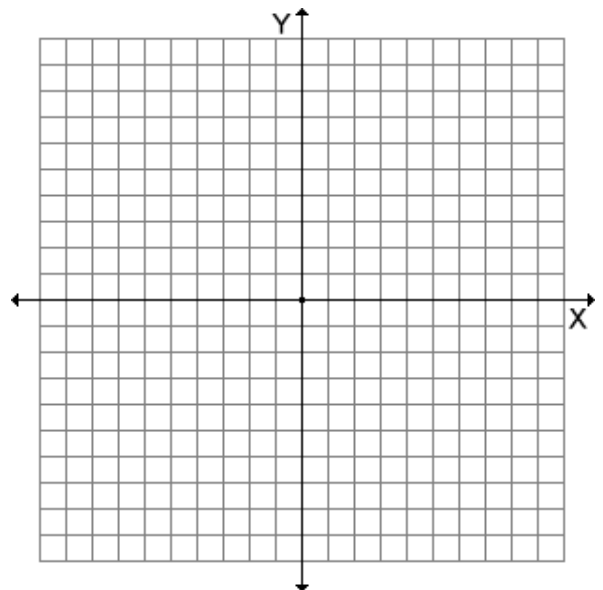
List the ordered pair for each letter, then identify the quadrant or axes the point lies in.

56. C	
57. A	
58. M	
59. P	
60. F	
61. I	
62. R	
63. E	




Plot & label the following ordered pairs.

64. $F = (-8, 6)$
65. $R = (6, -1)$
66. $I = (-5, -7)$
67. $E = (4, 9)$
68. $N = (2, -3)$
69. $D = (-4, 0)$
70. $S = (0, 7)$



Algebra 1



Across

3. A point where the graph intersects an axis
5. The set of the first numbers of the ordered pairs
6. The numbers that correspond to a point on a coordinate system
10. Please Excuse My Dear Aunt Sally
14. A comparison of two numbers by division
15. To draw or lot the oints named by certain numbers or ordered pairs on a number line or coordinate plane
19. A mathematical sentence that contains an equal sign
20. Minus
21. The form of a linear equation $Ax + By = C$, with a graph that is a straight line
22. Symbol used to represent unknown numbers or values

Down

1. Sum
2. The horizontal number line on a coordinate plane
4. A relation between input and output
7. The ratio of the change in the y-coordinate (rise) to the change in the x-coordinate (run)
8. To shift a graph vertically or horizontally
9. The point (0,0)
11. To find the value of an expression
12. The vertical number line on a coordinate plane
13. The set of second numbers of the ordered pairs
16. Distance around the outside
17. The answer when multiplying
18. A polynomial with two terms

*Revised from Shaler Area School District

On a scale of 1 – 5 (1: Weak, 5: Strong) rate yourself on this section of math: 1 2 3 4 5