


A

Number correct:



Name _____


Date _____

*Write the missing number. Pay attention to the addition or subtraction sign.

1	$5 + 1 = \square$		16	$29 + 10 = \square$	
2	$15 + 1 = \square$		17	$9 + 1 = \square$	
3	$25 + 1 = \square$		18	$19 + 1 = \square$	
4	$5 + 10 = \square$		19	$29 + 1 = \square$	
5	$15 + 10 = \square$		20	$39 + 1 = \square$	
6	$25 + 10 = \square$		21	$40 - 1 = \square$	
7	$8 - 1 = \square$		22	$30 - 1 = \square$	
8	$18 - 1 = \square$		23	$20 - 1 = \square$	
9	$28 - 1 = \square$		24	$20 + \square = 21$	
10	$38 - 1 = \square$		25	$20 + \square = 30$	
11	$38 - 10 = \square$		26	$27 + \square = 37$	
12	$28 - 10 = \square$		27	$27 + \square = 28$	
13	$18 - 10 = \square$		28	$\square + 10 = 34$	
14	$9 + 10 = \square$		29	$\square - 10 = 14$	
15	$19 + 10 = \square$		30	$\square - 10 = 24$	

B

Number correct:




Name _____

Date _____

*Write the missing number. Pay attention to the addition or subtraction sign.

1	$4 + 1 = \square$		16	$28 + 10 = \square$	
2	$14 + 1 = \square$		17	$9 + 1 = \square$	
3	$24 + 1 = \square$		18	$19 + 1 = \square$	
4	$6 + 10 = \square$		19	$29 + 1 = \square$	
5	$16 + 10 = \square$		20	$39 + 1 = \square$	
6	$26 + 10 = \square$		21	$40 - 1 = \square$	
7	$7 - 1 = \square$		22	$30 - 1 = \square$	
8	$17 - 1 = \square$		23	$20 - 1 = \square$	
9	$27 - 1 = \square$		24	$10 + \square = 11$	
10	$37 - 1 = \square$		25	$10 + \square = 20$	
11	$37 - 10 = \square$		26	$22 + \square = 32$	
12	$27 - 10 = \square$		27	$22 + \square = 23$	
13	$17 - 10 = \square$		28	$\square + 10 = 39$	
14	$8 + 10 = \square$		29	$\square - 10 = 19$	
15	$18 + 10 = \square$		30	$\square - 10 = 29$	

Number correct:



A

Name _____


Date _____

*Write the number of dots. Try to find ways to group the dots to make counting easier!

1			16		
2			17		
3			18		
4			19		
5			20		
6			21		
7			22		
8			23		
9			24		
10			25		
11			26		
12			27		
13			28		
14			29		
15			30		

B

Number correct:



Name _____

Date _____

*Write the number of dots. Try to find ways to group the dots to make counting easier!

1			16		
2			17		
3			18		
4			19		
5			20		
6			21		
7			22		
8			23		
9			24		
10			25		
11			26		
12			27		
13			28		
14			29		
15			30		