

3rd Grade Distance Learning

Week 5

Use this calendar to help keep yourself organized during our days of off-site learning. Each day, follow the schedule. Check off each item as you do it. Digital learning assignments can be completed on Classkick while hard copies are available as well.

	Day 1	Day 2	Day 3	Day 4	Day 5
Reading	<ul style="list-style-type: none"> <input type="checkbox"/> Read 20 minutes <input type="checkbox"/> Complete Reading Log handwritten or digitally using Classkick. <input type="checkbox"/> Complete Grammar Worksheet on Compound Words digitally on Classkick or handwritten. 	<ul style="list-style-type: none"> <input type="checkbox"/> Read 20 minutes <input type="checkbox"/> Complete Reading Log handwritten or digitally using Classkick. <input type="checkbox"/> Complete Grammar Worksheet on Prefixes digitally on Classkick or handwritten. 	<ul style="list-style-type: none"> <input type="checkbox"/> Read 20 minutes <input type="checkbox"/> Complete Reading Log handwritten or digitally using Classkick. <input type="checkbox"/> Complete Grammar Worksheet on Suffixes digitally on Classkick or handwritten. 	<ul style="list-style-type: none"> <input type="checkbox"/> Read 20 minutes <input type="checkbox"/> Complete Reading Log handwritten or digitally using Classkick. 	<ul style="list-style-type: none"> <input type="checkbox"/> Read 20 minutes <input type="checkbox"/> Complete Reading Log handwritten or digitally using Classkick.
Writing					
Math	<ul style="list-style-type: none"> <input type="checkbox"/> Spiral Math Review 	<ul style="list-style-type: none"> <input type="checkbox"/> Spiral Math Review 	<ul style="list-style-type: none"> <input type="checkbox"/> Spiral Math Review 	<ul style="list-style-type: none"> <input type="checkbox"/> Spiral Math Review 	<p>Happy last day of school! Enjoy your summer and keep reading, writing, and studying your math facts.</p>
Optional					

3rd Grade Packet Instructions

May 18th – May 22nd

Parents,

This is our final packet of the year. We are focusing on reading and math skills review. There is no writing for this week's assignments. These assignments will not be turned in at Poet. If you would like your teacher to grade the assignments, please email a picture or complete them on Classkick.

Have a great summer and keep reading!!!

Your Teachers,

Mrs. Cody, Ms. Rieman and Mr. Thomas

Monday

Reading

Complete 20 minutes of independent reading - Reading may be a picture book or a chapter book that you read over multiple days. www.getepic.com is another way to find 1000's of books to choose from.

Write a reflection on the Reading Log in the packet for your 20 minutes of reading.

- you are **required** to do three total reflections on the form for the week, although you may choose to do all five.

Complete the Grammar page on compound words and final syllables. Read the directions carefully for guidance.

Math

Complete the Monday Spiral review in this packet.

Tuesday

Reading

Complete 20 minutes of independent reading - Reading may be a picture book or a chapter book that you read over multiple days. www.getepic.com is another way to find 1000's of books to choose from.

Write a reflection on the Reading Log in the packet for your 20 minutes of reading.

Complete the Grammar page on prefixes and root words. Read the directions carefully for guidance.

Math

Complete the Tuesday Spiral review in this packet.

Wednesday

Reading

Complete 20 minutes of independent reading - Reading may be a picture book or a chapter book that you read over multiple days. www.getepic.com is another way to find 1000's of books to choose from.

Write a reflection on the Reading Log in the packet for your 20 minutes of reading.

Complete the Grammar page on ending suffixes. Read the directions carefully for guidance.

Math

Complete the Wednesday Spiral review in this packet.

Thursday

Reading

Complete 20 minutes of independent reading - Reading may be a picture book or a chapter book that you read over multiple days. www.getepic.com is another way to find 1000's of books to choose from.

Write a reflection on the Reading Log in the packet for your 20 minutes of reading.

Math

Complete the Thursday Spiral review in this packet.

Friday

Reading

Complete 20 minutes of independent reading - Reading may be a picture book or a chapter book that you read over multiple days. www.getepic.com is another way to find 1000's of books to choose from.

Write a reflection on the Reading Log in the packet for your 20 minutes of reading.

Book Title: _____

Author: _____

MONDAY

Book Title: _____

Author: _____

TUESDAY

Book Title: _____

Author: _____

WEDNESDAY

Book Title: _____

Author: _____

THURSDAY

Book Log

Directions: Three times a week, I would like you to reflect on your 20 minute reading. Please include the title, author, and complete one of the following:

- *Ask two questions you have about the story that haven't been answered yet
- *Make a prediction & support it with clues from the author
- *A two sentence summary about what happened in your reading
- *Identify two story elements in your book or share two interesting facts.

Book Title: _____

Author: _____

FRIDAY

Spiral Math Review

Quarter 4

Week 3 * Monday

Name:

Date:

3. Kaylee has 31 ribbons. Justine has 12 less than Kaylee. How many ribbons do the girls have altogether?

6. Create a picture that shows 3 groups of 4.

3.OA.8

3.OA.1

1. Michael has three times as many seashells as Gary. If Gary has 9 seashells, how many does Michael have?

4. Angel has 4 rows of seeds in his garden. There are 8 seeds in each row. Write an addition sentence and a multiplication sentence to show how many seeds Angel has.


7. $876 - 675 =$

3.OA.3

3.OA.5

3.NBT.2

2. What is the area of the figure below?



= 1 square unit

3.MD.6

5. Compare the numbers. Use $<$, $>$, or $=$.

40×2 20×4

$627 - 293$ $163 + 429$

$72 \div 8$ 4×2

8. $2 \times 3 \times 4 =$

3.NBT.2/3

3.OA.5

Name _____

A. Make a compound word by adding a word part from the word box to the underlined word in each sentence. Write the word parts and compound word on the lines.

paper walks basket day bare

1. It's fun to take off our shoes and go foot at the beach.
 _____ + _____ = _____

2. Where can I buy today's news?
 _____ + _____ = _____

3. His dad will be the new ball coach.
 _____ + _____ = _____

4. I earn extra money by shoveling snow from the side.
 _____ + _____ = _____

5. Let's find the lost dog while we still have plenty of light.
 _____ + _____ = _____

B. Circle the word in each pair that has a consonant + *le*, *el*, *al*, or *il* final syllable. Write the word with a slash to divide the syllables.

1. pencil weekly _____

2. bowl final _____

3. bugle glass _____

4. angel lately _____

Copyright © McGraw-Hill Education

Spiral Math Review

Quarter 4

Week 3 * Tuesday

Name:

Date:

3. Mrs. Kobayashi has 84 paper clips. If she puts equal amounts of paper clips into 12 different bags, how many paper clips will be in each bag?

6. Most cars have 4 wheels. How many cars can be made with 40 wheels?

3.OA.3

3.OA.3

1. Three children can share a pair of scissors for the project. How many children can share 5 pairs of scissors?

4. Which numbers can be placed in the box to make the number sentence true?

7. If the product of 4 and 5 is 20, what is $20 \div 4$?

# of scissors	Children
1	3
2	6
3	9
5	

$$7 \times 3 > \square \times 5$$

3.OA.4

3.OA.4

3.OA.7

2. Find the missing number in the problems below.

5. Mrs. Moorman went to bed at 10:00pm. If it took her 15 minutes to take a shower, 10 minutes to dry her hair, 6 minutes to brush her teeth, and 12 minutes to read a book, at what time did Mrs. Moorman begin getting ready for bed?

$$8. 4 \times 5 \times 2 =$$

$$7 \times \underline{\quad} = 14$$

$$56 \div \underline{\quad} = 8$$

$$\underline{\quad} \div 8 = 4$$

$$\underline{\quad} \times 5 = 15$$

$$6 \times \underline{\quad} = 24$$

$$63 \div \underline{\quad} = 7$$

3.OA.4

3.MD.1

3.OA.5

Name _____

A. Read each sentence. Underline the word that has a prefix. Write the meaning of the word on the line.

1. My model ship fell off the table, and now I have to rebuild it.

2. Of all the vegetables on the table, I dislike peas the most.

3. Before my sister started kindergarten, she went to preschool.

4. When I fell into the mud puddle, I knew I was having an unlucky day.

5. I lost my copy of the story, so I need to reprint it before class.

B. Related words have a common root or base word.

Read each set of words. Circle the words that have a common root or base word.

1. alike

unlike

click

2. precook

pretty

cooking

3. halfway

unhappy

happily

4. review

viewing

voting

5. unlucky

cluck

luckily

Spiral Math Review

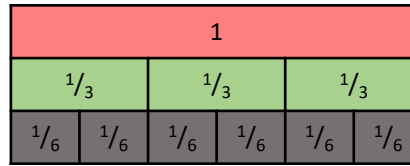
Quarter 4

Week 3 * Wednesday

Name: _____

Date: _____

3. What is an equivalent fraction for $\frac{2}{3}$?



6. Compare the numbers. Use $<$, $>$, or $=$.

$3 \div 3$ ○ 9×0

$385 - 102$ ○ $132 + 184$

6×7 ○ 9×5

3.NF.3b

3.NBT.2/3.OA.7

1. Find the missing numbers for each problem below.

$7 \times \underline{\quad} = 56$

$\underline{\quad} \div 6 = 7$

$16 \div \underline{\quad} = 4$

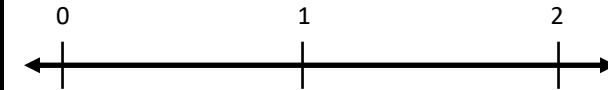
$8 \times 3 = \underline{\quad}$

3.OA.4

4. Round 6,482 to the nearest hundred.

3.NBT.1

7. Place $\frac{1}{2}$ on the number line below.

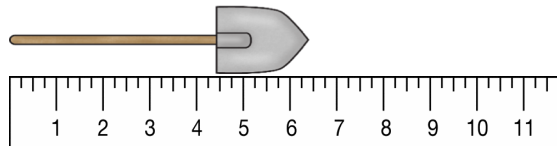


3.NF.2

2. Each daisy in the flower shop has 5 petals. How many daisies are in the flower shop if there are 35 petals total?


3.OA.3

5. Measure the length of the shovel to the nearest $\frac{1}{2}$ inch. Use the ruler below.



3.MD.4

8. What is the area of the figure below?



□ = 1 square unit

3.MD.6

Name _____

A. Add the endings to each word. Write the new word on the line. Pay attention to possible spelling changes.

1. try + ing = _____

2. dry + ed = _____

3. hurry + s = _____

4. play + ing = _____

5. study + ed = _____

B. Match a word in the box to each meaning below. Write the word on the line. Not all words will be used.

liveliness	respectful	delightful	respectless
colorless	happiness	colorful	soundless

1. without color _____

2. state of being happy _____

3. full of delight _____

4. without sound _____

5. state of being lively _____

6. full of respect _____

Spiral Math Review

Quarter 4

Week 3 * Thursday


Name:

Date:

3. Fill in the missing number.

$$63 \div \square = 9$$

6. What fraction of the circles below are NOT shaded in?



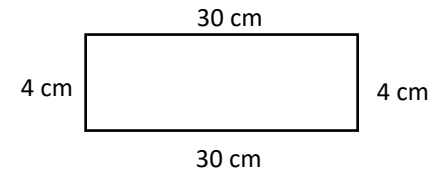
3.OA.4

3.NF.1

1. $5 \times 3 \times 2 =$

4. Kian's book has 324 pages. He read 23 on Monday and 53 on Tuesday. If he wants to read the rest of the book on Wednesday, how many pages does Kian need to read?

7. What is the area of the rectangle below?




3.OA.5

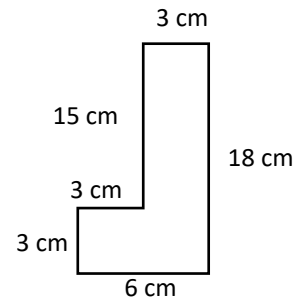
3.OA.8

3.MD.7b

2. Place $\frac{1}{3}$ on the number line below.



5. What is the perimeter of the figure below?



8. At the craft store, Mary Ann bought 6 packages of blue pom poms. Each package contained 50 blue pom poms. How many blue pom poms did Mary Ann buy in all?

3.NF.2

3.MD.8

3.NBT.3