

## 4<sup>th</sup> Grade Distance Learning Week 5

### ELA

Complete the Fact and Opinion worksheets

- Animal Fact and Opinions
- Football Fact and Opinions

### Math

Multiplication and Division Review

- Long Division - 3-digit dividends, 2 and 3 digit quotients, remainders
- Shape Multiplication
- The Sleeping Bull


Name: \_\_\_\_\_



## Animal Facts and Opinions

Tell whether each sentence is a fact or opinion. Write "fact" next to each statement that gives information that you can prove. Write "opinion" next to statements that tell how someone feels about something.


1. \_\_\_\_\_ A giant tortoise can live to be over 150 years old.
2. \_\_\_\_\_ Jennifer saw a zebra at the zoo.
3. \_\_\_\_\_ A polar bear is the most fun animal to watch.
4. \_\_\_\_\_ Parrots are prettier than blue birds.
5. \_\_\_\_\_ Elephants eat grass and leaves.
6. \_\_\_\_\_ Bald eagles usually lay one or two eggs at a time.
7. \_\_\_\_\_ Blue whales are the largest animals in the world.
8. \_\_\_\_\_ A cheetah can run faster than a lion.
9. \_\_\_\_\_ Everyone should go to see the new gorilla habitat.
10. \_\_\_\_\_ Koalas usually sleep during the day.
11. \_\_\_\_\_ Canaries sing beautifully.
12. \_\_\_\_\_ The bats in the cave are very scary.
13. \_\_\_\_\_ Snakes do not make good pets.
14. \_\_\_\_\_ Chimpanzees can climb to the tops of trees.
15. \_\_\_\_\_ Hummingbirds are the only bird that can fly backwards.
16. \_\_\_\_\_ A rhinoceros can be very difficult to take care of.
17. \_\_\_\_\_ Crocodiles spend most of their time in saltwater.
18. \_\_\_\_\_ Pandas are black and white.
19. \_\_\_\_\_ Hippos are amazing animals to watch.
20. \_\_\_\_\_ A Komodo dragon is a reptile.



Name: \_\_\_\_\_

# Long Division

Three Digit Dividends, 2 and 3-Digit Quotients, Remainders



a.

$$6 \overline{) 939}$$

b.

$$4 \overline{) 154}$$

c.

$$4 \overline{) 295}$$

d.

$$3 \overline{) 328}$$

e.

$$7 \overline{) 750}$$

f.

$$3 \overline{) 743}$$

g.

$$9 \overline{) 840}$$

h.

$$8 \overline{) 429}$$

i.

**There are 8 fish tanks in the pet shop. They just received an order of 216 goldfish. The owner of the pet shop wants each tank to have the same number of fish. How many goldfish will each tank have in it?**

Show your work and label your answer.

ans: \_\_\_\_\_

Name: \_\_\_\_\_

## Football Facts and Opinions



A **fact** is something that can be proven true.

An **opinion** is how someone else feels about something.



Read each statement. Check the correct box to tell if it is a fact or an opinion.

1. The football game was lots of fun yesterday.  fact  opinion
2. Our tickets cost fifty-two dollars.  fact  opinion
3. It was money well-spent.  fact  opinion
4. The quarterback played his best game of the season.  fact  opinion
5. The running back scored three touchdowns.  fact  opinion
6. The kicker scored a field goal before halftime.  fact  opinion
7. The referee blew his whistle and called a penalty.  fact  opinion
8. The referee has been making terrible calls.  fact  opinion
9. We had a terrific view of the game from our seats.  fact  opinion
10. The final quarter was the most exciting of all.  fact  opinion
11. The score was tied until the final minute of the game.  fact  opinion
12. The wide receiver made the final touchdown.  fact  opinion
13. There was cheering in the stands.  fact  opinion
14. Our opponent is the worst team in the league.  fact  opinion
15. Our team will be difficult to beat.  fact  opinion

Name: \_\_\_\_\_

Division with 2-Digit Quotients without Remainders

## The Sleeping Bull

Divide to find the quotients. Then solve the riddle by matching the letters to the blank lines at the bottom of the page.



$$\boxed{\text{L}} \quad 5 \overline{)235}$$

$$\boxed{\text{E}} \quad 7 \overline{)623}$$

$$\boxed{\text{B}} \quad 4 \overline{)148}$$

$$\boxed{\text{L}} \quad 2 \overline{)106}$$

$$\boxed{\text{R}} \quad 5 \overline{)480}$$

$$\boxed{\text{Z}} \quad 3 \overline{)219}$$

$$\boxed{\text{U}} \quad 8 \overline{)304}$$

$$\boxed{\text{A}} \quad 7 \overline{)175}$$

$$\boxed{\text{O}} \quad 9 \overline{)549}$$

$$\boxed{\text{D}} \quad 4 \overline{)220}$$

**What do you call a sleeping bull?**

\_\_\_\_\_

25

\_\_\_\_\_

37

\_\_\_\_\_

38

\_\_\_\_\_

47

\_\_\_\_\_

53

\_\_\_\_\_

55

\_\_\_\_\_

61

\_\_\_\_\_

73

\_\_\_\_\_



89

\_\_\_\_\_

96

Name: \_\_\_\_\_

## Shape Multiplication



Find the product of the numbers in the squares.

Find the product of the numbers in the triangles.

Find the product of the numbers in the trapezoids.

Find the product of the numbers in the hexagons.

Find the product of the numbers in the octagons.

Find the product of the numbers in the circles.