



Name _____

Practice telling time on an analog clock. Record the times in the table.






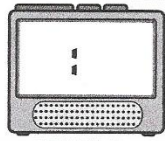


<u>Activity</u>	<u>Time</u>
Woke up	
Ate breakfast	
Brushed teeth	
Watched a tv show	
Finished a chore	
Completed a school assignment	
Played outside	
(your choice)	

NAME _____









DATE _____

Telling Time on Two Kinds of Clocks






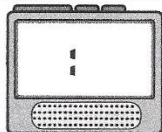
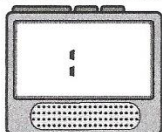
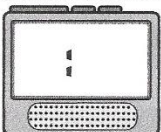
1 Read each of these clock faces and write the time on the digital clock.




<p>a</p> 	<p>b</p> 	<p>c</p> 	<p>d</p> 
			

2 Read each of these digital clocks and mark the time on the clock face.

<p>a</p> 	<p>b</p> 	<p>c</p> 	<p>d</p> 
			

1 Read each of these clock faces and write the time on the digital clock.

a 	b 	c 	d 
			

a 	b 	c 	d 