

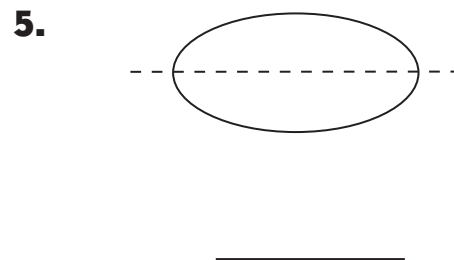
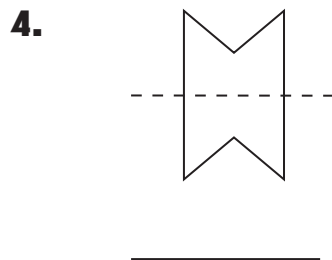
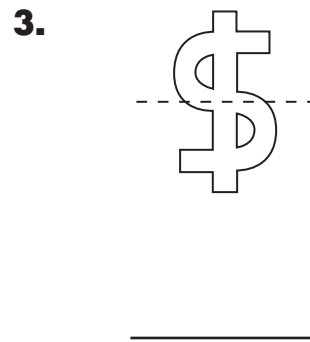
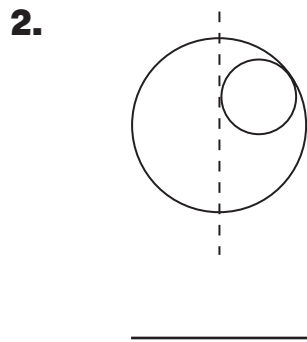
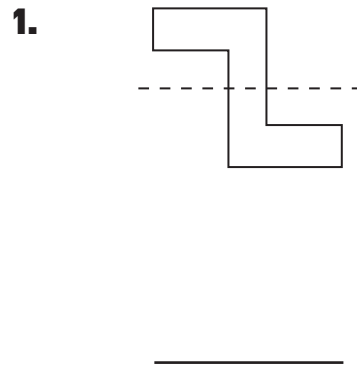
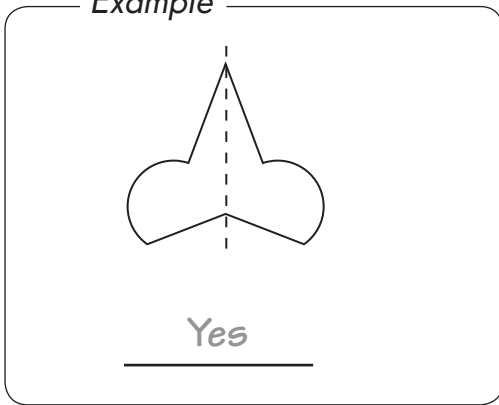
Chapter 13

Symmetry

Practice 1 Identifying Lines of Symmetry

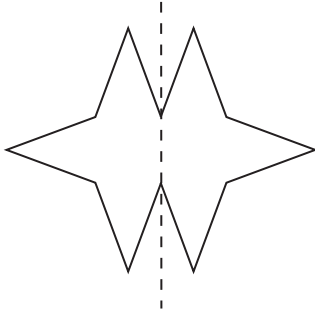
Is the dotted line in each figure a line of symmetry? Write *yes* or *no*.

Example

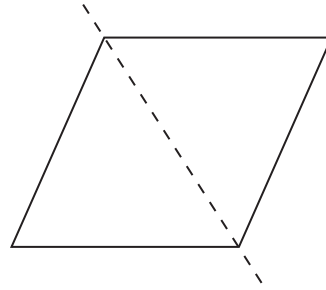


Is the dotted line in each figure a line of symmetry? Write *yes* or *no*.

6.



7.



Look at each letter and number. Which ones have lines of symmetry? Circle your answers.

8. A B C D E F G
- H I J K L M N
- O P Q R S T U
- V W X Y Z 1 2
- 3 4 5 6 7 8 9