







AZ Vocabulary

1. Each **coin** has a name and a value in **cents** or **¢**.
Write each value using the **¢** symbol.

				
half-dollar = 50 cents _____	quarter = 25 cents _____	dime = 10 cents _____	nickel = 5 cents _____	penny = 1 cent _____

2. Count on to find the total value.



Start with the quarter. Write its value below.

Next come two _____. So, count on by _____.

_____¢ and 10¢ more is _____¢ and 10¢ more is _____¢.

So, the total value is _____.

On the Back!

3. Count on to find the total value of a half-dollar, a nickel, a quarter, and a penny.
Draw the coins and write their values to help.