


1 Circle the symbol for equals.

+ > =

2 Circle the ABAB pattern.



3 How many dolphins do you count?




| | | |
|---|---|---|
| 3 | 5 | 2 |
|---|---|---|

4 How many shells altogether?



5 Make a set of 3 dots in the circle.




1 How many sandals are there?



| | | |
|---|---|---|
| 5 | 1 | 2 |
|---|---|---|

2 Make a set of 4 beach balls in the circle.




3 Mark (X) the symbol that means the same or equals.

+ > =


4 Which set shows the same number as this set?



5 How many beach balls altogether?



+



=

3

2

- 1 Count the beach umbrellas.
How many are there?




2

3

5

- 2 Make a set of 4 shells in the circle.



- 3 How many paperclips long is the sandal?



2

3

5



4 Circle the ABAB pattern.



5 How many sandals altogether?



+



= _____

2

1