

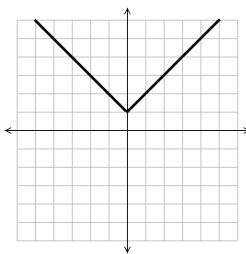
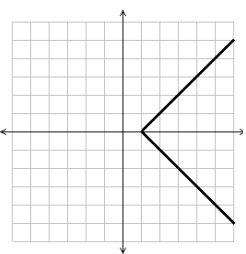
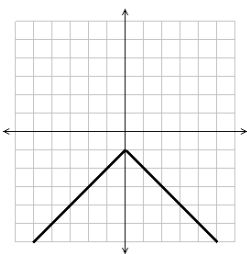
Algebra II Pre-AP Summer Assignment

This assignment is designed to make the transition to Algebra II Pre-AP a smooth one. You will be practicing skills you have acquired in earlier math classes. **The entire assignment is due on the first day of class.**

There will be a test on this material during the first week of school in the Fall.

Directions: In order to receive credit all work must be completed **in pencil**. Remember that we care about process, so show your work carefully on lined paper. **This should include: problem numbers, calculations done neatly, sketches drawn carefully, and labeled answers (circled, underlined, or boxed).** Graphs should be done on **graph paper**. Organize your work into columns and work down, not across the paper. **No Calculators!**

1. Evaluate: $-\frac{a}{3} + (2-b)^2$ when $a = -6$; $b = 4$	2. Evaluate: $ 8-5x -2$ when $x = 2$
3. Simplify: $16-4+12 \div 6 \times 2$	4. Simplify: $2(6x-5(x-1))$
5. Simplify each expression: a. x^4x^8 b. $(x^6)^2$ c. $x^{12}x$ d. $(x^3)x^4$ e. $3x(2x^{11})$ f. $(3x^3)^2$	6. Simplify each expression: a) $\sqrt{50}$ b) $\sqrt{18}$ c) $\sqrt{48}$ d) $\sqrt{24}$ e) $\sqrt{250}$ f) $\sqrt{1000}$
7. Simplify: $\frac{9^6}{9^3} =$	8. Simplify: a) $\frac{25x^2}{5x^5}$ b) $\frac{9x^2y^3}{27x^5y}$
9. Simplify: a) $(4x^2+2x-7)+(2x^2-3x+5)$ b) $(4x^2+2x-7)-(2x^2-3x+5)$	10. Simplify: $(x+4)+(2x-3)(x+5)$
11. Multiply: a) $(x+5)(3x-4)$ b) $(x+5)^2$ c) $(x+1)(x+1)$ d) $(3x-5)^2$	12. Divide: $\frac{3}{7} \div \frac{9}{14}$
13. Solve for x : $ 4x-10 =6$	14. a) Solve for x : $10- x+2 =3$ b) Graph the solution set on a number line.
15. Solve for x : $4x-3(2x-5)=16x$	16. Solve for x : $2(x-4)-4=3(x+7)$
17. Solve the system of equations: $x = -3y + 5$ $2x + 8y = 4$	18. Solve the system of equations. $3x - 5y = 21$ $2x + 10y = -26$
19. Graph the equation $y = -2x - 4$	20. Graph the equation $y = \frac{1}{2}x + 1$
21. Graph the inequality: $y > -2x + 2$	22. Graph $-2x + 3y = 9$ and $4x - 6y = 12$. Are they parallel, perpendicular, or neither?
23. Without graphing, are the graphs of the two equations parallel, perpendicular, or neither? Explain how you can tell. $3x - 5y = 12$ and $5x + 3y = 20$	24. Write an equation that represents a line that is parallel to $y = -\frac{5}{4}x - 9$ and has a y-intercept of 10.
25. What are the x-intercept and the y-intercepts of the line defined by the equation: $-2x + 3y = 24$?	26. What is the equation of the line with slope $\frac{1}{4}$ and goes through the point $(8, -2)$?
27. Which of the given points satisfies the equation $2x + 4y = 8$? a. $(0, 4)$ b. $(-4, 0)$ c. $(2, 1)$ d. $(-4, 2)$	28. What is the equation of the line the goes through $(2, 4)$ and $(3, -1)$?

29. Factor: $a^2 + 3a - 4$	30. Factor: $x^2 - 9x + 20$
31. Factor: $x^2 - 9$	32. Factor: $81a^2 - 25$
33. Solve: $(x + 3)(x - 5) = 0$	34. Find the solutions of this quadratic equation: $x^2 - 3x - 18 = 0$
35. Solve by using the Quadratic Formula: $x^2 + 11x + 28 = 0$	36. Solve by using the Quadratic Formula: (Leave answer in simplest radical form) $x^2 - 3x + 1 = 0$
37. Use the Quadratic Formula to find the solutions to the equation $3x^2 - 11x = -5$. Express the solutions as radicals in simplest form. Be sure to set equation equal to 0 first.	38. Use the Quadratic Formula to find the solutions to the equation $8x^2 + 3x = 1$. Express the solutions as radicals in simplest form. Be sure to set equation equal to 0 first.
39. The total cost (c) in dollars of renting a sod cutter for n days is given by the equation $c = 20 + 60n$. If the total cost of renting the cutter is \$440, for how many days was the cutter rented?	40. A 60-foot-long piece of string is cut into 3 pieces. The second piece is twice as long as the first piece. The third piece is 5 feet longer than the second piece. What is the length of the shortest piece of rope?
41. The lengths of the sides of a triangle are x, $2x + 2$, and 13. If the perimeter of the triangle is 30, what is the value of x?	42. A garden is $4x$ feet long and $5x$ feet wide. Write an expression (in simplest form) that represents the area of the garden.
43. Multiply and express in simplest terms: $\frac{7z^2 + 7z}{4z + 8} \cdot \frac{z^2 - 4}{z^2 + z} =$	44. Divide and express in simplest terms: $\frac{x^2 + 8x + 16}{x + 3} \div \frac{2x + 8}{x^2 - 9}$
45. For which graph are all x values negative? Explain how you can tell.	
a. 	b. 
c. 	d. 